






*George Washington Flowers  
Memorial Collection*

DUKE UNIVERSITY LIBRARY

ESTABLISHED BY THE  
FAMILY OF  
COLONEL FLOWERS



Digitized by the Internet Archive  
in 2010 with funding from  
Duke University Libraries



INTELLECTUAL

ARITHMETIC,

UPON THE

INDUCTIVE METHOD OF INSTRUCTION.

BY WARREN COLBURN, A. M.

WITH AN INTRODUCTION TO WRITTEN ARITHMETIC, BY HIS SON,  
WARREN COLBURN.

---

REVISED AND ADAPTED TO THE USE OF SCHOOLS IN THE  
CONFEDERATE STATES.

BY THOS. O. SUMMERS, D. D.

300 - 87

---

89647

Nashville, Tenn. :

SOUTHERN METHODIST PUBLISHING HOUSE.

1862.

1720

2/5/27  
Budget 7.  
Fr.  
Moderny  
\$1.50  
Psych Research

T. H.  
975.45399  
~~27484~~  
Cm.  
12m  
#47

## INTRODUCTION.

THE first instructions given to the child in Arithmetic, are usually given on the supposition that the child is already able to count. This indeed seems a sufficiently low requisition; and if children were taught to count at home in a proper manner, they would have this power in a sufficient degree when they enter the primary school. But it will be found on trial, that most children, when they begin to go to school, do not know well how to count. This may be proved by requiring them to count 20 beans or grains of corn. Few of them will do it without mistake. The difficulty is, they have been taught to repeat the numerical names, one, two, three, in order, without attaching ideas to them. They learn to count without counting things. This point, then, calls for the teacher's first attention—to lead the child to apprehend the meaning of each numerical word by using it in connection with objects.

The kind of objects to be employed as counters should, of course, be similar, as marks on the blackboard, beans, pieces of wood, or of cork, or the balls in a numeration frame. Provided they are similar, and large enough to be seen without effort by all the class, it is of little consequence what they are: the simpler the better, and those which the teacher devises or makes, will, other things being equal, be best of all. Not more than ten should be used or exhibited to the children in the first few lessons.

### LESSON I.

Let the class have their attention called to the teacher; and when he lays down a counter, where all can see it, let them say *one*; let the teacher lay down another, and the class say *two*; and so on up to ten. If any of the class become inattentive, let the teacher stop at once: and, after the attention is fully centred on him, let him begin again.

After going through this addition a few times in this form, it may be varied thus: The teacher laying down the counters, one by one, as before, the class may be led to say, one and one are two, two and one are three, three and one are four, etc.

The above mode of adding may be shortened by leading the class to say as follows: One and one are two, and one are three, and one are four, etc.

At any time the word designating the counter may be used along with the number, as beans, balls, pieces, marks, or books, as the case may be.

At times, it will be well to give some fictitious designation to the counters, such as the teacher, or still better, such as some one of the class may choose, calling them men, sheep, horses, etc.

89647

Next to Addition, as illustrated above, should come Subtraction. Having counted ten, let the teacher take away one, and the class be made to say, one from ten leaves nine, one from nine leaves eight, etc. In Subtraction, the same variations may be introduced as in Addition. No further illustrations of this operation need be given, as the teacher's discretion will supply all that is necessary.

In connection with these exercises, let the pupil be taught to repeat in reversed order the numerical words they have employed, counting from one up to ten, and then in reverse order from ten to one.

It is not to be supposed that the whole of the foregoing lesson can be learned at one exercise. It is only a small part of it that children will at first have sufficient power of attention to go over with profit. The same remark may be made respecting the following Introductory Lessons.

## LESSON II.

Let the teacher call the attention of the class, and require them to count, and then lay down, one by one, a small number of counters, say, for example, five; then let him separate them into two parts, as one and four, thus, ● ●●●●, and say, "*one and four are five,*" and require the class to say the same. Then let him divide the number into different parts, as two and three, three and two, four and one, one and one and three, etc., requiring the class with each division to name the parts and make the addition. Let them always begin at the left end of the line of counters as they face them. Having exhausted the combinations of five, let the number six be taken, giving combinations like the following: ●●●●●●; ●●●●●●; ●●●●●●; ●●●●●●; ●●●●●●; ●●●●●●; ●●●●●●; etc.

It may be found that a lower number than five should be made the first step in this exercise.

After the combinations of six have been exhausted, the number seven may be taken, and then successively, eight, nine, and ten.

As a part of this Lesson, each question in addition should be converted into a question in subtraction; thus *five and three are eight*; then, having put the two parts together, which make eight, remove the three, and lead the class to say, "*three from eight leaves five.*"

The following exercise is important in this connection. Let the teacher select some number, and give one part of it, and require the class as quick as possible to name the complementary part. Thus let six be the number, the exercise will be as follows: Teacher: "Now attend, six is the number; I am going to name one part of it; when you hear me name it, do you all name the other part as quick as you can; now be ready; *five.*" Class: "*One.*" Teacher: "*Four.*" Class: "*Two.*" Teacher: "*Three.*" Class: "*Three.*" Teacher: "*One*" Class: "*Five,*" etc.

This exercise should not be pressed too fast, but carried on gradually, as the pupil's strength of mind will allow. Special pains should be taken that the number *ten* be perfectly mastered in this form of combining its parts. This will give the pupil the most important aid in all his calculations in larger numbers.



## LESSON III.

For a number of days after beginning the foregoing exercises, the child should not have the book at all in his hands. If the child has the book in his possession, it will be well for the teacher to take it for a few days, and let the pupil employ himself at his seat in writing on a slate, or with other books. In this way, the child has awakened within him the idea of calculation in numbers, without having become wearied with the reading of what excites no interest. After a few days, however, the book may be put into the pupil's hands, and he may be directed to get a lesson in Section I. In the meanwhile, the Introductory Lessons should be continued, and form a part of each day's exercise till they are finished. In this way, the pupil, in studying his first lesson from the book, will already have learned the use of counters, and will naturally resort to them at his seat, using beans or marks on his slate for this purpose. It will be far better for him to come to the use of counters in this natural way, than to be enjoined to use them before he has been interested in witnessing their application.

The pupil, in the preceding lessons, has become acquainted with all the numbers as far as ten, regarding them either as units, or as grouped into parts of a larger whole. The next step is to carry him through the numbers from ten to twenty.

First, let the class count with the objects before them from one up to twenty; then, removing all but ten, let the ten be grouped in a pile; or if they are marks on the board, let them be enclosed by a line drawn around them, and begin to count upward from ten, "One and ten are eleven; two and ten are twelve; three and ten are thirteen." Here pause, and examine the composition of the word, thirteen—three ten, or three and ten. Show how the three is spelt in thirteen, and also how the ten is spelt. Then proceed "four and ten are fourteen," examining the word as in the former case; "five and ten are fifteen; six and ten are"—perhaps some one in the class will now be able to give the compound word; then go on, "seven and ten, eight and ten, nine and ten, ten and ten."

When they can give the compound words readily from the simple ones, then give them the compound word, and let the class separate it into its two component words; thus: Teacher: "Seventeen." Class: "Seven and ten," etc. Thus far let the teacher be careful to present the name of the smaller of the two numbers first, for that is the order in which the compound word presents them; let the teacher say four and ten, and not ten and four. After the class have caught the analogy between the simple words, and the compounds which they form, so that one instantly suggests to them the other, then the order of the words may be changed, and the ten put first. The caution here suggested may seem to some unnecessary; but a careful observation of the mental habits of children will not fail, I think, to show its importance.

In the analysis of the compound words from ten to twenty, eleven and twelve should be omitted till the last; for as the simple words of which they are formed are disguised or obsolete, they tend to obscure, rather than elucidate the subject to the mind of a child. Having obtained the idea through the other words in the series, he may take the statement respecting these on trust.

## LESSON IV.

Having counted twenty, and grouped the number in two tens, let the class count ten more, making in all thirty, or three tens. Keeping the tens separate, let the class count ten more, making forty, or four tens. Let the class then answer such questions as the following: Twenty are how many tens? Thirty are how many tens? Forty are how many tens? Four tens are what number? Three tens are what number? Two tens are what number?

After this, they may proceed with the higher multiples of ten, fifty, sixty, seventy, eighty, ninety, a hundred.

Through the whole of this exercise, each multiple of ten should be presented in groups of ten, so as to aid the idea by the visible representation.

The pupils should be led to see the significance of each numerical name; that *thirty-seven*, for example, means three tens and seven; *fifty-six* means five tens and six.

In this way the pupil may be led to understand the Decimal Ratio, at this early stage, and no further trouble need be taken in that direction. When in a latter stage of study, he comes to the Decimal notation in written Arithmetic, he will find it only a natural mode of expressing ideas already rendered familiar in practice.

## LESSON V.

Let the teacher stand at the board, and call the attention of the class to what he shall write; then, making two marks, ask, "How many marks on the board?" When the class have answered, let the teacher write two more, and ask, "How many now?" and so on to the number of twelve or more. Then take a writing-book or sheet of paper, and covering all but two of the marks, let the class repeat the same process while the teacher removes the book, so as to bring two more into view at each remove; the numbers read by the class being two, four, six, eight, ten, etc. Then let the process be reversed, subtracting two successively, which gives, beginning with sixteen, the following: sixteen, fourteen, twelve, ten, etc.

{	

Again, the teacher may say to the class, "When I made those marks, how many did I make at a time?" Class: "Two." Teacher: "Did I make two more than once?" Class: "Yes, sir, a good many times." Then the teacher, covering up all but two: "Now look, how many times two are there?" Class: "Once." Teacher: "Once two are how many?" Then, after the class have answered, showing two more, "How many times two do you see?" "Twice two are how many?" Then go on in the same way with three twos, four twos, etc., to the end.

At this point the pupils may be taught the distinction between even and odd numbers, and be trained to repeat rapidly the even numbers, from two up to twenty.

The pupils may derive important aid in adding and multiplying, by grouping the numerical names with the voice, in something like the following manner: Teacher: "Listen now to me; *one*,

*two—three, four—five, six.* How many twos did I count?" Class: "Three twos." Teacher: "Count three twos just as I did." Then let the teacher ask, "Three times two are how many?" Then require them to count four twos, five twos, etc. This method may be brought in aid of all their earlier attempts in adding and multiplying.

Care should be taken in this exercise that the words be pronounced in a quick and neat manner, with a distinct pause between the groups. If rightly conducted, this exercise furnishes one of the best aids for overcoming the habit of counting, instead of adding—that fatal clog which keeps back many scholars in arithmetic from making any rapid progress.

The successive additions of two, beginning with one, furnish the series of odd numbers. This and the preceding exercise exhibit all the results made by the additions of the number two.

		eleven.
		nine.
		seven.
		five.
		three.
		one.

The pupil should, in connection with this exercise, be taught to group the numerical names, by twos, beginning from one, so as to furnish the series of odd numbers, thus: one—two, three—four, five, etc.

Finally, let him count the even series, up to twenty, and then down, till he can do it readily.

Let him count the odd series up to twenty-one, up and down.

## LESSON VI.

To teach the pupils to add the number three, let the teacher make three marks on the board, and require the class to name the number; then three more, and so on. Then, covering all but the lower three, let the class name the number in view, as the teacher exhibits successively three more at each remove, or three less.

The pupils may then be led to count in groups of three; thus: *one, two, three—four, five, six—seven, eight, nine*, etc.

From this, they may be readily led to name the multiples of three; *three, six, nine, twelve*, etc.


The first variation from the above method in the addition of three may be made by beginning with two, which gives the following numbers. In order to secure the necessary amount of repetition in these exercises, and yet to avoid weariness, it will be well often to change the manner of adding. Thus, in the accompanying example, the pupils may simply name the series made by the successive additions; as two, five, eight, eleven, fourteen; or, they may state the process more fully, thus: two and three are five, and three are eight, and three are eleven, etc. A still fuller statement of the operation would be thus: two and three are five, five and three are eight, eight and three are eleven, etc. The only remaining variety in

			fourteen.
			eleven.
			eight.
			five.
			two.

adding three will be exhibited by beginning with one, which may be illustrated in the same way as the others, giving the numbers, *one, four, seven, ten*, etc.

## LESSON VII.

After the numbers have been mastered in the manner above suggested, they should be combined in a variety of ways by means of marks on the board. The columns of marks subjoined are given merely as examples and hints on this point.



A single column may be made to furnish exercise sufficient for a recitation; for, by adding or erasing a single mark at the beginning, a change is made through the whole.

# ARITHMETIC.

---

## PART I.

### SECTION I.

A.\* 1. How many thumbs have you on your right hand? how many on your left? how many on both together?

2. How many hands have you?

3. If you have two nuts in one hand, and one in the other, how many have you in both?

4. How many fingers have you on one hand?

5. If you count the thumb with the fingers, how many will it make?

6. If you shut your thumb and one finger, and leave the rest open, how many will be open?

7. If you have two cents in one hand, and two in the other, how many have you in both?

8. James has two apples, and William has three; if James gives his apples to William, how many will William have?

9. If you count all the fingers on one hand, and two on the other, how many will there be?

10. George has three dimes, and Joseph has four; how many have they both together?

11. Robert gave five cents for an orange, and two for an apple; how many did he give for both?

12. If a custard costs six cents, and an apple two cents, how many cents will it take to buy an apple and a custard?

13. If you buy a pint of nuts for five cents, and an orange for three cents, how many cents would you give

---

\* The first questions in this section are intended for very young children. It will be well for the instructor to give a great many more of this kind. Older pupils may omit these.

for both? how many more for the nuts than for the orange?

14. If an ounce of figs is worth six cents, and a half a pint of cherries is worth three cents, how much are they both worth?

15. Joseph had five plums, and John gave him four more; how many had he then?

16. How many fingers have you on both hands?

17. How many fingers and thumbs have you on both hands?

18. If you had six marbles in one hand, and four in the other, how many would you have in the one more than in the other? how many would you have in both hands?

19. David had seven nuts, and gave three of them to George; how many had he left?

20. Two boys, James and Robert, played at marbles; when they began, they had seven apiece, and when they had done, James had won four; how many had each then?

21. A boy, having eleven nuts, gave away three of them; how many had he left?

22. If you had eight dimes and your papa should give you five more, how many would you have?

23. A man bought a sheep for eight dollars, and a calf for seven dollars; what did he give for both?

24. A man bought a barrel of flour for eight dollars, and sold it for four dollars more than he gave for it; how much did he sell it for.

25. A man bought a hundred weight of sugar for nine dollars, and a barrel of flour for seven dollars; how much did he give for the whole?

26. A man bought three barrels of cider for eight dollars, and ten bushels of apples for nine dollars; how much did he give for the whole?

27. A man bought a firkin of butter for twelve dollars, but, it being damaged, he sold it again for eight dollars; how much did he lose?

28. A man bought three sheep for fifteen dollars, but could not sell them again for so much by eight dollars; how much did he sell them for?

29. A man bought sixteen pounds of coffee, and lost seven pounds of it as he was carrying it home; how much had he left?

30. A man bought nineteen pounds of sugar, and having lost a part of it, he found he had nine pounds left; how much had he lost?

31. A man, owing fifteen dollars, paid nine dollars of it; how much did he then owe?

32. A man, owing seventeen dollars, paid all but seven dollars; how much did he pay?

- B. 1. Two and one are how many?  
2. Two and two are how many?  
3. Three and two are how many?  
4. Four and two are how many?  
5. Five and two are how many?  
6. Six and two are how many?  
7. Seven and two are how many?  
8. Eight and two are how many?  
9. Nine and two are how many?  
10. Ten and two are how many?  
11. Two and three are how many?  
12. Three and three are how many?  
13. Four and three are how many?  
14. Five and three are how many?  
15. Six and three are how many?  
16. Seven and three are how many?  
17. Eight and three are how many?  
18. Nine and three are how many?  
19. Ten and three are how many?  
20. Two and four are how many?  
21. Three and four are how many?  
22. Four and four are how many?  
23. Five and four are how many?  
24. Six and four are how many?

25. Seven and four are how many ?
26. Eight and four are how many ?
27. Nine and four are how many ?
28. Ten and four are how many ?
29. Two and five are how many ?
30. Three and five are how many ?
31. Four and five are how many ?
32. Five and five are how many ?
33. Six and five are how many ?
34. Seven and five are how many ?
35. Eight and five are how many ?
36. Nine and five are how many ?
37. Ten and five are how many ?
38. Two and six are how many ?
39. Three and six are how many ?
40. Four and six are how many ?
41. Five and six are how many ?
42. Six and six are how many ?
43. Seven and six are how many ?
44. Eight and six are how many ?
45. Nine and six are how many ?
46. Ten and six are how many ?
47. Two and seven are how many ?
48. Three and seven are how many ?
49. Four and seven are how many ?
50. Five and seven are how many ?
51. Six and seven are how many ?
52. Seven and seven are how many ?
53. Eight and seven are how many ?
54. Nine and seven are how many ?
55. Ten and seven are how many ?
56. Two and eight are how many ?
57. Three and eight are how many ?
58. Four and eight are how many ?
59. Five and eight are how many ?
60. Six and eight are how many ?
61. Seven and eight are how many ?
62. Eight and eight are how many ?



63. Nine and eight are how many?
64. Ten and eight are how many?
65. Two and nine are how many?
66. Three and nine are how many?
67. Four and nine are how many?
68. Five and nine are how many?
69. Six and nine are how many?
70. Seven and nine are how many?
71. Eight and nine are how many?
72. Nine and nine are how many?
73. Ten and nine are how many?
74. Two and ten are how many?
75. Three and ten are how many?
76. Four and ten are how many?
77. Five and ten are how many?
78. Six and ten are how many?
79. Seven and ten are how many?
80. Eight and ten are how many?
81. Nine and ten are how many?
82. Ten and ten are how many?

- C.
1. Two and one are how many?
  2. Two and two are how many?
  3. Three and two are how many?
  4. Five and two are how many?
  5. Four and two are how many?
  6. Six and two are how many?
  7. Eight and two are how many?
  8. Five and three are how many?
  9. Seven and three are how many?
  10. Four and three are how many?
  11. Two and three are how many?
  12. Two and six are how many?
  13. Two and eight are how many?
  14. Six and three are how many?
  15. Three and four are how many?
  16. Three and six are how many?
  17. Two and seven are how many?

18. Ten and two are how many?
19. Two and four are how many?
20. Three and seven are how many?
21. Four and four are how many?
22. Five and four are how many?
23. Seven and two are how many?
24. Two and five are how many?
25. Three and three are how many?
26. Four and five are how many?
27. Nine and two are how many?
28. Three and five are how many?
29. Two and ten are how many?
30. Three and eight are how many?
31. Ten and three are how many?
32. Two and nine are how many?
33. Four and six are how many?
34. Eight and three are how many?
35. Seven and four are how many?
36. Nine and three are how many?
37. Six and four are how many?
38. Five and five are how many?
39. Three and nine are how many?
40. Four and seven are how many?
41. Six and five are how many?
42. Three and ten are how many?
43. Eight and four are how many?
44. Five and eight are how many?
45. Four and nine are how many?
46. Five and six are how many?
47. Ten and four are how many?
48. Seven and five are how many?
49. Six and six are how many?
50. Nine and four are how many?
51. Eight and five are how many?
52. Five and nine are how many?
53. Four and ten are how many?
54. Six and seven are how many?
55. Four and eight are how many?

56. Nine and five are how many ?
57. Six and eight are how many ?
58. Ten and five are how many ?
59. Seven and six are how many ?
60. Eight and seven are how many ?
61. Six and nine are how many ?
62. Seven and seven are how many ?
63. Eight and six are how many ?
64. Ten and six are how many ?
65. Eight and eight are how many ?
66. Nine and seven are how many ?
67. Ten and eight are how many ?
68. Six and ten are how many ?
69. Five and seven are how many ?
70. Nine and six are how many ?
71. Seven and eight are how many ?
72. Eight and nine are how many ?
73. Nine and nine are how many ?
74. Five and ten are how many ?
75. Seven and nine are how many ?
76. Nine and eight are how many ?
77. Eight and ten are how many ?
78. Ten and nine are how many ?
79. Seven and ten are how many ?
80. Nine and ten are how many ?
81. Ten and ten are how many ?

D. 1. Three boys, Peter, John, and Oliver, gave some money to a beggar. Peter gave seven cents, John, four cents, and Oliver three cents; how many did they all give him ?

2. How many did Peter give more than Oliver ?

3. Frank had nine pears, and gave three of them to Harry; how many had he left; and how many more than Harry had he then ?

4. John had ten peaches, Harry twelve, and Charles thirteen; John gave three to Stephen, Harry gave him six, and Charles gave him five; how many had Stephen? and how many had each left ?

5. A boy had twenty apples, and gave them to his companions, as follows: to one he gave three; to another, two; to another four; and to another, five; how many did he give away? and how many had he left?

6. A boy gave to one of his companions eight peaches; to another, six; to another, four; and kept two himself; how many had he at first?

7. A boy went to the confectioner's and bought three cakes of gingerbread, for which he gave a cent apiece; two buns, for which he gave three cents apiece; one custard for four cents, and one orange for six cents; how many cents did he spend for the whole?

8. A boy having twenty-five cents, bought one quart of cherries for eight cents, one orange for six cents, and gave away three cents; how many cents had he left?

9. A boy bought a box for eighteen cents, and gave eight cents to have it painted, and then sold it for thirty-two cents; how much did he gain by the bargain?

10. A man bought a sleigh for seventeen dollars, and gave nine dollars to have it repaired and painted, and then sold it for twenty-three dollars; how much did he lose by the bargain?

11. Eleven and two are how many?

12. Eleven and three are how many?

13. Eleven and four are how many?

14. Eleven and five are how many?

15. Eleven and six are how many?

16. Eleven and seven are how many?

17. Eleven and eight are how many?

18. Eleven and nine are how many?

19. Eleven and ten are how many?

20. Twelve and two are how many?

21. Twelve and three are how many?

22. Twelve and four are how many?

23. Twelve and five are how many?
24. Twelve and six are how many?
25. Twelve and seven are how many?
26. Twelve and eight are how many?
27. Twelve and nine are how many?
28. Twelve and ten are how many?
29. Thirteen and two are how many?
30. Thirteen and three are how many?
31. Thirteen and four are how many?
32. Thirteen and five are how many?
33. Thirteen and six are how many?
34. Thirteen and seven are how many?
35. Fourteen and two are how many?
36. Fourteen and three are how many?
37. Fourteen and four are how many?
38. Fourteen and five are how many?
39. Fourteen and six are how many?
40. Fifteen and two are how many?
41. Fifteen and three are how many?
42. Fifteen and four are how many?
43. Fifteen and five are how many?
44. Sixteen and two are how many?
45. Sixteen and three are how many?
46. Sixteen and four are how many?
47. Seventeen and two are how many?
48. Seventeen and three are how many?
49. Eighteen and two are how many?

E. 1. A man bought a sheep for nine dollars, and to pay for it he gave five bushels of corn worth four dollars and the rest in money; how much money did he pay?

2. If a barrel of flour is worth eight dollars, and a hundred weight of sugar is worth twelve dollars; how much more is the sugar worth than the flour?

3. If a man had eleven dollars, and should buy three bushels of corn for five dollars; how much money would he have left?

4. A man bought a firkin of butter for fifteen dollars, but it being damaged he was willing to sell it again for eight dollars less than he gave for it; what did he sell it for?

5. A man bought three barrels of flour for eighteen dollars, and sold it again for eleven dollars; what did he lose by the bargain?

6. A man bought a keg of tobacco for thirteen dollars, and sold it again for eighteen; what did he gain by the bargain?

7. Five less two are how many?
8. Seven less three are how many?
9. Three less three are how many?
10. Nine less three are how many?
11. Six less two are how many?
12. Seven less four are how many?
13. Eight less three are how many?
14. Five less four are how many?
15. Seven less five are how many?
16. Nine less five are how many?
17. Eight less six are how many?
18. Eleven less two are how many?
19. Twelve less four are how many?
20. Ten less seven are how many?
21. Thirteen less five are how many?
22. Fourteen less eight are how many?
23. Twelve less seven are how many?
24. Seventeen less five are how many?
25. Eighteen less ten are how many?
26. Thirteen less seven are how many?
27. Sixteen less seven are how many?
28. Fifteen less seven are how many?
29. Nineteen less six are how many?
30. Eighteen less five are how many?
31. Seventeen less eight are how many?
32. Fourteen less nine are how many?
33. Sixteen less five are how many?

34. Fifteen less eight are how many?
35. Fourteen less nine are how many?
36. Sixteen less ten are how many?
37. Seventeen less nine are how many?
38. Eighteen less seven are how many?

F. 1. How many are nine and two? Nineteen and two? Twenty-nine and two? Thirty-nine and two? Forty-nine and two? Fifty-nine and two? Sixty-nine and two? Seventy-nine and two? Eighty-nine and two? Ninety-nine and two?

2. How many are nine and three? Nineteen and three? Twenty-nine and three? Thirty-nine and three? Forty-nine and three? Fifty-nine and three? Sixty-nine and three? Seventy-nine and three? Eighty-nine and three? Ninety-nine and three?

3. How many are nine and four? Nineteen and four? Twenty-nine and four? Thirty-nine and four? Forty-nine and four? Fifty-nine and four? Sixty-nine and four? Seventy-nine and four? Eighty-nine and four? Ninety-nine and four?

4. How many are nine and five? Nineteen and five? Twenty-nine and five? Thirty-nine and five? Forty-nine and five? Fifty-nine and five? Sixty-nine and five? Seventy-nine and five? Eighty-nine and five? Ninety-nine and five?

5. How many are nine and six? Nineteen and six? Twenty-nine and six? Thirty-nine and six? Forty-nine and six? Fifty-nine and six? Sixty-nine and six? Seventy-nine and six? Eighty-nine and six? Ninety-nine and six?

6. How many are nine and seven? Nineteen and seven? Twenty-nine and seven? Thirty-nine and seven? Forty-nine and seven? Fifty-nine and seven? Sixty-nine and seven? Seventy-nine and seven? Eighty-nine and seven? Ninety-nine and seven?

7. How many are nine and eight? Nineteen and eight? Twenty-nine and eight? Thirty-nine and eight?

Forty-nine and eight? Fifty-nine and eight? Sixty-nine and eight? Seventy-nine and eight? Eighty-nine and eight? Ninety-nine and eight?

8. How many are nine and nine? Nineteen and nine? Twenty-nine and nine? Thirty-nine and nine? Forty-nine and nine? Fifty-nine and nine? Sixty-nine and nine? Seventy-nine and nine? Eighty-nine and nine? Ninety-nine and nine?

9. How many are nine and ten? Nineteen and ten? Twenty-nine and ten? Thirty-nine and ten? Forty-nine and ten? Fifty-nine and ten? Sixty-nine and ten? Seventy-nine and ten? Eighty-nine and ten? Ninety-nine and ten?

10. How many are eight and three? Eighteen and three? Twenty-eight and three? Thirty-eight and three? Forty-eight and three? Fifty-eight and three? Sixty-eight and three? Seventy-eight and three? Eighty-eight and three? Ninety-eight and three?

11. How many are eight and four? Eighteen and four? Twenty-eight and four? Thirty-eight and four? Forty-eight and four? Fifty-eight and four? Sixty-eight and four? Seventy-eight and four? Eighty-eight and four? Ninety-eight and four?

12. How many are eight and five? Eighteen and five? Twenty-eight and five? Thirty-eight and five? Forty-eight and five? Fifty-eight and five? Sixty-eight and five? Seventy-eight and five? Eighty-eight and five? Ninety-eight and five?

13. How many are eight and six? Eighteen and six? Twenty-eight and six? Thirty-eight and six? Forty-eight and six? Fifty-eight and six? Sixty-eight and six? Seventy-eight and six? Eighty-eight and six? Ninety-eight and six?

14. How many are eight and seven? Eighteen and seven? Twenty-eight and seven? Thirty-eight and seven? Forty-eight and seven? Fifty-eight and seven? Sixty-eight and seven? Seventy-eight and seven? Eighty-eight and seven? Ninety-eight and seven?



15. How many are eight and eight? Eighteen and eight? Twenty-eight and eight? Thirty-eight and eight? Forty-eight and eight? Fifty-eight and eight? Sixty-eight and eight? Seventy-eight and eight? Ninety-eight and eight?

16. How many are eight and nine? Eighteen and nine? Twenty-eight and nine? Thirty-eight and nine? Forty-eight and nine? Fifty-eight and nine? Sixty-eight and nine? Seventy-eight and nine? Eighty-eight and nine? Ninety eight and nine?

17. How many are seven and four? Seventeen and four? Twenty-seven and four? Thirty-seven and four? Forty-seven and four? Fifty-seven and four? Sixty-seven and four? Seventy-seven and four? Eighty seven and four? Ninety-seven and four?

18. How many are seven and five? Seventeen and five? Twenty-seven and five? Thirty-seven and five? Forty-seven and five? Fifty-seven and five? Sixty-seven and five? Seventy-seven and five? Eighty-seven and five? Ninety-seven and five?

19. How many are seven and six? Seventeen and six? Twenty-seven and six? Thirty-seven and six? Forty-seven and six? Fifty-seven and six? Sixty-seven and six? Seventy-seven and six? Eighty-seven and six? Ninety-seven and six?

20. How many are seven and seven? Seventeen and seven? Twenty-seven and seven? Thirty-seven and seven? Forty-seven and seven? Fifty-seven and seven? Sixty-seven and seven? Seventy-seven and seven? Eighty-seven and seven? Ninety-seven and seven?

21. How many are seven and eight? Seventeen and eight? Twenty-seven and eight? Thirty-seven and eight? Forty-seven and eight? Fifty-seven and eight? Sixty-seven and eight? Seventy-seven and eight? Eighty-seven and eight? Ninety seven and eight?

22. How many are seven and nine? Seventeen and nine? Twenty-seven and nine? Thirty-seven and nine? Forty-seven and nine? Fifty-seven and nine? Sixty-

seven and nine? Seventy-seven and nine? Eighty-seven and nine? Ninety-seven and nine?

23. How many are six and five? Sixteen and five? Twenty-six and five? Thirty-six and five? Forty-six and five? Fifty-six and five? Sixty-six and five? Seventy-six and five? Eighty-six and five? Ninety-six and five?

24. How many are six and six? Sixteen and six? Twenty-six and six? Thirty-six and six? Forty-six and six? Fifty-six and six? Sixty-six and six? Seventy-six and six? Eighty-six and six? Ninety-six and six?

25. How many are six and seven? Sixteen and seven? Twenty-six and seven? Thirty-six and seven? Forty-six and seven? Fifty-six and seven? Sixty-six and seven? Seventy-six and seven? Eighty-six and seven? Ninety-six and seven?

26. How many are six and eight? Sixteen and eight? Twenty-six and eight? Thirty-six and eight? Forty-six and eight? Fifty-six and eight? Sixty-six and eight? Seventy-six and eight? Eighty-six and eight? Ninety-six and eight?

27. How many are six and nine? Sixteen and nine? Twenty-six and nine? Thirty-six and nine? Forty-six and nine? Fifty-six and nine? Sixty-six and nine? Seventy-six and nine? Eighty-six and nine? Ninety-six and nine?

28. How many are five and six? Fifteen and six? Twenty-five and six? Thirty-five and six? Forty-five and six? Fifty-five and six? Sixty-five and six? Seventy-five and six? Eighty-five and six? Ninety-five and six?

29. How many are five and seven? Fifteen and seven? Twenty-five and seven? Thirty-five and seven? Forty-five and seven? Fifty-five and seven? Sixty-five and seven? Seventy-five and seven? Eighty-five and seven? Ninety-five and seven?

30. How many are five and eight? Fifteen and eight? Twenty-five and eight? Thirty-five and eight?

Forty-five and eight? Fifty-five and eight? Sixty-five and eight? Seventy-five and eight? Eighty-five and eight? Ninety-five and eight?

31. How many are five and nine? Fifteen and nine? Twenty-five and nine? Thirty-five and nine? Forty-five and nine? Fifty-five and nine? Sixty-five and nine? Seventy-five and nine? Eighty-five and nine? Ninety-five and nine?

32. How many are four and seven? Fourteen and seven? Twenty-four and seven? Thirty-four and seven? Forty-four and seven? Fifty-four and seven? Sixty-four and seven? Seventy-four and seven? Eighty-four and seven? Ninety-four and seven?

33. How many are four and eight? Fourteen and eight? Twenty-four and eight? Thirty-four and eight? Forty-four and eight? Fifty-four and eight? Sixty-four and eight? Seventy-four and eight? Eighty-four and eight? Ninety-four and eight?

34. How many are four and nine? Fourteen and nine? Twenty-four and nine? Thirty-four and nine? Forty-four and nine? Fifty-four and nine? Sixty-four and nine? Seventy-four and nine? Eighty-four and nine? Ninety-four and nine?

35. How many are three and eight? Thirteen and eight? Twenty-three and eight? Thirty-three and eight? Forty-three and eight? Fifty-three and eight? Sixty-three and eight? Seventy-three and eight? Eighty-three and eight? Ninety-three and eight?

36. How many are three and nine? Thirteen and nine? Twenty-three and nine? Thirty-three and nine? Forty-three and nine? Fifty-three and nine? Sixty-three and nine? Seventy-three and nine? Eighty-three and nine? Ninety-three and nine?

37. How many are two and nine? Twelve and nine? Twenty-two and nine? Thirty-two and nine? Forty-two and nine? Fifty-two and nine? Sixty-two and nine? Seventy-two and nine? Eighty-two and nine? Ninety-two and nine?

G. 1. A man bought a firkin of butter for nine dollars, a keg of molasses for six dollars, and five bushels of wheat for seven dollars; how much did he give for the whole?

2. A boy gave some apples to his companions, to one he gave seven, to another six, and to another eight; how many did he give to all?

3. A man bought a cow for seventeen dollars, a sheep for nine, and a calf for seven; how much did he give for the whole?

4. A drover bought sheep as follows: of one man he bought twenty-seven, of another eight, of another ten, and of another five; afterwards he sold nine of them; how many had he then?

5. A lady bought a comb for thirty-seven cents, some tape for eight cents, some pins for ten cents, some needles for six cents, and some thread for six cents; she gave seventy-five cents; how much change ought she to receive back?

6. Eight, and nine, and six, are how many?

7. Five, and seven, and three, are how many?

8. Four, and three, less two, are how many?

9. Seven, and five, less three, are how many?

10. Sixteen, and nine, and three, are how many?

11. Twenty-three and eight are how many?

12. Twenty-seven and five are how many?

13. Twenty-five, less eight, are how many?

14. Thirty-two and seven, less nine, are how many?

15. Thirty-eight, and six, and four, less seven, are how many?

16. Forty-four, and eight, and three, and seven, are how many?

17. Fifty-two, and six, and four, and five, and three, are how many?

18. Fifty-seven, and six, and three, and five, and two, less eight, are how many?

19. Sixty-three, and five, and four, and six, and two, less seven, are how many?

20. Seventy-five, and six, and eight, and three, and seven, and four, less nine, are how many?

21. Eighty-three, and six, and five, and two, and seven, and nine, less four, are how many?

22. Fifty-eight, and ten, and five, and seven, and three, and six, and four, less nine, are how many?

23. Sixty-seven, and five, and eight, and nine, and seven, less six, are how many?

24. Seventy-four, and nine, and seven, and five, and two, less six, are how many?

25. Seventy-eight, and seven, and six, and two, and five, and eight, less nine, are how many?

26. Eighty-four, and seven, and six, and eight, and five, less ten, are how many?

27. Forty-seven, and eight, and six, and two, and four, and eight, and three, and seven, and ten, and nine, less five, are how many?

28. Thirty-five, and eight, and four, and six, and three, and four, less eleven, are how many?

29. Seventy, and ten, and six, and nine, and seven, and two, and five, and eight, and nine, less three, are how many?

H. 1. A man bought a cow for twenty-eight dollars, and a sheep for four dollars, and a pig for seven dollars; how much did he give for the whole?

2. James had twenty-seven cents; John gave him four more, David seven, and George eleven, and he bought nine cents worth of cake; how many cents had he left?

3. A man paid sixteen dollars to A, nine dollars to B, seven dollars to C, ten dollars to D, six dollars to E, four dollars to F, and had eight dollars left; how many had he at first?

4. From Brown's to Black's it is three miles; from Black's to Blue's, six miles; from Blue's to Green's, eleven miles; from Green's to Violet's, four miles; from Violet's to Olive's, four miles; from Olive's

to Purple's, nine miles; from Purple's to White's, four miles; how many miles is it from Brown's to White's?

5. One boy had fifteen nuts; another boy gave him seven; another, nine; and another gave him enough to make his number forty; how many did the last boy give him?

6. A boy had thirty-seven apples; he gave five to one companion; and eight to another; and when he had given some to another, he had six left; how many did he give to the last?

7. A man owed fifty-six dollars; at one time he paid seventeen dollars; at another, eight; at another, five; at another, seven; at last he paid the rest of the debt, wanting four dollars; how much was the last payment?

8. Six men bought a horse for seventy dollars; the first gave twenty-three dollars; the second, fifteen; the third, twelve; the fourth, nine; the fifth, seven; how much did the sixth give?

9. A man bought a horse for forty-five dollars and paid fifteen dollars for keeping him; he let him enough to receive twenty dollars; and then sold him for forty-three dollars; did he gain or lose by the bargain? and how much?

---

## SECTION II.

A. 1. What cost three yards of tape, at two cents a yard?\*

2. What cost four apples, at two cents apiece?

3. What cost five peaches, at three cents apiece?

4. What must you give for two oranges, at six cents apiece?

---

\*The pupil should be made to observe that three yards will cost three times as much as one yard; and say, if one yard costs two cents, three yards will cost three times two cents. He should be made to give this reason for the solution of each question, varying the numbers according to the question.

5. What would be the price of three barrels of cider, at three dollars a barrel?
6. If one orange is worth three apples, how many apples are four oranges worth?
7. What are two barrels of flour worth, at five dollars a barrel?
8. What cost three yards of cloth, at four dollars a yard?
9. What cost two pounds of raisins, at eight cents a pound?
10. What cost three lemons, at six cents apiece?
11. If a man travels three miles in an hour, how many miles will he travel in four hours?
12. What will five pair of shoes come to at two dollars a pair?
13. What is the price of seven yards of cloth, at three dollars a yard?
14. What is the value of two pounds of beef, at seven cents a pound?
15. If there are three feet in one yard, how many feet are there in four yards?
16. How many feet are there in seven yards?
17. How many feet are there in six yards and two feet?
18. If a man earns seven dollars in one week, how much would he earn in five weeks?
19. What cost seven hundred weight of sugar, at nine dollars a hundred weight?
20. What cost seven pounds of sugar, at ten cents a pound?
21. If one half yard of cloth costs three dollars, what would three yards cost?
22. If one quarter of a yard of cloth costs two dollars, what is that a yard?
23. How many yards of cloth are there in seven pieces, each piece containing ten yards?
24. What will five barrels of flour cost, at six dollars a barrel?

25. If a man can travel four miles in an hour, how far can he travel in eight hours?

26. If it takes four bushels of wheat to make a barrel of flour, how many bushels will it take to make seven barrels?

- B. 1. Two times one are how many?\*
2. Two times two are how many?
3. Two times three are how many?
4. Two times four are how many?
5. Two times five are how many?
6. Two times six are how many?
7. Two times seven are how many?
8. Two times eight are how many?
9. Two times nine are how many?
10. Two times ten are how many?
11. Three times one are how many?
12. Three times two are how many?
13. Three times three are how many?
14. Three times four are how many?
15. Three times five are how many?
16. Three times six are how many?
17. Three times seven are how many?
18. Three times eight are how many?
19. Three times nine are how many?
20. Three times ten are how many?
21. Four times one are how many?
22. Four times two are how many?
23. Four times three are how many?
24. Four times four are how many?
25. Four times five are how many?
26. Four times six are how many?
27. Four times seven are how many?
28. Four times eight are how many?
29. Four times nine are how many?
30. Four times ten are how many?



31. Five times one are how many?
32. Five times two are how many?
33. Five times three are how many?
34. Five times four are how many?
35. Five times five are how many?
36. Five times six are how many?
37. Five times seven are how many?
38. Five times eight are how many?
39. Five times nine are how many?
40. Five times ten are how many?
41. Six times one are how many?
42. Six times two are how many?
43. Six times three are how many?
44. Six times four are how many?
45. Six times five are how many?
46. Six times six are how many?
47. Six times seven are how many?
48. Six times eight are how many?
49. Six times nine are how many?
50. Six times ten are how many?
51. Seven times one are how many?
52. Seven times two are how many?
53. Seven times three are how many?
54. Seven times four are how many?
55. Seven times five are how many?
56. Seven times six are how many?
57. Seven times seven are how many?
58. Seven times eight are how many?
59. Seven times nine are how many?
60. Seven times ten are how many?
61. Eight times one are how many?
62. Eight times two are how many?
63. Eight times three are how many?
64. Eight times four are how many?
65. Eight times five are how many?
66. Eight times six are how many?
67. Eight times seven are how many?
68. Eight times eight are how many?

69. Eight times nine are how many?
70. Eight times ten are how many?
71. Nine times one are how many?
72. Nine times two are how many?
73. Nine times three are how many?
74. Nine times four are how many?
75. Nine times five are how many?
76. Nine times six are how many?
77. Nine times seven are how many?
78. Nine times eight are how many?
79. Nine times nine are how many?
80. Nine times ten are how many?
81. Ten times one are how many?
82. Ten times two are how many?
83. Ten times three are how many?
84. Ten times four are how many?
85. Ten times five are how many?
86. Ten times six are how many?
87. Ten times seven are how many?
88. Ten times eight are how many?
89. Ten times nine are how many?
90. Ten times ten are how many?

- C.
1. Two times two are how many times one?
  2. Three times two are how many times one?
  3. Four times two are how many times one?
  4. Five times two are how many times one?
  5. Seven times two are how many?
  6. Nine times two are how many?
  7. Six times two are how many?
  8. Eight times two are how many?
  9. Ten times two are how many?
  10. Two times three are how many?
  11. Three times three are how many?
  12. Four times three are how many?
  13. Five times three are how many?
  14. Six times three are how many?
  15. Eight times three are how many?

16. Seven times three are how many?
17. Ten times three are how many?
18. Nine times three are how many?
19. Two times four are how many?
20. Six times four are how many?
21. Four times four are how many?
22. Seven times four are how many?
23. Nine times four are how many?
24. Three times four are how many?
25. Five times four are how many?
26. Ten times four are how many?
27. Eight times four are how many?
28. Two times five are how many?
29. Five times five are how many?
30. Three times five are how many?
31. Six times five are how many?
32. Two times six are how many?
33. Four times five are how many?
34. Seven times five are how many?
35. Three times six are how many?
36. Seven times six are how many?
37. Seven times seven are how many?
38. Four times eight are how many?
39. Six times seven are how many?
40. Eight times nine are how many?
41. Six times eight are how many?
42. Three times seven are how many?
43. Four times nine are how many?
44. Three times eight are how many?
45. Six times six are how many?
46. Six times nine are how many?
47. Nine times five are how many?
48. Four times six are how many?
49. Two times nine are how many?
50. Seven times nine are how many?
51. Nine times eight are how many?
52. Two times eight are how many?
53. Three times ten are how many?

54. Eight times seven are how many?
55. Five times six are how many?
56. Five times eight are how many?
57. Two times seven are how many?
58. Two times six are how many?
59. Eight times six are how many?
60. Four times seven are how many?
61. Eight times eight are how many?
62. Ten times five are how many?
63. Seven times ten are how many?
64. Ten times ten are how many?
65. Nine times six are how many?
66. Five times nine are how many?
67. Three times nine are how many?
68. Nine times seven are how many?
69. Five times ten are how many?
70. Seven times eight are how many?
71. Five times seven are how many?
72. Ten times eight are how many?
73. Ten times seven are how many?
74. Nine times ten are how many?
75. Eight times five are how many?
76. Nine times nine are how many?
77. Four times ten are how many?
78. Ten times six are how many?
79. Eight times ten are how many?
80. Ten times nine are how many?

D. 1. What cost three yards of cloth, at five dollars a yard?

2. What cost four oranges, at six cents apiece?

3. What cost seven barrels of cider, at three dollars a barrel?

4. How much do three barrels of beer come to, at seven dollars a barrel?

5. What cost four firkins of butter, at eight dollars a firkin?

6. What do nine pounds of veal come to, at six cents a pound?

7. What cost six reams of paper, at five dollars per ream?
8. What cost eight pairs of shoes, at three dollars a pair?
9. What is the value of nine yards of cloth, at six dollars a yard?
10. If a man travels five miles an hour, how many miles will he travel in nine hours?
11. There is an orchard consisting of ten rows of trees, and nine trees in each row; how many trees are there in the orchard?
12. On a chess-board there are eight rows of squares, and eight squares in each row; how many squares are there on the board?
13. In one penny there are four farthings; how many farthings are there in six pence?
14. How many farthings are there in eight pence?
15. How many farthings are there in nine pence?
16. How many farthings are there in ten pence?
17. In one shilling there are twelve pence; how many farthings are there in a shilling?
18. In one pint, there are four gills; how many gills are there in five pints?
19. In one quart, there are two pints; how many pints are there in six quarts?
20. How many pints are there in three quarts?
21. How many gills are there in six pints?
22. How many gills are there in one quart?
23. How many gills are there in three quarts?
24. In one gallon there are four quarts; how many quarts are there in three gallons?
25. How many quarts are there in five gallons?
26. How many quarts are there in seven gallons?
27. How many pints are there in one gallon?
28. How many pints are there in three gallons?
29. How many gills are there in one gallon?
30. How many gills are there in five quarts?
31. How many gills are there in two gallons?

32. A person bought two oranges, at six cents apiece; and seven lemons, at four cents apiece; and five pears, at two cents apiece; how much did the whole come to?

33. If one pint of oil costs eight cents; what will one quart cost?

34. If one gill of alcohol costs four cents, what will one quart cost?

35. If one gill of beer costs two cents, what will one gallon cost?

36. If a stage runs seven miles in an hour, how far will it run in nine hours?

37. Two men start from the same place and travel different ways; one travels two miles in an hour; the other travels three miles in an hour; how far apart will they be at the end of one hour? How far at the end of two hours? How far at the end of three hours? How far at the end of four hours?

38. Two men start from the same place and travel the same way; one travels at the rate of two miles in an hour; the other, four; how far apart will they be in one hour? How far in two hours? How far in four hours?

39. If three men can do a piece of work in two days, how many days would it take one man to do it?

40. If four men can do a piece of work in five days, how many days would it take one man to do it?

41. If six men can do a piece of work in seven days; how many men would it take to do it in one day?

42. If a quantity of provisions will serve three men five days, how many men would it serve one day?

43. If a quantity of provisions will serve five men seven days, how many days would it serve one man?

44. If fifteen dollars' worth of provisions will serve eight men five days, how many days will it serve one man?

45. A man had a piece of work to perform which

seven men could do in nine days, but it was necessary that the whole should be completed in one day; how many men must he employ?

46. If the interest of one dollar is six cents a year, what would be the interest of ten dollars for the same time?

47. If the interest of one dollar is six cents for one year, what would be the interest of it for two years? for three years? for seven years?

48. If a man can earn seven shillings in a day, how many shillings will he earn in six days?

49. If a man can earn eight dollars in a month, how much can he earn in six months?

50. At five dollars a week, what will nine weeks' board come to?

51. A lady bought three yards of cambric at two dollars a yard, seven yards of silk for three dollars a yard, five yards of ribbon for four dollars, and some crape for two dollars; she paid four ten-dollar bills; how much must she receive back again?

### SECTION III.

A. 1. How many apples, at one cent apiece, can you buy for four cents?

2. How many pears, at two cents apiece, can you buy for four cents?

3. How many peaches, at three cents apiece, can you buy for six cents?

4. How many apples, at two cents apiece, can you buy for six cents? How many for eight cents?

5. How many pears, at three cents apiece, can you buy for nine cents? How many for twelve cents?

6. If you have eight apples to give to four boys, how many can you give to each?

7. If a man travels six miles in two hours, how many miles does he travel in an hour?

8. If a man travels three miles in an hour, how many hours will it take him to travel nine miles?

9. How many yards of cloth, at three dollars a yard, can you buy for fifteen dollars?

10. If you had sixteen cents, how many cakes could you buy at four cents apiece?

11. If you had ten dollars, how much cloth could you buy at five dollars a yard?

12. If you had twelve apples to give to six of your companions, how many would you give them apiece?

13. If a man can travel six miles in an hour, how long will it take him to travel eighteen miles?

14. If a man can travel five miles in an hour, how long will it take him to travel twenty miles?

15. In a certain orchard there are twenty-four trees standing in rows, and there are three trees in each row; how many rows are there?

16. In an orchard there are twenty-one trees, and there are seven trees in each row; how many rows are there?

17. A man paid twenty-seven dollars for some sheep, and he gave nine dollars apiece for them; how many sheep did he buy?

18. A man paid twenty-eight dollars for seven barrels of cider; how much did he give a barrel?

19. At five cents a piece, how many oranges can you buy for thirty cents?

20. Twenty-five are how many times five?

21. Thirty-two are how many times four? How many times eight?

22. Thirty-five are how many times seven? How many times five?

23. Thirty-six are how many times six? How many times nine? How many times four?

*B. Remark.* When any thing, or any number, is divided into two equal parts, one of the parts is called the half of the thing or the number.

1. If an apple is worth two cents, what is one half of it worth?



2. What is one half of two cents?

*Ans.* One cent.

*Q.* Why?

*A.* Because, if you divide two cents into two equal parts, one of the parts is one cent.

3. If you can buy a cake for two cents, how much can you buy for one cent?

4. One is what part of two?

*Ans.* One is the half part of two.

5. Two times one are how many times two?

6. If you can buy one pear for two cents, how many can you buy for three cents?

7. Three are how many times two?

*Ans.* Once two and one half of two.

8. Four are how many times two?

9. If two shillings will buy one yard of cotton cloth, how many yards will five shillings buy?

10. Five are how many times two?

*Ans.* Two times two and half of two.

11. Six are how many times two?

12. If two dollars will buy a yard of cloth, how many yards will seven dollars buy?

13. How many halves make a whole one?

14. Eight are how many times two?

15. Nine are how many times two?

16. Ten are how many times two?

*Remark.* When any thing, or any number, is divided into three equal parts, one of those parts is called the *third* part of the thing or number. When it is divided into four equal parts, one part is called the *fourth* part, and so on.

17. If a yard of cloth be worth three dollars, and it be cut into three equal pieces, what will one of the pieces be worth? that is, what will one third of a yard be worth?

18. What is a third of three?

19. Suppose the yard of cloth to be cut as before, what will two pieces of it cost? that is, what will two thirds of a yard cost?

20. What is two thirds of three?

21. If three shillings will buy one bushel of corn, what part of a bushel will one shilling buy? What part of a bushel will two shillings buy?

22. One is what part of three?

*Ans.* One is the third part of three; or one third of three.

23. Two is what part of three?

*Ans.* Two is two times the third part of three, or two thirds of three.\*

24. Three times one are how many times three?

25. If you can buy a barrel of cider for three dollars, how much can you buy for four dollars? How much for five dollars?

26. How many thirds make a whole one?

27. Five are how many times three?

*Ans.* One three, and two thirds of three.

28. Six are how many times three?

29. If you can buy a barrel of fish for three dollars, how much can you buy for seven dollars? How much for eight dollars?

30. What do you understand by a third, and by two thirds of any thing?

For the answer, see remark after example 16th.

31. Eight are how many times three?

32. Nine are how many times three?

33. Ten are how many times three?

34. Eleven are how many times three?

35. Twelve are how many times three?

36. If a yard of cloth be worth four dollars, and it be cut into four equal parts, what will one of the parts be worth? that is, what is one fourth of it worth? What are two fourths of it worth? What are three fourths of it worth?

37. If you can buy a barrel of cider for four dol-

---

\* The instructor may use either of these expressions; the former will be most easily understood by the pupil: it would be well, therefore, for the instructor to use the former frequently, though the latter is used for the most part in this treatise.

lars, how much can you buy for one dollar? How much for two dollars? How much for three dollars?

38. What part of four is one?

*Ans.* One is the fourth part of four.

39. What part of four is two?

*Ans.* Two fourths of four.

40. What part of four is three?

*Ans.* Three fourths of four.

41. How many fourths make a whole one?

42. If you can buy a bushel of corn for four shillings, how much can you buy for five shillings? How much for six shillings? How much for seven shillings?

43. Five are how many times four?

*Ans.* Once four, and one fourth of four.

44. Six are how many times four?

*Ans.* Once four, and two fourths of four.

45. Seven are how many times four?

*Ans.* Once four, and three fourths of four.

46. Eight are how many times four?

47. If four bushels of corn will buy one yard of cloth, how many yards will nine bushels buy? How many yards will ten bushels buy? How many yards will eleven bushels buy?

48. What do you understand by one fourth, two fourths, or three fourths of any thing?

See remark after example 16th.

49. Ten are how many times four?

50. Eleven are how many times four?

51. Twelve are how many times four?

52. Thirteen are how many times four?

53. Fourteen are how many times four?

54. Fifteen are how many times four?

55. Sixteen are how many times four?

56. If a barrel of flour be worth five dollars, and it be divided equally among five men, what will one man's share be worth? that is, what is one fifth of a barrel worth? What are two fifths of it worth? What are

three fifths of it worth? What are four fifths of it worth?

57. If five dollars will buy one box of butter, what part of a box will one dollar buy? What part will two dollars buy? What part will three dollars buy? What part will four dollars buy?

58. What part of five is one?

*Ans.* One is the fifth part of five.

59. Two is what part of five?

*Ans.* Two fifths of five.

60. Three is what part of five?

*Ans.* Three fifths of five.

61. Four is what part of five?

62. How many fifths make a whole one?

63. If cherries are five cents a quart, how many quarts can you buy for six cents? How many for seven cents? How many for eight cents? How many for nine cents? How many for eleven cents? How many for thirteen cents?

64. What do you understand by one fifth, two fifths, etc., of any thing?

See remark after example 16th.

65. Seven are how many times five?

*Ans.* Once five and two fifths of five.

66. Eight are how many times five?

67. Nine are how many times five?

68. Ten are how many times five?

69. Eleven are how many times five?

70. Twelve are how many times five?

71. Thirteen are how many times five?

72. Fourteen are how many times five?

73. Fifteen are how many times five?

74. If a barrel of beef cost six dollars, and it were divided into six equal parts, what would one of the parts be worth? that is, what is one sixth of it worth? What are two sixths of it worth? What are three sixths of it worth? Four sixths? Five sixths?

75. If fish is worth six dollars a barrel, what part of

a barrel will one dollar buy? What part of a barrel will two dollars buy? Three dollars? Four dollars? Five dollars?

76. What part of six is one?

*Ans.* One is the sixth part of six.

77. What part of six is two?

*Ans.* Two sixths of six.

78. Three is what part of six?

*Ans.* Three sixths of six.

79. Four is what part of six?

80. How many sixths make a whole one?

81. How much rye at six shillings a bushel can you buy for seven shillings? How much for eight shillings? Nine shillings? Ten shillings? Eleven shillings? Twelve shillings? Thirteen shillings? Fifteen shillings? Seventeen shillings?

82. What do you understand by one sixth, two sixths, etc.?

83. Eight are how many times six?

*Ans.* One time six and two sixths of six?

84. Nine are how many times six?

85. Ten are how many times six?

86. Eleven are how many times six?

87. Twelve are how many times six?

88. Thirteen are how many times six?

89. Fourteen are how many times six?

90. Fifteen are how many times six?

91. If coal is worth seven dollars a chaldron, what is one seventh of a chaldron worth? What are two sevenths of a chaldron worth? Three sevenths? Four sevenths? Five sevenths? Six sevenths?

92. At the rate of seven dollars a yard, how much broadcloth can you buy for one dollar? How much for two dollars? How much for three dollars? How much for four dollars? How much for five dollars? How much for six dollars? How much for eight dollars? How much for ten dollars? How much for twelve dollars? How much for fifteen dollars?

93. What part of seven is one?

*Ans.* One is one seventh of seven.

94. What part of seven is two?

*Ans.* Two sevenths of seven.

95. What part of seven is three?

96. Four is what part of seven?

97. Five is what part of seven?

98. What do you understand by one seventh, two sevenths, etc., of any thing?

99. How many sevenths make a whole one?

100. Nine are how many times seven?

101. Ten are how many times seven?

102. Eleven are how many times seven?

103. Twelve are how many times seven?

104. Thirteen are how many times seven?

105. Fourteen are how many times seven?

106. Fifteen are how many times seven?

107. Sixteen are how many times seven?

108. When wheat is eight shillings a bushel, what is one eighth of a bushel worth? What are two eighths of a bushel worth? What are three eighths of a bushel worth? What are four eighths of a bushel worth? Five eighths? Six eighths? Seven eighths?

109. When wood is eight dollars a cord, what part of a cord can you buy for a dollar? What part of a cord can you buy for two dollars? What part for three dollars? What part for four dollars? What part for five dollars? What part for six dollars? What part for seven dollars? How much can you buy for nine dollars? How much for ten dollars? How much for eleven dollars? How much for thirteen dollars? How much for fifteen dollars? How much for nineteen dollars?

110. What part of eight is one?

111. What part of eight is two?

112. Three is what part of eight?

113. Four is what part of eight?

114. Five is what part of eight?

115. What do you understand by one eighth, two eighths, etc., of any number?

116. Seven is what part of eight?

117. How many eighths make a whole one?

118. Ten are how many times eight?

119. Eleven are how many times eight?

120. Twelve are how many times eight?

121. Thirteen are how many times eight?

122. Fourteen are how many times eight?

123. When sugar is nine dollars a hundred weight, what is one ninth of a hundred weight worth? What are two ninths of a hundred weight worth? Three ninths? Four ninths? Five ninths? Six ninths? Seventh ninths? Eight ninths?

124. When rye is nine shillings a bushel, what part of a bushel can you buy for one shilling? What part for two shillings? What part for three shillings? For four shillings? For five shillings? For six shillings? Seven shillings? Eight shillings? How much for ten shillings? For thirteen shillings? For fourteen shillings? Sixteen shillings? Twenty shillings?

125. What do you understand by one ninth, two ninths, three ninths, etc., of any number?

126. Three is what part of nine?

127. Four is what part of nine?

128. Five is what part of nine?

129. Seven is what part of nine?

130. How many ninths make a whole one?

131. Thirteen are how many times nine?

132. Fifteen are how many times nine?

133. Seventeen are how many times nine?

134. When hay is ten dollars a ton, what is one tenth of a ton worth? What are two tenths of a ton worth? What are three tenths of a ton worth? Four tenths? Five tenths? Six tenths? Seven tenths? Eight tenths? Nine tenths?

135. When sugar is ten dollars a hundred weight, what part of a hundred weight can you buy for one

dollar? What part for two dollars? What part for three dollars? What part for four dollars? What part for five dollars? Six dollars? Seven dollars? Eight dollars? Nine dollars? How much can you buy for eleven dollars? Thirteen dollars? Fifteen dollars? Seventeen dollars?

136. What do you understand by one tenth, two tenths, three tenths, etc., of any thing?\*

137. How many tenths make a whole one?\*

C. Instead of writing the names of numbers, it is usual to express them by particular characters, called *figures*.

One is written.....	1
Two is written.....	2
Three is written.....	3
Four is written.....	4
Five is written.....	5
Six is written....	6
Seven is written.....	7
Eight is written.....	8
Nine is written.....	9
Ten is written.....	10

1. Eleven times one are how many times 2?

2. Twelve are how many times 2? 3? 4?

3. Fourteen are how many times 2? 4? 3?

4. If you had fifteen cents, how many cakes could you buy at 4 cents apiece? How many at 2 cents apiece? How many at 3 cents apiece? How many at 5 cents apiece?

5. Fifteen are how many times 4? 2? 3? 5?

6. Sixteen are how many times 5? 3? 6? 2? 7? 4?

7. Seventeen are how many times 6? 2? 7? 3? 5? 4?

8. Eighteen are how many times 4? 7? 9? 6? 3? 2? 5? 8?

---

\* These questions should frequently be put to the learners.



9. Nineteen are how many times 3? 7? 4? 5? 8?  
6? 9? 2? 10?

10. Twenty are how many times 6? 2? 8? 3? 9?  
4? 10? 5? 7?

11. Twenty-one are how many times 7? 3? 8? 2?  
4? 6? 9? 5? 10?

12. Twenty-two are how many times 3? 8? 5? 4?  
9? 6? 7? 10? 2?

13. If you had twenty-seven dollars, how much  
cloth could you buy at 9 dollars a yard? How much  
at 6 dollars a yard? How much at 4 dollars a yard?  
How much at 3 dollars a yard? How much at 7 dollars  
a yard? How much at 8 dollars a yard? How much  
at 5 dollars a yard? How much at 10 dollars a yard?

14. Twenty-seven are how many times 9? 6? 4?  
3? 7? 8? 5? 10?

15. Twenty-four are how many times 6? 8? 7?  
5? 2? 10? 3? 4? 9?

16. Twenty-nine are how many times 3? 7? 5?  
9? 6? 8? 4? 10?

17. Twenty-three are how many times 4? 2? 7?  
8? 3? 9? 6? 5? 10?

18. Twenty-five are how many times 3? 7? 2? 6?  
9? 4? 8? 5? 10?

19. Thirty are how many times 10? 2? 3? 7? 9?  
6? 5? 4? 8?

20. Thirty-three are how many times 6? 8? 7?  
4? 9? 5? 10? 3?

21. Twenty-six are how many times 9? 4? 7? 3?  
8? 5? 6? 10?

22. Thirty-five are how many times 5? 6? 3? 7?  
9? 10? 4? 8?

23. Thirty-eight are how many times 8? 6? 3?  
9? 5? 4? 7? 10?

24. Thirty-four are how many times 7? 3? 9? 10?  
6? 8? 4? 5?

25. Thirty-six are how many times 8? 9? 4? 5?  
3? 6? 7? 10?

26. Forty are how many times 8? 10? 6? 4? 3?  
9? 5? 7?

27. For forty-seven cents, how many pounds of meat can be bought at 6 cents a pound? How many pounds at 8 cents? How many at 9 cents? How many at 3 cents? How many at 5 cents? How many at 4 cents? How many at 7 cents? How many at 10 cents a pound?

28. Forty-seven are how many times 6? 8? 9? 3?  
5? 4? 7? 10?

29. Forty-three are how many times 9? 8? 7? 6?  
4? 3? 5? 10?

30. Forty-five are how many times 10? 8? 3? 6?  
4? 7? 5? 9?

31. Forty-nine are how many times 6? 10? 5? 9?  
4? 8? 7?

32. Fifty-three are how many times 8? 5? 6? 4?  
7? 9? 10?

33. Fifty-seven are how many times 9? 7? 10? 6?  
5? 8? 4?

34. Fifty-five are how many times 6? 4? 8? 10?  
9? 7? 5?

35. Forty-eight are how many times 7? 5? 9? 4?  
6? 8? 10?

36. Fifty-four are how many times 5? 9? 6? 4?  
7? 10? 8?

37. Forty-four are how many times 4? 6? 9? 7?  
5? 8? 10?

38. Fifty-eight are how many times 7? 6? 8? 4?  
9? 5? 10?

39. Forty six are how many times 8? 10? 4? 6?  
9? 7? 5?

40. Fifty are how many times 9? 5? 4? 10? 8?  
6? 7?

41. Fifty-nine are how many times 4? 8? 7? 6?  
10? 9? 5?

42. Sixty-four are how many times 7? 5? 8? 10?  
6? 9?

43. Sixty-eight are how many times 6? 8? 9? 7?  
10? 5?

44. Fifty-two are how many times 4? 6? 8? 10?  
5? 7? 9?

45. Sixty-three are how many times 5? 4? 6? 10?  
9? 7? 8?

46. Sixty-two are how many times 4? 10? 9? 7?  
8? 5? 6?

47. Seventy-three are how many times 10? 7? 8?  
6? 5? 9?

48. Seventy-five are how many times 7? 8? 10? 5?  
6? 9?

49. If you had sixty-seven dollars, how many barrels of flour could you buy at 5 dollars a barrel? How many at seven dollars a barrel? How many at 6 dollars a barrel? How many at 8 dollars a barrel? How many at 10 dollars a barrel? How many at 9 dollars a barrel?

50. Sixty-seven are how many times 5? 7? 6? 8?  
10? 9?

51. Seventy-four are how many times 10? 7? 8? 6?  
5? 9?

52. Sixty are how many times 9? 10? 6? 4? 7?  
5? 8?

53. Seventy-two are how many times 5? 7? 6? 8?  
10? 9?

54. Sixty-five are how many times 5? 10? 8? 6?  
7? 9?

55. Sixty-one are how many times 4? 5? 7? 6? 8?  
10? 9?

56. Seventy-nine are how many times 10? 9? 8?  
7? 6? 5?

57. Seventy are how many times 9? 5? 6? 8?  
7? 10?

58. Eighty-two are how many times 10? 7? 8? 6?  
9?

59. Sixty-six are how many times 9? 5? 6? 7?  
10? 8?

60. Eighty are how many times 10? 7? 6? 8? 9?
61. Sixty-nine are how many times 9? 5? 7? 10?  
8? 6?
62. Eighty-one are how many times 10? 6? 8? 7?  
9?
63. Seventy-six are how many times 9? 5? 10? 6?  
7? 8?
64. Eighty-three are how many times 10? 6? 7?  
9? 8?
65. Seventy-one are how many times 9? 5? 7? 6?  
8? 10?
66. Eighty-four are how many times 10? 6? 8?  
9? 7?
67. Seventy-seven are how many times 9? 7? 5?  
10? 8? 6?
68. Eighty-five are how many times 10? 8? 7?  
6? 9?
69. Ninety are how many times 9? 10? 6? 7? 8?
70. Eighty-six are how many times 10? 9? 6? 7?  
8?
71. Ninety-four are how many times 9? 10? 8?  
6? 7?
72. Eighty-seven are how many times 10? 9? 7?  
6? 8?
73. Ninety-two are how many times 9? 10? 6? 7?  
8?
74. Eighty-eight are how many times 10? 9? 8?  
6? 7?
75. Ninety-five are how many times 9? 10? 6? 8?  
7?
76. Eighty-nine are how many times 10? 9? 6?  
7? 8?
77. Ninety-eight are how many times 10? 9? 8?  
6? 7?
78. Ninety-four are how many times 9? 10? 6?  
8? 7?
79. One hundred are how many times 6? 10? 8?  
9? 7?

80. Ninety-three are how many times 10? 6? 9?  
8? 7?

81. Ninety-nine are how many times 7? 10? 8?  
6? 9?

82. Ninety-six are how many times 9? 8? 7? 6?  
10?

83. Ninety-seven are how many times 10? 9? 6?  
7? 8?

D. 1. If an orange is worth 3 apples, how many oranges are fifteen apples worth?

2. In 8 pints how many quarts?

3. In 8 gills how many pints?

4. If you divide twelve apples equally among three boys, how many would you give them apiece?

5. How many hours would it take you to travel 10 miles, if you travel three miles in an hour?

6. How many pence are there in eight farthings?

7. How many pence are there in twelve farthings?

8. How many pence are there in seventeen farthings?

9. How many gallons are there in ten quarts?

10. How much broadcloth, at six dollars a yard, can you buy for seventeen dollars?

11. How many pounds of raisins, at 8 cents a pound, can you buy for twenty-five cents?

12. In twenty-eight shillings how many dollars?\*

13. In twenty-eight farthings how many pence?

14. How many barrels of flour, at 7 dollars a barrel, can you buy for thirty-four dollars?

15. How many reams of paper, at five dollars a ream, can you buy for thirty-seven dollars?

16. In thirty-four gills how many pints?

17. In twenty-seven quarts how many gallons?

18. If an orange is worth six apples, how many oranges can you buy for forty apples?

19. Thirty-six shillings are how many dollars?

---

\* In some States 6 shillings is equal to one dollar.

20. A man bought thirty apples at the rate of 3 for a cent, how many cents did they come to?

21. A laborer engaged to work 8 months for ninety-six dollars; how much did he receive for a month? how much a week, allowing 4 weeks to the month? how many shillings a day, allowing 6 working days to the week?

22. If wine is worth twenty cents a pint, what is 1 gill worth?

23. If you buy a bushel\* of apples for forty cents, what is the price of a peck?

24. If you buy a bushel of pears for forty-eight cents, what will be the price of half a peck, at the same rate?

25. Four men bought a horse for forty-eight dollars; what did each man pay?

26. Five men bought a horse for seventy-five dollars, and sold him again for forty dollars; what did each man lose by the bargain?

27. A man gave sixty-three cents for a horse to ride nine miles; what was the price of one mile's ride?

28. A man hired a horse to ride, and agreed to give 8 cents a mile; he paid fifty-six cents: how many miles did he ride?

29. A man had forty-two dollars, which he paid for wood at 7 dollars a cord; how many cords did he buy?

30. Two boys are forty-eight rods apart, and both running the same way; but the hindmost boy gains upon the other 3 rods in a minute; in how many minutes will he overtake the foremost boy?

31. There is a vessel containing sixty-three gallons of wine; it has a pipe which discharges 7 gallons in an hour; how many hours will it take to empty the vessel?

22. There is a vessel containing eighty-seven gallons, and by a cock ten gallons will run into it in an hour; in how many hours will the vessel be filled?

33. If one man can do a piece of work in thirty

---

\*1 bushel is 4 pecks.

days, in how many days can 3 men do it? in how many days can 5 men do it?

34. If you wish to put sixty-four pounds of butter into 8 boxes, how many pounds would you put into each box?

35. If you had seventy-two pounds of butter, which you wished to put into boxes containing 8 pounds each, how many boxes would it take?

36. If a man can perform a journey in thirty-six hours, how many days will it take him to do it when the days are nine hours long?

37. If a man can do a piece of work in forty-eight hours, how many days would it take him to do it, if he works twelve hours in a day?

---

### SECTION IV.

A. 1. At two cents a yard, what will three yards and one half of a yard of tape cost?

2. 3 times 2 and one half of 2 are how many?

3. At three dollars a yard, what will 4 yards and one third of a yard of cloth cost?

4. 4 times 3 and one third of 3 are how many?

5. At three dollars a barrel, what will 3 barrels and 2 thirds of a barrel of cider cost?

6. 3 times 3 and two thirds of 3 are how many?

7. If a man earn 4 dollars in a week, how many dollars will he earn in 3 weeks and 1 fourth of a week?

8. 3 times 4 and 1 fourth of 4 are how many?

9. If a yard of cloth cost 4 dollars, what will 5 yards and 3 fourths of a yard cost?

10. 5 times 4 and 3 fourths of 4 are how many?

11. If a man spend five dollars in a week, how many dollars will he spend in 3 weeks and 1 fifth of a week? How much in 5 weeks and 2 fifths of a week?

12. 3 times 5 and 1 fifth of 5 are how many?

13. 5 times 5 and 2 fifths of 5 are how many?

14. 6 times 5 and 3 fifths of 5 are how many?
15. If beer is worth six dollars a barrel, what would 4 barrels and 1 sixth of a barrel cost? How much would 7 barrels and 5 sixths of a barrel cost?
16. 4 times 6 and 1 sixth of six are how many?
17. 7 times six and 5 sixths of six are how many?
18. At 7 dollars a barrel, what will 3 barrels and 1 seventh of a barrel of flour cost? What will 5 barrels and 2 sevenths of a barrel cost?
19. 3 times 7 and 1 seventh of 7 are how many?
20. 5 times 7 and 2 sevenths of 7 are how many?
21. 8 times 5 and 4 fifths of 5 are how many?
22. 8 times 6 and 3 sixths of 6 are how many?
23. At 8 dollars a yard, what will 4 yards and 1 eighth of a yard of broadcloth cost?
24. 4 times 8 and 1 eighth of 8 are how many?
25. 2 times 7 and 3 sevenths of 7 are how many?
26. 8 times 7 and 4 sevenths of 7 are how many?
27. 9 times 7 and 6 sevenths of 7 are how many?
28. 3 times 8 and 5 eighths of 8 are how many?
29. 9 times 8 and 7 eighths of 8 are how many?
30. If a hundred weight of sugar cost 9 dollars, what will 2 hundred weight and 1 ninth of a hundred weight cost? What will 5 hundred weight and 2 ninths of a hundred weight cost?
31. 2 times 9 and 1 ninth of 9 are how many?
32. 5 times 9 and 2 ninths of 9 are how many?
33. 6 times 9 and 4 ninths of 9 are how many?
34. 2 times 10 and 3 tenths of 10 are how many?
35. 7 times 9 and 7 ninths of 9 are how many?
36. 5 times 10 and 4 tenths of 10 are how many?
37. 8 times 9 and 5 ninths of 9 are how many?
38. 4 times 10 and 7 tenths of 10 are how many?
39. 6 times 10 and 9 tenths of 10 are how many?

B. 1. A man bought 2 oranges at 6 cents apiece; how many cents did they come to? He paid for them



with cherries at four cents a pint; how many pints did it take?

2. 2 times 6 are how many times 4?

3. A man bought 3 yards of cloth at 4 dollars a yard; how many dollars did it come to? How much flour at 6 dollars a barrel would it take to pay for it?

4. 3 times 4 are how many times 6?

5. A man bought 4 peaches at 3 cents apiece; how many cents did they come to? He paid for them with pears at 2 cents a piece; how many pears did it take?

6. 4 times 3 are how many times 2?

7. Bought 2 hundred weight of sugar, at 9 dollars a hundred weight, and paid for it with wood at 6 dollars a cord; how many cords did it take?

8. 2 times 9 are how many times 6?

9. Bought 3 barrels of flour at 8 dollars a barrel, and paid for it with cider at 4 dollars a barrel; how many barrels did it take?

10. 3 times 8 are how many times 4?

11. 12 times 3 are how many times 5?

12. 6 times 4 are how many times 8?

13. 3 times 10 are how many times 6?

14. 4 times 9 are how many times 6?

15. How much flannel worth 4 shillings a yard must be given for 3 yards of silk worth 5 shillings a yard?

16. 3 times 5 are how many times 4?

17. 2 times 7 are how many times 3? 5? 4?

18. 4 times 5 are how many times 3? 6? 7?

19. 3 times 7 are how many times 4? 5? 6? 8? 9?

20. Bought 2 kegs and 2 sevenths of a keg of tobacco at 7 dollars a keg, and paid for it with wood at 4 dollars a cord; how many cords did it take? How much butter at 3 dollars a box would it take to pay for it?

21. 2 times 7, and 2 sevenths of 7 are how many times 4? 3? 5? 6? 8?

22. Bought 3 bushels and 3 fifths of a bushel of

corn at 5 shillings a bushel, and paid for it with wheat at 6 shillings a bushel; how many bushels of wheat did it take?

23. 3 times 5 and 3 fifths of five are how many times 6? 9? 4? 7? 3? 8?

24. How much sugar that is 8 dollars a hundred weight, can be bought for 4 cords and 2 sevenths of a cord of wood, at 7 dollars a cord?

25. 4 times 7 and 2 sevenths of 7 are how many times 6? 8? 5? 3? 9? 10?

26. 5 times 5 and 3 fifths of 5 are how many times 4? 8? 9? 7? 10? 3? 6?

27. 6 times 7 and 3 sevenths of 7 are how many times 9? 4? 5? 8? 10?

28. 5 times 8 and 3 eighths of 8 are how many times 6? 9? 4? 7? 10?

29. 7 times 8 and 5 eighths of 8 are how many times 9? 6? 10? 4? 5?

30. 5 times 9 and 4 ninths of 9 are how many times 7? 8? 6? 10? 4?

31. 7 times 9 and 7 ninths of 9 are how many times 6? 8? 10? 5? 4?

32. 6 times 10 and 3 tenths of 10 are how many times 7? 5? 4? 9? 8?

33. 8 times 10 and 4 tenths of 10 are how many times 6? 7? 9?

34. 8 times 9 and 3 ninths of 9 are how many times 6? 10? 7?

C. 1. Bought 4 bushels of apples, at 3 shillings a bushel; how many dollars did they come to?

2. How many apples, at 2 cents apiece, must you give for 2 lemons, at 4 cents apiece?

3. How many pears, at 3 cents apiece, must you give for 3 oranges, at 5 cents apiece?

4. How many barrels of cider, at 3 dollars a barrel, must be given for 5 boxes of butter, at 4 dollars a box?

5. A man bought 4 yards of broadcloth, at 7 dollars a yard, and paid for it with flour, at 5 dollars a barrel; how many barrels did he give?

6. If 2 apples cost 4 cents, what would 4 apples cost?

7. If 3 apples are worth 6 cents, how many apples must you give for 8 pears, that are worth 3 cents apiece?

8. James had 8 oranges that were worth 5 cents apiece, and George had 5 quarts of cherries that were worth 6 cents a quart, which he gave to James for a part of his oranges; how many oranges did he buy, and how many had James left?

9. Bought 8 yards of cloth, at 9 shillings a yard; how many dollars did it come to?

10. Bought 5 bushels and 3 sevenths of a bushel of salt, at 7 shillings a bushel; how many dollars did it come to?

11. Bought 9 boxes and 2 thirds of a box of raisins for 3 dollars a box, and paid for it with cider, at 4 dollars a barrel; how many barrels did it take?

12. Bought 8 pounds and 4 sevenths of a pound of opium, at 7 dollars a pound, and paid for it with cloth, at 5 dollars a yard; how many yards did it take?

13. Bought 6 chaldrons and 4 ninths of a chaldron of coal, at 9 dollars a chaldron, and paid for it with oranges, at 5 dollars a box; how many boxes did it take?

14. Bought 7 cases and 5 sixths of a case of Florence oil, at 6 dollars a case, and paid for it with sheet lead, at 7 dollars a hundred weight; how many hundred weight did it take?

15. How many dozen of eggs, at 8 cents a dozen, must you give for 7 pounds of sugar, at 10 cents a pound?

16. How much barley, at 3 shillings a bushel, must be given for 8 bushels of wheat, at 7 shillings a bushel?

17. How much cloth, at 4 shillings a yard, must be given for a firkin of butter worth 8 dollars?

18. How much cloth, at 5 shillings a yard, can be bought for 2 reams of paper, at 5 dollars a ream?

19. How much wheat, at 7 shillings a bushel, can be bought for 2 barrels of cider, at 4 dollars and a half a barrel?

20. How long would it take a man to lay up 10 dollars, if he saves 4 shillings a day?

21. If a man earns 8 shillings a day, how many dollars would he earn in 10 days?

22. A man bought twenty pears at the rate of 2 for 3 cents; how much did they come to?

23. How many eggs, at the rate of 3 for 5 cents, can you buy for thirty cents?

24. A man hired a laborer and agreed to give him 5 dollars for every 3 days' work; how much did he give him a week, there being 6 working days in a week? How much was it a month, allowing 4 weeks to a month?

25. If a man receives 5 dollars for 3 days' work, how many shillings is that a day?

26. 5 men bought a horse for sixty-three dollars, and paid two dollars a week for keeping him; at the end of 8 weeks they sold him for fifty-four dollars; how much did each man lose by the bargain?

## SECTION V.

A. 1. JAMES had 4 apples, and John had half as many; how many had John?

2. If an orange cost 6 cents, and an apple half as much; how much does the apple cost?

3. If you divide 8 apples equally between two boys, what part of them must each have?

*Ans.* One half of them.

4. What is 1 half of 8?

5. If you divide 8 apples equally among 4 boys, what part of them must each have?

*Ans.* One fourth of them.

6. What is 1 fourth of 8?
7. If you divide 6 oranges equally among 3 boys, what part of them must 1 boy have?
8. What is 1 third of 6?
9. If 4 yards of cloth cost 8 dollars, what part of 8 dollars would 1 yard cost? What part of 8 dollars would 2 yards cost? What part of 8 dollars would 3 yards cost?
10. What is 1 fourth of 8? What is 2 fourths of 8? What is 3 fourths of 8?
11. If 6 yards of cloth will make 3 coats, what part of 6 yards will make 1 coat? What part of 6 yards will make two coats?
12. What is one third of 6? What is two thirds of 6?
13. If 3 barrels of cider cost 9 dollars, what part of 9 dollars will 1 barrel cost? What part of 9 dollars will 2 barrels cost?
14. What is 1 third of 9? What is 2 thirds of 9?
15. If 2 yards of cloth cost 10 dollars, what part of 10 dollars will 1 yard cost? What part of 10 dollars will 3 yards cost?
16. What is 1 half of 10? What is 3 halves of 10?
17. If 2 barrels of flour cost twelve dollars, what part of twelve dollars will 1 barrel cost? What part of twelve dollars will 3 barrels cost? What part of twelve dollars will 5 barrels cost?
18. What is 1 half of twelve? What is 3 halves of twelve? What is 5 halves of twelve?
19. If 4 barrels of cider cost twelve dollars, what part of twelve dollars will 1 barrel cost? What part of twelve dollars will 3 barrels cost? What part of twelve dollars will 5 barrels cost? What part of twelve dollars will 7 barrels cost?
20. What is 1 fourth of twelve? What is 2 fourths of twelve? 3 fourths? 5 fourths? 7 fourths?
21. If three oranges cost twelve cents, what part of

twelve cents will 1 orange cost? What part of twelve cents will 2 oranges cost? What part of twelve cents will 4 oranges cost? What part of twelve cents will 5 oranges cost? 7 oranges? 10 oranges?

22. What is one third of twelve? 2 thirds? 4 thirds? 5 thirds? 7 thirds? 10 thirds?

23. If five bushels of wheat cost 10 dollars, what part of 10 dollars will 1 bushel cost? What part of 10 dollars will 2 bushels cost? 3 bushels? 4 bushels? 6 bushels? 7 bushels?

24. What is 1 fifth of ten? 2 fifths? 3 fifths? 4 fifths? 6 fifths? 7 fifths?

25. What is 1 half of fourteen? 1 seventh? 2 sevenths? 3 sevenths? 5 sevenths?

26. What is 1 third of fifteen? 2 thirds? 1 fifth? 2 fifths? 3 fifths? 4 fifths?

27. What is 1 half of sixteen? 3-fourths? 1 eighth? 3 eighths? 5 eighths? 7 eighths? 1 sixteenth?

28. What is 1 half of eighteen? 2 thirds? 1 sixth? 5 sixths? 1 ninth? 2 ninths? 4 ninths? 5 ninths? 7 ninths? 8 ninths? 1 eighteenth? 5 eighteenthths?

29. What is 1 half of twenty? 1 fourth? 3 fourths? 1 fifth? 3 fifths? 2 fifths? 4 fifths? 1 twentieth? 3 twentieths? 7 twentieths?

30. What is 1 third of twenty-one? 2 thirds? 1 seventh? 5 sevenths? 3 sevenths? 6 sevenths? 4 sevenths?

31. What is 1 half of twenty-two? 1 eleventh? 3 elevenths? 5 elevenths? 7 elevenths? 10 elevenths?

32. What is 1 half of twenty-four? 1 third? 2 thirds? 1 fourth? 3 fourths? 1 sixth? 5 sixths? 1 eighth? 3 eighths? 7 eighths? 1 twelfth? 5 twelfths? 7 twelfths?

33. What is 1 half of twenty-six?

34. What are 2 thirds of twenty-seven? 2 ninths? 4 ninths? 5 ninths? 8 ninths? 7 ninths?

35. What is 1 half of twenty-eight? 3 fourths? 2 sevenths? 5 sevenths? 3 sevenths?

36. What is  $\frac{1}{6}$  of thirty?  $\frac{3}{5}$  of thirty?  $\frac{7}{10}$  of thirty?  $\frac{2}{3}$  of thirty?  $\frac{1}{2}$  of thirty?

37. What is  $\frac{1}{2}$  of thirty-two?  $\frac{3}{4}$  of thirty-two?  $\frac{5}{8}$  of thirty-two?  $\frac{1}{16}$  of thirty-two?

38. What is  $\frac{1}{2}$  of thirty-four?

39. What is  $\frac{5}{6}$  of thirty-six?  $\frac{2}{3}$  of thirty-six?  $\frac{1}{2}$  of thirty-six?  $\frac{7}{12}$  of thirty-six?  $\frac{4}{9}$  of thirty-six?  $\frac{3}{4}$  of thirty-six?

40. What is  $\frac{1}{2}$  of thirty-eight?

41. What is  $\frac{1}{3}$  of thirty-nine?

42. What is  $\frac{3}{4}$  of forty?  $\frac{7}{8}$  of forty?  $\frac{9}{10}$  of forty?  $\frac{1}{2}$  of forty?

43. What is  $\frac{3}{7}$  of forty-two?  $\frac{5}{6}$  of forty-two?

B. 1. A boy having twelve apples, kept  $\frac{1}{4}$  of them himself, and divided the other  $\frac{3}{4}$  of them equally among 4 of his companions; how many did he give them apiece?

2.  $\frac{3}{4}$  of twelve are how many times 4?

3. A man having fourteen bushels of grain, divided  $\frac{5}{7}$  of it equally among 3 men; how much did he give them apiece?

4.  $\frac{5}{7}$  of fourteen are how many times 3?

5. A man having fifteen shillings, gave away  $\frac{4}{5}$  of it, how many dollars did he give away?

6.  $\frac{4}{5}$  of nineteen are how many times 6?

7. A man having twenty-one cents, paid away  $\frac{6}{7}$  of them for oranges at 5 cents apiece; how many oranges did he buy?

8.  $\frac{6}{7}$  of twenty-one are how many times 5?

9. A man bought a piece of cloth for twenty-four shillings, and sold it again for  $\frac{5}{3}$  of what he gave for it; how many dollars did he sell it for?

10.  $\frac{5}{3}$  of twenty-four are how many times 6?

11.  $\frac{7}{5}$  of twenty are how many times 6?

12.  $\frac{5}{7}$  of thirty-five are how many times 8?

13.  $\frac{7}{6}$  of thirty-six are how many times 5?

14.  $\frac{9}{7}$  of forty-two are how many times 8?

15.  $\frac{7}{9}$  of forty-five are how many times 6?

16.  $\frac{5}{6}$  of forty-eight are how many times 7?
17.  $\frac{6}{5}$  of fifty are how many times 9?
18.  $\frac{8}{9}$  of fifty-four are how many times 5?
19.  $\frac{9}{7}$  of sixty are how many times 10?
20.  $\frac{7}{6}$  of sixty are how many times 8?
21.  $\frac{9}{7}$  of sixty-three are how many times 7?
22.  $\frac{10}{8}$  of sixty-four are how many times 9?
23.  $\frac{6}{8}$  of seventy-two are how many times 7?
24.  $\frac{4}{7}$  of eighty-four are how many times 9?
25.  $\frac{7}{10}$  of ninety are how many times 8?

C. 1. Charles had 6 apples, and gave  $\frac{1}{3}$  of them to John; how many did he give him?

2. Albert had 9 cents, and spent  $\frac{2}{3}$  of them; how many had he left?

3. James had 10 pears, and gave  $\frac{1}{2}$  of them to one of his companions, and  $\frac{2}{5}$  of them to another; how many did he give away?

4. If 3 yards of cloth cost 6 dollars, what is that a yard?

5. If 4 yards of cloth cost twelve dollars, what will 2 yards cost?

6. If 9 apples cost eighteen cents, what will 3 apples cost?

7. If 3 oranges cost 18 cents, what will 2 cost?

8. James had twenty-five cents, and he gave  $\frac{4}{5}$  of them for 10 apples; how much did he give for all the apples? how much apiece?

9. A man had thirty dollars, and gave  $\frac{5}{6}$  of them for 8 yards of cloth; how much did he give a yard?

10. A man had forty yards of cloth, and sold  $\frac{3}{5}$  of it for twenty-four dollars; what was that a yard?

11. A man had forty-two barrels of flour, and sold  $\frac{2}{7}$  of it for 6 dollars a barrel; how much did it come to.

12. A boy had sixty-three nuts, and divided  $\frac{4}{7}$  sev-



ents of them equally among six of his companions; how many did he give them apiece?

13. If 4 yards of cloth cost twelve dollars, what will three yards cost?

14. If five oranges cost twenty-five cents, what will 3 cost?

15. If 3 oranges cost fifteen cents, what will 7 cost?

16. If three barrels of cider cost twelve dollars, what will 10 barrels cost?

17. If 7 pounds of flour cost thirty-five cents, what will nine pounds cost?

18. If 5 firkins of butter cost forty dollars, what will three firkins cost?

19. If 2 men can do a piece of work in six days, how long would it take 4 men to do the same work?

20. If 6 men can do a piece of work in twelve days, in how many days will 3 men do the same work?

21. If 3 men can do a piece of work in twelve days, in how many days will 4 men do the same work?

22. If 2 cocks of a certain size will empty a cistern in 6 hours, in how long a time will 3 cocks of the same size empty it?

23. Three men, setting out on a journey, purchased 5 loaves of bread apiece, but before they had eaten any of it, two other men joined them, and they agreed to share the bread equally among the whole; how many loaves did they have apiece?

24. If 4 barrels of flour cost twenty-four dollars, what would 7 barrels cost? How much cider at 3 dollars a barrel would 7 barrels of flour buy?

25. A man bought a quantity of flour for fifty-four dollars; and another man gave him 9 yards of cloth for  $\frac{5}{6}$  of it; what was the cloth worth a yard?

26. If 9 yards of cloth cost fifty-four dollars, how many boxes of butter, at 4 dollars a box, would 5 yards of the same cloth buy?

27. Bought 8 firkins of butter for seventy-two dol-

lars, and gave 6 of them for 7 yards of cloth; what was a yard of the cloth worth?

28. A man bought 6 barrels of flour for sixty dollars, and gave 4 barrels of it for cider at 5 five dollars a barrel; how many barrels did he buy?

NOTE.—The manner of writing numbers with figures has been explained as far as ten. The numbers from ten to one hundred are written as follows:

Ten is written .....	10
Eleven.....	11
Twelve.....	12
Thirteen .....	13
Fourteen .....	14
Fifteen.....	15
Sixteen .....	16
Seventeen.....	17
Eighteen .....	18
Nineteen.....	19
Twenty .....	20
Twenty-one .....	21
Twenty-two .....	22
Twenty-three.....	23
Twenty-four .....	24
Twenty-five .....	25
Twenty-six.....	26
Twenty-seven.....	27
Twenty-eight .....	28
Twenty-nine.....	29
Thirty.....	30
Thirty-one, etc.....	31
Forty .....	40
Fifty.....	50
Sixty .....	60
Seventy .....	70
Eighty.....	80
Ninety .....	90
One hundred.....	100

## SECTION VI.

A. 1. BOUGHT 1 half of a yard of cloth for 1 shilling, what would be the price of a yard at the same rate?

2. If 1 half pint of cherries cost 2 cents, what will a pint cost?

3. If 1 fourth of a barrel of flour cost 2 dollars, what would a barrel cost?

4. 2 is 1 half of what number? 1 fourth of what number?

5. If 1 third of a yard of cloth cost 2 dollars, what is that a yard?

6. 2 is 1 third of what number?

7. If 1 third of a yard of cloth cost 3 dollars, what is that a yard?

8. 3 is 1 third of what number?

9. If 1 fourth of a firkin of butter cost 3 dollars, what is that a firkin?

10. 3 is 1 fourth of what number?

11. A man bought 1 third of a bushel of wheat for 4 shillings, what would a bushel cost at that rate?

12. 4 is 1 third of what number?

13. If a man can ride 2 miles in 1 fifth of an hour, how far can he ride in an hour?

14. 2 is 1 fifth of what number?

15. A man, being asked the age of his eldest son, answered that his youngest son, who was 3 years old, was just 1 fifth of the age of his eldest son; how old was the eldest son?

16. 3 is 1 fifth of what number?

17. A man bought 1 sixth part of a hundred weight of sugar for 2 dollars, what would a hundred weight cost at the same rate?

18. 2 is 1 sixth of what number?

19. Bought 1 fifth of a pound of starch for 5 cents, what was that a pound?

20. 5 is 1 fifth of what number?

21. Bought 1 fourth of a pound of aquafortis for 6 cents, what was that a pound?

22. 6 is 1 fourth of what number?

23. Bought 1 seventh of a hundred weight of cocoa for 4 dollars, what would 1 hundred weight cost at the same rate?

24. 4 is 1 seventh of what number?

25. 7 is 1 fifth of what number?

26. 5 is 1 third of what number?

27. 4 is 1 eighth of what number?

28. 6 is one sixth of what number?

29. 8 is 1 third of what number?

30. 9 is 1 fourth of what number?

31. 7 is 1 sixth of what number?

32. 8 is 1 seventh of what number?

33. 9 is 1 eighth of what number?

34. 8 is 1 tenth of what number?

35. 7 is 1 ninth of what number?

36. 6 is 1 fifth of what number?

37. 10 is 1 seventh of what number?

B. 1. A man bought some linen and some cotton cloth; for the linen he gave 4 shillings a yard, which was twice as much as he gave for the cotton; what did he give a yard for the cotton?

2. 4 is 2 times what number?

3. If 2 thirds of a yard of cloth cost 6 dollars, what would 1 third cost?

4. 6 is 2 times what number?

5. If 3 fourths of a barrel of flour cost 6 dollars, what will 1 fourth of a barrel cost?

6. 6 is 3 times what number?

7. If 2 fifths of a pound of chocolate cost 8 cents, what would 1 fifth of a pound cost?

8. 8 is 2 times what number?

9. If 3 fifths of a pound of candles cost 9 cents, what will 1 fifth of a pound cost?

10. 9 is 3 times what number?

11. If 2 sevenths of a pound of spermaceti candles cost 10 cents, what will 1 seventh of a pound cost?

12. 10 is 2 times what number?

13. If 5 eighths of a pound of cotton cost 10 cents, what will 1 eighth cost?

14. 10 is 5 times what number?

15. If 2 thirds of a yard of cloth cost 4 dollars, what will 1 third cost? If 1 third of a yard cost 2 dollars, what will a yard cost?\*

16. If 4 is 2 thirds of some number, what is 1 third of the same number? 2 is 1 third of what number? Then 4 is 2 thirds of what?

17. If 2 thirds of a barrel of flour cost 6 dollars, what will 1 third of a barrel cost? If 1 third of a barrel cost 3 dollars, what will a barrel cost?\*

18. If 6 is 2 thirds of some number, what is 1 third of the same number? 3 is 1 third of what number? Then 6 is 2 thirds of what?

19. If 3 fourths of a bushel of wheat cost 6 shillings, what will 1 fourth of a bushel cost? If 1 fourth of a bushel cost 2 shillings, what will a bushel cost?

20. If 6 is 3 fourths of some number, what is 1 fourth of the same number? 2 is 1 fourth of what number? Then 6 is 3 fourths of what?

21. If 2 fifths of a gallon of wine cost 4 shillings, what will 1 fifth of a gallon cost? If 1 fifth of a gallon cost 2 shillings, what will a gallon cost?

22. If 4 is 2 fifths of some number, what is 1 fifth of the same number? 2 is 1 fifth of what number? Then 4 is 2 fifths of what?

23. If 3 sevenths of a pound of tobacco cost 6 cents, what will 1 seventh of a pound cost? If 1 seventh of a pound cost 2 cents, what will a pound cost?

24. If 6 is 3 sevenths of some number, what is 1

---

\* See this section, article A.

seventh of the same number? 2 is 1 seventh of what number? Then 6 is 3 sevenths of what?

25. If 2 sevenths of a barrel of fish cost 4 dollars, what will 1 seventh of a barrel cost? What will a barrel cost?

26. 4 is 2 sevenths of what number?

27. If 3 eighths of a pound of chocolate cost 6 cents, what will 1 eighth of a pound cost? What will a pound cost?

28. 6 is 3 eights of what number?

29. If 8 cents will buy 2 fifths of a pound of aquafortis, how many cents will buy a pound?

30. 8 is 2 fifths of what number?

31. A man bought 3 fourths of a hundred weight of yellow ochre for 9 dollars; what was that a hundred weight?

32. 9 is 3 fourths of what number?

33. 8 is 4 ninths of what number?

34. 9 is 3 tenths of what number?

35. 10 is 5 sevenths of what number?

36. 12 is 3 fifths of what number?

37. 12 is 4 ninths of what number?

38. 10 is 2 sevenths of what number?

39. 14 is 7 fifths of what number?

40. 15 is 3 elevenths of what number?

41. 16 is 2 fifths of what number?

42. 18 is 6 tenths of what number?

43. 20 is 5 ninths of what number?

44. 21 is 3 ninths of what number?

45. 25 is 8 ninths of what number?

C. 1. If 5 eighths of a cask of claret wine cost 15 dollars, what is that a cask? How much cider at 6 dollars a barrel would it take to pay for a cask of the wine?

2. 15 is 5 eighths of how many times 4?

3. If 2 thirds of a pound of coffee cost 18 cents, how much would a pound cost? How many oranges at 5 cents apiece, might be bought for a pound?

4. 18 is 2 thirds of how many times 5?

5. A man bought 4 sevenths of a hundred weight of sugar for 20 shillings, how many dollars would a hundred weight come to at the same rate?

6. 20 is 4 sevenths of how many times 6?

7. A man sold a cow for 21 dollars, which was only 7 tenths of what she cost him; how much did she cost him? When he bought her, he paid for her with cloth at 8 dollars a yard; how many yards of cloth did he give?

8. 21 is seven tenths of how many times 8?

9. A man being asked the age of his youngest son, answered, that the age of his eldest son was 24 years, which was three fifths of his own age; and that his own age was 10 times as much as that of his youngest son; what was his age? and what was the age of his youngest son?

10. 24 is 3 fifths of how many times 10?

11. 27 is 3 fifths of how many times 7?

12. 28 is 7 tenths of how many times 9?

13. 30 is 5 eighths of how many times 7?

14. 32 is 4 sevenths of how many times 6?

15. 36 is 9 eighths of how many times 5?

16. 40 is 8 ninths of how many times 8?

17. 42 is 6 fifths of how many times 4?

18. 45 is 9 eighths of how many times 6?

19. 48 is 8 ninths of how many times 7?

20. 50 is 5 sevenths of how many times 8?

21. 54 is 9 sixths of how many times 7?

22. 56 is 7 ninths of how many times 10?

23. 60 is 10 sevenths of how many times 4?

24. 63 is 9 eighths of how many times 5?

25. 64 is 8 ninths of how many times 7?

26. 70 is 10 sevenths of how many times 8?

27. 72 is 9 fifths of how many times 6?

28. 80 is 10 thirds of how many times 4?

29. 80 is 8 fifths of how many times 6?

D. 1. A boy gave away 4 cents, which was  $\frac{1}{3}$  third of all he had; how many had he at first?

2. A boy gave 5 apples to one of his companions, which was  $\frac{1}{4}$  fourth of what he had; how many had he?

3. A man paid away 4 dollars, which was  $\frac{2}{3}$  thirds of all the money he had; how much had he?

4. A man sold a watch for 18 dollars, which was  $\frac{3}{4}$  fourths of what it cost him; how much did it cost?

5. A man sold a cow for 15 dollars, which was  $\frac{3}{5}$  fifths of what the cow cost; how much did he lose by his bargain?

6. A man bought 12 yards of cloth, and sold it for 54 dollars, which was  $\frac{9}{8}$  eighths of what it cost him; what did it cost him a yard? and how much did he gain by his bargain?

7. There is a pole standing in the water, so that 10 feet of it is above the water, which is  $\frac{2}{3}$  thirds of the whole length of the pole; how long is the pole?

8. There is a pole  $\frac{2}{3}$  thirds under water, and 4 feet out; how long is the pole?

9. There is a pole  $\frac{2}{5}$  fifths under water, and 6 feet out of the water; how long is the pole?

10. There is an orchard, in which  $\frac{3}{7}$  sevenths of the trees bear cherries, and  $\frac{2}{7}$  sevenths bear peaches, and 10 trees bear plums; how many trees are there in the orchard? and how many of each sort?

11. There is a school, in which  $\frac{2}{9}$  ninths of the boys learn arithmetic,  $\frac{3}{9}$  ninths learn grammar,  $\frac{1}{9}$  ninth learn geography,  $\frac{1}{9}$  ninth learn geometry, and  $\frac{1}{9}$  ninth learn to write; how many are there in the school? and how many attending to each study?

12. A man sold a watch for 63 dollars, which was  $\frac{7}{5}$  fifths of what it cost him; how much did he gain by the bargain?



## MISCELLANEOUS EXAMPLES.

1. IF 1 yard of cloth cost 4 dollars, what will 5 yards cost?

2. A man bought 3 pounds of raisins, at 7 cents a pound, and 16 oranges, at 4 cents apiece, and 1 pound of candles for 16 cents; what did they all come to?

3. A boy had 37 apples; he kept 5 himself, and divided the rest equally among four companions; how many did he give them apiece?

4. Two men are 40 miles apart, and both travelling the same way; the hindermost man gains upon the other 5 miles each day; in how many days will he overtake him?

5. Two men are travelling the same way, one travels at the rate of 38 miles a day, the other, who is behind the former, travels 44 miles; how much does he gain of the first each day? and in how many days would he gain 60 miles?

6. A fox is 80 rods before a greyhound, and is running at the rate of 27 rods in a minute; the greyhound is following at the rate of 31 rods in a minute; in how many minutes will the greyhound overtake the fox?

7. If 2 yards of cloth cost 6 dollars, what would 4 yards cost? what would 12 yards cost?

8. If 8 sheep cost 24 dollars, what would 3 cost?

9. If 4 tons of hay will keep 3 horses through the winter, how many tons will keep 30 horses the same time?

10. If a man spends 8 shillings a day, how many dollars will he spend in a week?

11. Bought 10 pieces of cloth, each containing 5 yards, for 100 dollars; what was it a piece? and how much a yard?

12. If the wages of 12 weeks come to 60 dollars, what is that a month? and how much for 5 weeks?

13. If 7 horses eat 14 bushels of oats in 1 week, how many bushels would 15 horses eat in the same time?

14. If 3 horses eat 8 bushels of oats in 2 weeks, how long would it take them to eat 40 bushels?

15. If 1 horse eat 1 bushel of oats in 3 days, in how many days would 4 horses eat 36 bushels?

16. If 2 men spend 12 dollars in 1 week, how many dollars would 3 men, at the same rate, spend in 5 weeks?

17. If a staff 3 feet long cast a shadow of 2 feet at 12 o'clock, what is the length of a pole that casts a shadow eighteen feet at the same time of day?

18. If 47 gallons of water, in 1 hour, run into a cistern containing 108 gallons, and by a pipe 38 gallons run out in an hour, how much remains in the cistern in an hour? and in how many hours will the cistern be filled?

19. If 4 men can do a piece of work in 8 days, how many men would it take to do the same work in 4 days?

20. If 6 men can do a piece of work in 9 days, in how many days would 2 men do it?

21. If 8 men can do a piece of work in 5 days, in how many days would they do a piece of work 4 times as large?

22. If 7 men can do a piece of work in 3 days, how many men would it take to do a piece of work 5 times as large in the same time?

23. If 8 men can do a piece of work in 4 days, in how many days would 2 men do a piece of work one half as large?

24. A man bought a cask of wine containing 63 gallons,  $\frac{3}{7}$  of which leaked out; and he sold the remainder for 36 dollars; how much per gallon did he sell it for?

25. If a cask of wine cost 48 dollars, what is  $\frac{5}{8}$  of it worth?

26. A man bought 7 oranges for 6 cents apiece, and sold them all for 54 cents, how much did he gain by the bargain?

27. A man bought 8 yards of cloth for 56 dollars.

and sold it again for 9 dollars a yard; how much did he gain by the bargain?

28. A man bought 8 barrels of flour for 40 dollars; how much must he sell it at per barrel to gain 16 dollars?

29. A man bought 5 firkins of butter at 7 dollars a firkin; how much must he sell it per firkin to gain 10 dollars?

30. A man gave 35 cents for his breakfast, which was 5 eighths of what he gave for his dinner; what did he give for his dinner?

31. A ship's crew of 6 men have provision for 3 months; how many months would it last one man?

32. A ship's crew have provision sufficient to last 1 man 27 months; how long would it last 9 men?

33. A ship's crew have provision sufficient to last 3 men 10 months; how long would it last 5 men?

34. A man built 40 rods of wall in a certain time; another man can build 9 rods while the first builds 5; how much would he build in the same time?

---

## SECTION VII.

*If the combinations in this section should be found too difficult, they may be omitted until reviewing the book.*

A. 1. A MAN being asked the age of his eldest son, answered, that his youngest son was 6 years old, and that 2 thirds of the youngest son's age was just 1 fifth of the eldest son's age. Required the age of the eldest son?

2. 2 thirds of 6 is 1 fifth of what number?

3. A man being asked how many sheep he had, said that he had them in two pastures; in one pasture he had 8; and that 3 fourths of these was just 1 third of

what he had in the other. How many were there in the other?

4.  $\frac{3}{4}$  of 8 is  $\frac{1}{3}$  of what number?

5. Two boys talking of their ages, one said he was 9 years old. Well, said the other,  $\frac{2}{3}$  of your age is exactly  $\frac{3}{4}$  of my age, now, if you will tell me how old I am, I will give you as many apples as I am years old. What was his age?

6.  $\frac{2}{3}$  of 9 is  $\frac{3}{4}$  of what number?

7. Two boys counting their money, one said he had 10 cents. The other says,  $\frac{4}{5}$  of your money is exactly  $\frac{2}{7}$  of mine; now, if you will tell how many I have, I will give you  $\frac{1}{2}$  of them. How many had he?

8.  $\frac{4}{5}$  of 10 is  $\frac{2}{7}$  of what number?

9.  $\frac{5}{6}$  of 12 is  $\frac{2}{3}$  of what number?

10.  $\frac{6}{7}$  of 14 is  $\frac{4}{9}$  of what number?

11.  $\frac{6}{5}$  of 15 is  $\frac{2}{3}$  of what number?

12.  $\frac{7}{9}$  of 18 is  $\frac{2}{5}$  of what number?

13.  $\frac{4}{5}$  of 20 is  $\frac{8}{7}$  of what number?

14.  $\frac{8}{7}$  of 21 is  $\frac{6}{10}$  of what number?

15.  $\frac{5}{6}$  of 24 is  $\frac{10}{7}$  of how many times 5?

16.  $\frac{3}{7}$  of 28 is  $\frac{2}{8}$  of how many times 7?

17.  $\frac{4}{5}$  of 30 is  $\frac{6}{7}$  of how many times 8?

18.  $\frac{6}{8}$  of 32 is  $\frac{8}{9}$  of how many times 5?

19.  $\frac{4}{9}$  of 36 is  $\frac{8}{10}$  of how many times 6?

20.  $\frac{3}{4}$  of 40 is  $\frac{5}{7}$  of how many times 8?

21.  $\frac{6}{9}$  of 45 is  $\frac{3}{5}$  of how many times 7?

22.  $\frac{5}{6}$  of 48 is  $\frac{10}{7}$  of how many times 3?

23.  $\frac{4}{7}$  of 63 is  $\frac{6}{5}$  of how many times 8?

24.  $\frac{5}{9}$  of 72 is  $\frac{4}{7}$  of how many times 9?

- B. 1. 4 fifths of 15 is 6 tenths of how many thirds of 21?
2. 4 thirds of 18 is 8 ninths of how many sevenths of 35?
3. 6 sevenths of 21 is 2 thirds of how many thirds of 24?
4. 5 fourths of 24 is 10 sevenths of how many fifths of 40?
5. 5 eighths of 32 is 2 fifths of how many fifths of 35?
6. 4 sevenths of 63 is 6 eighths of how many ninths of 45?
7. 3 sevenths of 56 is 4 ninths of how many fourths of 28?
8. 3 eighths of 64 is 6 tenths of how many sixths of 30?
9. 2 eighths of 72 is 3 tenths of how many fifths of 40?

- C. 1. Two times eleven are how many?
2. Two times twelve are how many?
3. Two times thirteen are how many?
4. Two times fourteen are how many?
5. Two times fifteen are how many?
6. Two times sixteen are how many?
7. Two times seventeen are how many?
8. Two times eighteen are how many?
9. Two times nineteen are how many?
10. Two times twenty are how many?
11. Three times eleven are how many?
12. Three times twelve are how many?
13. Three times thirteen are how many?
14. Three times fourteen are how many?
15. Three times fifteen are how many?
16. Three times sixteen are how many?
17. Three times seventeen are how many?
18. Three times eighteen are how many?
19. Three times nineteen are how many?

20. Three times twenty are how many?
21. Four times eleven are how many?
22. Four times twelve are how many?
23. Four times thirteen are how many?
24. Four times fourteen are how many?
25. Four times fifteen are how many?
26. Four times sixteen are how many?
27. Four times seventeen are how many?
28. Four times eighteen are how many?
29. Four times nineteen are how many?
30. Four times twenty are how many?
31. Five times eleven are how many?
32. Five times twelve are how many?
33. Five times thirteen are how many?
34. Five times fourteen are how many?
35. Five times fifteen are how many?
36. Five times sixteen are how many?
37. Five times seventeen are how many?
38. Five times eighteen are how many?
39. Five times nineteen are how many?
40. Five times twenty are how many?
41. Six times eleven are how many?
42. Six times twelve are how many?
43. Six times thirteen are how many?
44. Six times fourteen are how many?
45. Six times fifteen are how many?
46. Six times sixteen are how many?
47. Six times seventeen are how many?
48. Six times eighteen are how many?
49. Six times nineteen are how many?
50. Six times twenty are how many?
51. Seven times eleven are how many?
52. Seven times twelve are how many?
53. Seven times thirteen are how many?
54. Seven times fourteen are how many?
55. Seven times fifteen are how many?
56. Seven times sixteen are how many?
57. Seven times seventeen are how many?

58. Seven times eighteen are how many?
59. Seven times nineteen are how many?
60. Seven times twenty are how many?
61. Eight times eleven are how many?
62. Eight times twelve are how many?
63. Eight times thirteen are how many?
64. Eight times fourteen are how many?
65. Eight times fifteen are how many?
66. Eight times sixteen are how many?
67. Eight times seventeen are how many?
68. Eight times eighteen are how many?
69. Eight times nineteen are how many?
70. Eight times twenty are how many?
71. Nine times eleven are how many?
72. Nine times twelve are how many?
73. Nine times thirteen are how many?
74. Nine times fourteen are how many?
75. Nine times fifteen are how many?
76. Nine times sixteen are how many?
77. Nine times seventeen are how many?
78. Nine times eighteen are how many?
79. Nine times nineteen are how many?
80. Nine times twenty are how many?
81. Ten times eleven are how many?
82. Ten times twelve are how many?
83. Ten times thirteen are how many?
84. Ten times fourteen are how many?
85. Ten times fifteen are how many?
86. Ten times sixteen are how many?
87. Ten times seventeen are how many?
88. Ten times eighteen are how many?
89. Ten times nineteen are how many?
90. Ten times twenty are how many?

## SECTION VIII.

A. 1. If you cut an apple into two equal parts, what is one of those parts called?\*

2. How many halves of an apple will make the whole apple?

3. If you cut an apple into 3 equal parts, what is 1 of those parts called? what are 2 of the parts called?

4. How many thirds of an apple will make the whole apple?

5. If you cut an apple into 4 equal parts, what is 1 of those parts called? what are 2 of those parts called? what are three of them called?

6. How many fourths of an apple make the whole apple?

7. If an apple be cut into 5 equal parts, what is 1 of the parts called? what are 2 of the parts called? what are 3 of the parts called? what are 4 of the parts called?

8. How many fifths of an apple make the whole apple?

9. If an apple be cut into 6 equal parts, what is 1 of the parts called? what are 2 of the parts called? what 3? what 4? what 5?

10. How many sixths of an apple make the whole apple?

11. If an apple be cut into 7 equal parts, what is 1 of the parts called? what are 2 of the parts called? what 3? what 4? what 5? what 6?

Let the instructor ask the pupils the divisions of a unit in this manner as far as the division into 10 parts. It would be well to ask them further. Then let him begin again, and suppose an orange instead of an apple. After applying the division to several different things, a line may be drawn on the blackboard and divided. It is well often to require the pupil to make the requisite division of a line on the board.

12. A man had a bushel of corn, and wished to

---

\* See Section III, article B, remark before question 1 and 17.



give 1 half of a bushel apiece to some laborers; how many could he give it to?

13. How many halves are there in 1?

14. A man divided 2 barrels of flour among his laborers, giving them 1 half of a barrel apiece; how many men did he give it to?

15. How many halves are there in 2?\*

16. In 3 bushels of corn, how many half bushels?

17. How many halves are there in 3?

18. A boy divided 4 oranges among his companions, giving them 1 half of an orange apiece; how many boys did he give them to?

19. How many halves are there in 4?

20. A man having some laborers, gave them 1 half a dollar apiece; it took 3 dollars and 1 half a dollar to pay them; how many laborers were there?

21. How many halves are there in 3 and 1 half?

22. How many halves are there in 5?

23. How many halves are there in 7 and 1 half?

24. How can you tell how many halves there are in any number?

*Ans.* Since there are 2 halves in one, there must be twice as many halves as there are whole ones.

25. If you had 1 orange, and should divide it among your companions, giving them 1 third apiece, how many could you give it to?

26. How many thirds are there in 1?

27. If you cut 2 oranges each into 3 pieces, how many pieces would they make?

28. If you cut 3 oranges into 3 pieces each, how many pieces would they make?

29. If you cut 4 apples each into 3 pieces, how many pieces would they make?

30. How many thirds are there in 2? in 3? in 4? in 5?

31. How can you tell how many thirds there are in any number?

*Ans.* Since there are 3 thirds in one, there will be 3 times as many thirds as there are whole ones.

32. If you had 2 bushels and 1 third of a bushel of corn to give to some poor persons, how many could you give it to if you should give them 1 third of a bushel apiece?

33. How many thirds are there in 2 and 1 third?

34. If a horse can eat 1 third of a bushel of oats in 1 day, how many days would it take him to eat 3 bushels and 2 thirds of a bushel?

35. How many thirds are there in 3 and 2 thirds?

36. If 1 horse can eat 1 third of a bushel of oats in a day, how many horses will it take to eat 5 bushels and 2 thirds of a bushel in the same time?

37. In 5 and 2 thirds how many thirds?

38. In 7 and 1 third how many thirds?

39. If a horse will eat 1 fourth of a ton of hay in 1 month, how many horses will eat a ton in the same time? How many will eat 2 tons? How many will eat 3 tons? 4 tons? 5 tons? 6 tons?

40. How many fourths are there in 1? in 2? in 3? in 4? in 5? in 6?

41. How can you tell how many fourths there are in any number.

42. How many fourths are there in 4 and 1 fourth?

43. In 5 tons of hay and 3 fourths of a ton, how many fourths of a ton?

44. In 5 and 3 fourths how many fourths?

45. In 7 and 1 fourth how many fourths?

46. In 9 and 3 fourths how many fourths?

47. If a horse eat 1 fifth of a ton of hay in a month, how many horses will eat a ton in the same time? 2 tons? 3 tons? 4 tons? 5 tons?

48. How many fifths are there in 1? in 2? in 3? in 4? in 5? in 7? in 9?

49. How can you tell how many fifths there are in any number?

50. In 2 and 1 fifth how many fifths?

51. In 3 dollars and 2 fifths of a dollar, how many fifths of a dollar.
52. In 3 and 2 fifths how many fifths?
53. In 5 and 3 fifths how many fifths?
54. In 6 and 4 fifths how many fifths?
55. How many sixths are there in 1? in 2? in 3?  
in 4? in 5? in 7? in 8?
56. In 2 and 2 sixths how many sixths?
57. In 3 and 4 sixths how many sixths?
58. In 6 and 5 sixths how many sixths?
59. How many sevenths are there in 1? in 2? in 3?  
in 4? in 6? in 9? in 10?
60. In 3 and 1 seventh how many sevenths?
61. In 5 and 3 sevenths how many sevenths?
62. In 7 and 5 sevenths how many sevenths?
63. How many eighths are there in 1? in 3? in 5?  
in 8?
64. In 2 and 3 eighths how many eighths?
65. In 3 and 5 eighths how many eighths?
66. In 5 and 7 eighths how many eighths?
67. How many ninths are there in 1? in 2? in 7?  
in 5?
68. In 2 and 2 ninths how many ninths?
69. In 4 and 3 ninths how many ninths?
70. In 6 and 4 ninths how many ninths?
71. In 8 and 7 ninths how many ninths?
72. How many tenths in 1? in 2? in 5? in 8?
73. In 3 and 3 tenths how many tenths?
74. In 4 and 7 tenths how many tenths?
75. In 8 and 9 tenths how many tenths?
76. In 7 and 4 tenths how many tenths?
77. In 9 and 8 tenths how many tenths?
78. In 7 and 4 sevenths how many sevenths?
79. In 9 and 2 thirds how many thirds?
80. In 10 and 3 fourths how many fourths?
81. In 8 and 4 fifths how many fifths?
82. In 7 and 5 ninths how many ninths?

B. 1. If you give 4 men  $1\frac{1}{2}$  of a barrel of flour apiece, how many barrels will it take?

2. In 4 halves how many times 1?

3. If you give 3 boys  $1\frac{1}{2}$  of an orange apiece, how many oranges will it take?

4. In 3 halves how many times 1?

5. If you give five men  $1\frac{1}{2}$  of a dollar apiece, how many dollars will it take?

6. In 5 halves how many times 1?

7. In 6 halves how many times 1?

8. In 7 halves how many times 1?

9. How can you tell how many whole ones there are in any number of halves?

10. A man divided some corn among 6 persons, giving them  $\frac{1}{3}$  of a bushel apiece; how many bushels did it take?

11. In 6 thirds how many times 1?

12. In 5 thirds how many times 1?

13. A man gave 8 paupers  $\frac{1}{3}$  of a dollar apiece, how many dollars did it take?

14. In 8 thirds how many times 1?

15. In ten thirds how many times 1?

16. How can you tell how many whole ones there are in any number of thirds?

17. If a man spends  $\frac{1}{4}$  of a dollar in 1 day, how many dollars will he spend in 8 days? How many in 7 days? How many in 11 days?

18. In 8 fourths how many times 1?

19. In 7 fourths how many times 1?

20. In 11 fourths how many times 1?

21. In 13 fourths how many times 1?

22. In 18 fourths how many times 1?

23. How can you tell how many whole ones there are in any number of fourths?

24. If  $\frac{1}{5}$  of a barrel of flour will last a family 1 day, how many barrels will last them 10 days? How many 8 days? 11 days? 17 days?

25. In 10 fifths how many times 1?

26. In 8 fifths how many times 1?
27. In 11 fifths how many times 1?
28. In 17 fifths how many times 1?
29. In 18 sixths how many times 1?
30. In 23 fifths how many times 1?
31. In 21 sevenths how many times 1?
32. In 24 eighths how many times 1?
33. In 36 ninths how many times 1?
34. In 30 tenths how many times 1?
35. In 35 fourths how many times 1?
36. In 37 eighths how many times 1?
37. In 43 fifths how many times 1?
38. In 48 ninths how many times 1?
39. In 53 tenths how many times 1?
40. In 57 eighths how many times 1?
41. In 76 tenths how many times 1?
42. In 78 ninths how many times 1?

---

### SECTION IX.

- A. 1. If a breakfast for 1 man costs 1 third of a dollar, what would a breakfast for 2 men cost?
2. How much is 2 times 1 third?
3. If it takes you 1 third of an hour to travel 1 mile, how long will it take you to travel 3 miles?
4. How much is 3 times 1 third?
5. If 1 man can eat 1 third of a pound of meat at a meal, how much can 5 men eat?
6. How much is 7 times 1 third?
7. If 1 man can eat 2 thirds of a pound of meat for dinner, how many thirds of a pound would 3 men eat?
8. How much is 2 times 2 thirds?
9. A man gave to 4 paupers 2 thirds of a dollar apiece, how many thirds of a dollar did he give them? how many dollars?

10. 5 times 2 thirds are how many thirds? how many times 1?
11. If you give 3 men 1 fourth of a dollar apiece, how many fourths of a dollar will it take?
12. 3 times 1 fourth are how many fourths?
13. If you give 3 men 3 fourths of a bushel of corn apiece, how many fourths of a bushel will it take? how many bushels?
14. 5 times 3 fourths are how many fourths? how many times 1?
15. If 1 horse eats 1 fifth of a bushel of oats in a day, how much will 4 horses eat in the same time?
16. 3 times 1 fifth are how many fifths?
17. If 1 man can earn 3 fifths of a dollar in a day, how much can he earn in 4 days?
18. 7 times 3 fifths are how many fifths? how many times 1?
19. If a family consume 2 sevenths of a barrel of flour in a week, how much would they consume in 5 weeks?
20. 6 times 2 sevenths are how many sevenths? how many times 1?
21. 5 times 3 eighths are how many eighths? how many times 1?
22. How much is 6 times 3 fifths?
23. How much is 7 times 5 sixths?
24. How much is 5 times 4 ninths?
25. How much is 6 times 8 ninths?
26. How much is 7 times 9 tenths?
27. How much is 5 times 7 tenths?
28. How much is 6 times 7 eighths?
29. How much is 9 times 5 eighths?
30. How much is 8 times 5 sevenths?
31. How much is 7 times 5 sixths?
32. How much is 8 times 7 fourths?
33. How much is 7 times 4 fifths?
34. How much is 5 times 3 eighths?

- B. 1. If 1 bushel of wheat costs a dollar and 1 half, what will 2 bushels cost?
2. How much is 2 times 1 and 1 *half*?\*
3. If a barrel of cider costs 2 dollars and a half, what will 3 barrels cost?
4. How much is 4 times 2 and 1 *half*?
5. If a barrel of beer costs 3 dollars and a half, what will 2 barrels cost?
6. How much is 5 times 3 and 1 *half*?
7. How much is 6 times 3 and 1 *half*?
8. If a box of butter costs 2 dollars and 1 third of a dollar; what will 3 boxes cost?
9. How much is 4 times 2 and 1 *third*?
10. If you give to 2 persons 3 bushels and a third of a bushel of wheat apiece, how many bushels will it take?
11. How much is 5 times 3 and 1 *third*?
12. If you give to 4 persons each 2 oranges and 1 fourth of an orange, how many oranges will it take?
13. How much is 5 times 2 and 1 *fourth*?
14. If it takes 3 yards and 2 thirds of a yard of cloth to make a suit of clothes, how many yards will it take to make 2 suits?
15. How much is 4 times 3 and 2 *thirds*?
16. If a family consume 2 bushels and 2 thirds of a bushel of malt in 1 month, how much will they consume in 3 months?
17. How much is 5 times 2 and 2 *thirds*?
18. How much is 4 times 3 and 3 *fourths*?
19. How much is 2 times 3 and 1 *fourth*?
20. How much is 3 times 3 and 3 *fourths*?
21. How much is 3 times 5 and 1 *fourth*?
22. If a horse eats 3 tons and 1 fifth of a ton of hay in a year, how much will 2 horses eat in the same time?

---

\*This is to be understood 2 times 1 and 2 times 1 half, and to be answered thus: 2 times 1 are 2, and two times 1 half are 2 halves or 1, which, added to 2, makes 3.

23. How much is 4 times 3 and 1 *fifth*?
24. If a man can travel 4 miles and 2 *fifths* of a mile in 1 hour, how far will he travel in 3 hours?
25. How much is 5 times 4 and 2 *fifths*?
26. How much is 3 times 5 and 3 *fifths*?
27. How much is 4 times 6 and 2 *fifths*?
28. How much is 3 times 2 and 1 *sixth*?
29. How much is 2 times 5 and 3 *sixths*?
30. If a yard of cloth costs 4 dollars and 5 *sixths* of a dollar, what will 4 yards cost?
31. How much is 7 times 4 and 5 *sixths*?
32. How much is 2 times 3 and 3 *sevenths*?
33. How much is 3 times 4 and 3 *sevenths*?
34. If a bushel of wheat costs 7 shillings and 3 *eighths*, what will 5 bushels cost at that rate?
35. How much is 3 times 4 and 5 *eighths*?
36. How much is 4 times 3 and 7 *eighths*?
37. A man bought 8 yards of cloth, at 9 dollars and 3 *tenths* a yard; how much did it come to?
38. How much is 6 times 2 and 2 *ninths*?
39. How much is 4 times 5 and 3 *ninths*?
40. A man bought 10 barrels of cider at 3 dollars and 5 *sixths* a barrel; how much did it come to?
41. How much is 3 times 7 and 2 *tenths*?
42. What cost 8 barrels of beef at 9 dollars and 3 *sevenths* a barrel?

C. 1. A boy wished to give 5 other boys 1 half pint of chestnuts apiece; how many pints would it take?

2. A boy wished to give 3 other boys 3 *fourths* of an orange apiece; how many oranges would it take?

3. A man gave to 10 persons 1 *fifth* of a bushel of corn apiece; how many bushels did it take?

4. A man gave 7 men 3 *fourths* of a gallon of beer apiece; how many gallons of beer did it take?

5. If it takes 1 yard and 1 *fourth* of a yard of cloth to make a pair of pantaloons, how many yards would it take to make 8 pairs?



6. If a family consume 2 bushels and  $\frac{3}{5}$  of a bushel of grain in 1 week, how many bushels would they consume in 4 weeks?

7. If a horse eats 3 bushels and  $\frac{4}{7}$  of a bushel of oats in 1 week, how many bushels would he eat in 8 weeks?

8. If a horse eats 5 loads and  $\frac{3}{8}$  of a load of hay in 1 year, how many loads would 6 horses eat?

9. If a man travels 4 miles and  $\frac{5}{9}$  in an hour, how many miles would he travel in 8 hours?

10. If in an orchard of 10 trees, each tree bears 8 bushels and  $\frac{3}{7}$  sevenths, how many bushels will the whole orchard bear?

11. If a man can build 5 rods and  $\frac{7}{8}$  of a rod of wall in 1 day, how many rods can he build in 8 days?

12. If 3 men can build a piece of wall in 4 days and  $\frac{3}{5}$  of a day, how many days would it take 1 man to build it?

13. If 1 man can build 7 rods and  $\frac{2}{5}$  of wall in a day, how many rods would 10 men build?

14. If 1 man can build 3 rods and  $\frac{2}{9}$  of wall in 1 day, how many rods would 3 men build in 4 days?

15. If it takes 1 yard and  $\frac{3}{7}$  of a yard of cloth to make 1 pair of pantaloons, and 2 yards and  $\frac{4}{7}$  sevenths for a coat; how many yards would it take to make 3 pairs of pantaloons and 3 coats?

---

## SECTION X.

A. 1. If a yard of cloth costs 3 dollars, what will 1 half of a yard cost?

2. What is 1 half of 3?\*

3. If a barrel of beer costs 5 dollars, what will 1 half of a barrel cost?

---

\* See Section V., article A.

4. What is 1 half of 5?
5. If 2 barrels of cider cost 7 dollars, what is that a barrel?
6. What is 1 half of 7?
7. What is 1 half of 9?
8. What is 1 half of 11?
9. What is 1 half of 13?
10. What is 1 half of 15?
11. If you divide 1 bushel of wheat equally among 3 persons, what part of a bushel will you give them apiece?
12. If 3 yards of cloth cost 1 dollar, what part of a dollar will 1 yard cost?
13. What is 1 third of 1?
14. How could you divide 2 oranges into 3 equal parts? that is, how can you find 1 third of 2 oranges?\*
15. One third of 2 oranges will be the same as how many thirds of 1 orange?
16. If you divide 2 bushels of wheat equally among 3 persons, what part of a bushel will you give them apiece?
17. If 3 bushels of corn cost 2 dollars, what part of a dollar will 1 bushel cost?

NOTE.—One third of two things is twice as much as one third of one thing. One third of one is one third, and consequently one third of two things is two thirds. In the same manner, one third of four things is four thirds of one thing. If four oranges be cut each into three parts, and then one part of each be taken, it will make four pieces, each of which is one third of one orange. Hence one third of four oranges is four thirds of one orange, that is, one whole one and one third.

18. If 3 bushels of wheat cost 4 dollars, how much is that a bushel?
19. What is 1 third of 2? of 4?
20. If 3 gallons of wine cost 5 dollars, what is that a gallon?
21. What is 1 third of 5? of 7? of 8? of 10? of 11?

---

\* Divide each orange into three parts, and then take one part from each.

22. If a bushel of apples be divided equally among 4 persons, what part of a bushel will they have apiece? What would they have apiece if 2 bushels were divided among them? What if 3 bushels? What if 5 bushels? What if 6 bushels?

23. What is 1 fourth of 1? of 2? of 3? of 5? of 6? of 7? of 9? of 10?

24. If a bushel of malt will serve 5 persons 1 month, how much will serve 1 person the same time?

25. If 2 barrels of cider will serve 5 persons 1 month, how much will serve one person the same time?

26. If 3 barrels of flour be divided among 5 men; how much will each have? If 4 barrels were divided, what would each have? What if 6 barrels were divided? What if 7 barrels were divided?

27. What is 1 fifth of 1? of 2? of 3? of 4? of 6? of 7?

28. What is 1 sixth of 1? of 2? of 3? of 4? of 5? of 7? of 8? of 9? of 10?

29. What is 1 seventh of 1? of 2? of 3? of 4? of 5? of 6?

30. What is 1 eighth of 1? of 2? of 3? of 4? of 5? of 6? of 7? of 8? of 9? of 10?

31. What is 1 ninth of 1? of 2? of 3? of 4? of 5? of 6? of 7? of 8? of 9? of 10? of 11?

32. What is 1 tenth of 1? of 2? of 3? of 4? of 5? of 6? of 7? of 8? of 9? of 10? of 11? of 12? of 13?

33. If 3 yards of cloth cost 2 dollars, what will 1 yard cost? What will 2 yards cost?

34. If 1 bushel of wheat costs 2 dollars, what will 1 third of a bushel cost? What will 2 thirds of a bushel cost?

35. What is 1 third of 2?

36. What is 2 thirds of 2?

37. If a load of wood costs 5 dollars, what will 1 third of a load cost? What will 2 thirds of a load cost?

38. What is  $\frac{1}{3}$  of 5?
39. What is  $\frac{2}{3}$  of 5?
40. What is  $\frac{2}{3}$  of 7?
41. If 4 bushels of salt cost 3 dollars, what will 1 bushel cost? What will 3 bushels cost?
42. What is  $\frac{1}{4}$  of 3?
43. What is  $\frac{3}{4}$  of 3?
44. If a barrel of cider costs 2 dollars, what will  $\frac{1}{5}$  of a barrel cost? What will  $\frac{2}{5}$  of a barrel cost?
45. What is  $\frac{1}{5}$  of 2?
46. What is  $\frac{2}{5}$  of 2?
47. What is  $\frac{1}{5}$  of 7?
48. What is  $\frac{3}{5}$  of 7?
49. If 7 gallons of wine cost 5 dollars, what will a gallon cost? What will 4 gallons cost?
50. What is  $\frac{1}{7}$  of 5?
51. What is  $\frac{4}{7}$  of 5?
52. What is  $\frac{1}{6}$  of 4?
53. What is  $\frac{5}{6}$  of 4?
54. If you divide 7 dollars among 8 men, what part of a dollar will you give them apiece? What would 3 of them have?
55. What is  $\frac{1}{8}$  of 7?
56. What is  $\frac{3}{8}$  of 7?
57. What is  $\frac{1}{9}$  of 10?
58. What is  $\frac{7}{9}$  of 10?
59. What is  $\frac{1}{10}$  of 14?
60. What is  $\frac{4}{10}$  of 14?
61. If 5 yards of cloth cost 17 dollars, what is that a yard? What would 3 yards cost? What would 8 yards cost?
62. What is  $\frac{3}{5}$  of 17?
63. What is  $\frac{8}{5}$  of 17?
64. What is  $\frac{5}{7}$  of 20?
65. What is  $\frac{2}{9}$  of 22?
66. What is  $\frac{3}{8}$  of 27?
67. What is  $\frac{2}{3}$  of 28?

68. What is  $\frac{3}{4}$  of 31?
69. If 5 loads of hay cost 47 dollars, what is that a load? What will 2 loads cost? What will 7 loads cost? What will 12 loads cost?
70. What is  $\frac{2}{5}$  of 47?
71. What is  $\frac{7}{5}$  of 47?
72. What is  $\frac{12}{5}$  of 47?
73. What is  $\frac{4}{7}$  of 48?
74. What is  $\frac{4}{9}$  of 50?
75. What is  $\frac{2}{7}$  of 58?
76. What is  $\frac{3}{8}$  of 61?
77. What is  $\frac{4}{10}$  of 73?
78. What is  $\frac{8}{9}$  of 65?
79. What is  $\frac{9}{10}$  of 78?
80. What is  $\frac{7}{8}$  of 70?

B. 1. If you divide 7 apples equally between 2 boys, how many would you give them apiece?

2. How can you divide 5 oranges equally among 3 persons?

3. Divide 3 bushels of corn equally among 5 men, how much would you give them apiece?

4. A boy had 7 pears, and gave away  $\frac{3}{5}$  of them; how many did he give away? and how many had he left?

5. If 2 yards of cloth cost 3 dollars, what is that a yard?

6. If 4 yards of cloth cost 2 dollars, what is that a yard?  
[Let the answers be given in dollars and cents, or in shillings. 1 dollar is 100 cents.]

7. If 5 bushels of corn cost 7 dollars, what is that a bushel?

8. If a man receives 8 dollars for 6 days' work, what is that per day?

9. If 3 bushels of wheat cost 8 dollars, what will 2 bushels cost?

10. A man had 30 dollars, and gave away  $\frac{3}{7}$  of it; how much did he give away?

11. If 4 yards of cloth cost 10 dollars, what will 3 yards cost?

12. If 3 barrels of cider cost 8 dollars, what will 10 barrels cost?

13. If 7 pounds of flour cost 40 cents, what will 10 pounds cost?

14. If 4 firkins of butter cost 26 dollars, what will 7 firkins cost?

15. If 3 men can do a piece of work in 7 days, how long will it take 1 man to do it? How long would it take 4 men?

16. If 2 cocks will empty a cistern in 3 hours, in how long a time would 1 empty it? In how long a time would 7 cocks empty it?

---

## SECTION XI.

A. 1. BOUGHT 1 half of a yard of cloth for 1 dollar and 1 half; what was that a yard?

2. 1 and 1 half is the half of what number?\*

3. If 1 third of a yard of cloth costs 1 dollar and 3 fourths of a dollar, how much does a yard cost?

4. 2 and 3 fourths is 1 third of what number?

5. If 1 half of a barrel of beer costs 2 dollars and 1 fourth of a dollar, how much will a barrel cost?

6. 2 and 3 fourths is 1 half of what number?

7. If 1 fourth of a box of lemons costs 3 dollars and 2 thirds of a dollar, what will a box cost?

8. 2 and 2 thirds is 1 fourth of what number?

9. 3 and 1 half is 1 fourth of what number?

10. If 1 third of a barrel of pork costs 4 dollars and 1 third of a dollar, what will a barrel cost?

11. 4 and 2 thirds is 1 third of what number?

12. If 1 sixth of a barrel of fish costs 2 dollars and 1 fifth of a dollar, what will a barrel cost?

---

\* See Section VI. article A., and Section IX. article B.

13. 3 and 2 fifths is 1 sixth of what number?
14. If 1 fifth of a barrel of salmon costs 3 dollars and 2 sevenths of a dollar, what is that a barrel?
15. 4 and 3 sevenths is 1 fifth of what number?
16. If a man can travel 4 miles and 3 sevenths of a mile in 1 ninth of a day, how far will he travel in a whole day?
17. 5 and 3 sevenths is 1 ninth of what number?
18. 2 and 4 fifths is 1 seventh of what number?
19. 6 and 3 eighths is 1 eighth of what number?
20. 7 and 5 sixths is 1 third of what number?
21. 8 and 3 sevenths is 1 fourth of what number?
22. 5 and 3 tenths is 1 seventh of what number?
23. 8 and 5 ninths is 1 fifth of what number?
24. 9 and 4 fifths is 1 eighth of what number?
25. 6 and 4 tenths is 1 tenth of what number?
26. 7 and 4 ninths is 1 fifth of what number?
27. 8 and 7 tenths is 1 seventh of what number?

B. 1. If 2 thirds of a barrel of beef cost 3 dollars, what does 1 third of a barrel cost?\*

2. 3 is 2 times what number?

*Ans.* 3 is 2 times the half of 3; but 1 half of 3 is 3 halves, or 1 and 1 half,† therefore 3 is 2 times 1 and 1 half.

3. If 3 fifths of a yard of cloth cost 4 dollars, what will 1 fifth of a yard cost?

4. 5 is 3 times what number?

5. If 3 sevenths of a barrel of pork cost 2 dollars, what will 1 seventh of a barrel cost?

6. 2 is three times what number?

7. If 4 thirds of a bunch of shingles cost 5 dollars, what does 1 third of a bunch cost?

8. 7 is 4 times what number?

9. 2 is 4 times what number?

10. A man bought 4 ninths of a barrel of flour for

\* See Section VI., article B.

† See Section X., article A.

3 dollars; what would be the price of 1 ninth of a barrel at the same rate?

11. 5 is 4 times what number?

12. A man bought 5 eighths of a hundred weight of sugar for six dollars; what would 1 eighth of a hundred weight cost at the same rate?

13. 7 is 5 times what number?

14. 3 is 5 times what number?

15. 8 is 5 times what number?

16. 9 is 4 times what number?

17. 11 is 6 times what number?

18. 13 is 7 times what number?

19. 14 is 8 times what number?

20. 17 is 5 times what number?

21. 18 is 8 times what number?

22. 17 is 9 times what number?

23. 15 is ten times what number?

24. 20 is 9 times what number?

25. 22 is 10 times what number?

26. 24 is 7 times what number?

27. If 2 thirds of a barrel of beef cost 3 dollars, what will 1 third of a barrel cost? What will the whole barrel cost?

28. \*If 5 is 2 thirds of some number, what is 1 third of the same number? 2 and 1 half is 1 third of what number? Then 5 is 2 thirds of what number?

29. If 3 fourths of a barrel of flour cost 5 dollars, what will 1 fourth of a barrel cost? What will the whole barrel cost?

30. If 8 is 3 fourths of some number, what is 1 fourth of the same number? 2 and 2 thirds is 1 fourth of what number? Then 8 is 3 fourths of what number?

31. A man bought 2 sevenths of a barrel of oil for 5 dollars; how much will 1 seventh cost at the same rate? how much would a barrel cost?

32. If 9 is 2 sevenths of some number, what is 1

---

\* See Sec. VI., Art. B., Examples 8 and following.



seventh of the same number? 4 and 1 half is 1 seventh of what number? Then 9 is 2 sevenths of what number?

33. Bought 5 eighths of a chaldron of coal for 7 dollars; what is the price of 1 eighth, at the same rate? What is the price of the whole chaldron?

34. If 12 is 5 eighths of some number, what is 1 eighth of the same number? 2 and 2 fifths is 1 eighth of what number? Then 12 is 5 eighths of what number?

35. If a man can do 7 ninths of a piece of work in 4 days, how long would it take him to do 1 ninth of it? how long would it take him to do the whole?

36. If 3 is 7 ninths of some number, what is 1 ninth of the same number? 3 sevenths is 1 ninth of what number? Then 3 is 7 ninths of what number?

37. If 3 fifths of a chaldron of coal cost 8 dollars, what is the whole chaldron worth?

38. 7 is 3 fifths of what number?

39. A man bought 6 sevenths of a cask of raisins for 5 dollars; what was the whole cask worth?

40. 8 is 6 sevenths of what number?

41. A man had 4 sixths of a week's board for 3 dollars; how much is that for a whole week?

42. 3 is 5 sixths of what number?

43. 9 is 5 eighths of what number?

44. 10 is 7 thirds of what number?

45. 11 is 6 fifths of what number?

46. 12 is 7 fifths of what number?

47. 15 is 2 sevenths of what number?

48. 17 is 3 tenths of what number?

49. A man bought 5 eighths of a cask of wine for 19 dollars, what would the whole cask cost?

50. 19 is 3 eighths of what number?

51. 21 is 4 fifths of what number?

52. Bought 5 ninths of a ton of logwood for 23 dollars; what would a ton cost at that rate?

53. 23 is 7 ninths of what number?

54. 21 is  $\frac{3}{10}$  tenths of what number?  
 55. 29 is  $\frac{4}{7}$  sevenths of what number?  
 56. 31 is  $\frac{5}{8}$  eighths of what number?  
 57. 33 is  $\frac{6}{7}$  sevenths of what number?  
 58. 38 is  $\frac{4}{9}$  ninths of what number?  
 59. A man bought 1 barrel and  $\frac{1}{7}$  seventh of a barrel of wine for 41 dollars; what was that a barrel?

NOTE.—1 barrel and  $\frac{1}{7}$  seventh of a barrel is the same as  $\frac{8}{7}$  sevenths of a barrel. If  $\frac{8}{7}$  sevenths of a barrel cost 41 dollars, what does a barrel cost?

60. 35 is  $\frac{8}{7}$  sevenths of what number?  
 61. A man bought 1 ton and  $\frac{4}{5}$  fifths of a ton (that is,  $\frac{9}{5}$  fifths of a ton) of fustic for 43 dollars, what was that a ton?  
 62. 52 is  $\frac{9}{5}$  fifths of what number?  
 63. Bought 1 ton and  $\frac{2}{7}$  sevenths of a ton of logwood for 48 dollars, what was that a ton?  
 64. 67 is  $\frac{9}{7}$  sevenths of what number?  
 65. 53 is  $\frac{7}{10}$  tenths of what number?  
 66. 58 is  $\frac{9}{8}$  eighths of what number?  
 67. 61 is  $\frac{10}{9}$  ninths of what number?  
 68. Bought 2 barrels and  $\frac{1}{5}$  fifth of a barrel of oil (that is,  $\frac{11}{5}$  fifths of a barrel) for 65 dollars; what was that a barrel?  
 69. 65 is  $\frac{9}{5}$  fifths of what number?  
 70. 71 is  $\frac{8}{11}$  elevenths of what number?

C. 1. A boy gave away 2 apples and  $\frac{1}{2}$  half, which was  $\frac{1}{4}$  fourth of all he had; how many had he?

2. A man gave away 3 dollars, which was  $\frac{2}{5}$  fifths of all the money he had; how much had he?

3. A man sold a cow for 15 dollars, which was  $\frac{4}{5}$  fifths of what she cost him; how much did he lose by the bargain?

4. A man sold a piece of cloth for 37 dollars, which was  $\frac{9}{8}$  eighths of what it cost him; how much did he gain by the bargain?

5. There is a pole  $3$  fifths under water, and  $7$  feet out of the water; how long is the pole?

6. A man sold a piece of cloth for  $47$  dollars, by which bargain he lost  $2$  ninths of what the cloth cost him; how much did it cost him, and how much did he lose?

---

MISCELLANEOUS EXAMPLES.

1. If a staff  $5$  feet long casts a shadow  $4$  feet at  $12$  o'clock, what is the length of a pole that casts a shadow  $67$  feet at the same time?

2. If  $53$  gallons of water, in  $1$  hour run into a cistern containing  $97$  gallons, and  $44$  gallons run out in an hour, in what time will it be filled?

3. A man bought a cask of wine containing  $75$  gallons;  $2$  sevenths of it leaked out, and he sold the remainder for  $1$  dollar a gallon; how much did he sell it for?

4. A cask of wine cost  $67$  dollars; what is  $5$  eighths of it worth?

5. A man bought  $9$  oranges for  $6$  cents and  $2$  sevenths apiece, and sold them for  $67$  cents; what did he gain by the bargain?

6. A man bought  $10$  yards of broadcloth for  $70$  dollars; how must he sell it per yard in order to gain  $14$  dollars?

7. If, when the days are  $12$  hours long, a man performs a journey in  $3$  days; how many hours is he in performing it?

8. If a man performs a journey in  $36$  hours, how many days would he be in performing it when the days are  $9$  hours long?

9. If, when the days are  $11$  hours long, a man can perform a journey in  $5$  days, in how many hours will he perform it? In how many days, when the days are  $9$  hours long?

10. What number added to 2 fifths of 33 will make the number 17?

11. How many yards of cloth that is 1 quarter of a yard wide, will line 10 yards that is 3 quarters wide?

12. 8 yards of cloth that is 1 quarter wide, are equal to how many yards that is 4 quarters wide?

13. How many yards of cloth that is 3 quarters wide, are equal to 7 yards that is 5 quarters wide?

14. How many yards of cloth that is 6 quarters wide, are equal to 37 that is 4 quarters wide?

15. If a piece of cloth, 5 quarters wide, is worth 37 dollars, what is a piece of the same length, 3 quarters wide, worth?

16. If cloth 4 quarters wide is worth 8 dollars a yard, what is 1 yard of the same kind of cloth, that is 5 quarters wide, worth?

---

## SECTION XII.

PARTS of one are called fractions. Fractions may be expressed by figures, as well as whole numbers. It requires two numbers to express a fraction; one to show into how many parts one is divided, and the other to show how many of those parts are used. For example, if we wish to express *one half*, (which means that one is divided into two equal parts, and that one part is used,) we must use the figure 2 to express that one is divided into two equal parts and the figure 1 to show that one part is used. And these must be written in such a manner that we may always know what each of them is intended to express.

One half is usually written thus,  $\frac{1}{2}$ ; one number above a line, and the other below it. The number below the line shows into how many parts one is divided, and the number above the line shows how many parts are used.

One third is written.....	$\frac{1}{3}$
Two thirds.....	$\frac{2}{3}$
One fourth.....	$\frac{1}{4}$
Three fourths.....	$\frac{3}{4}$
Two fifths.....	$\frac{2}{5}$

*Example.*  $\frac{3}{7}$  of an apple signifies that the apple is to be cut into 7 equal parts, and that 3 parts are to be used.

Illustrate by a line, divided into 7 equal parts, and three of the parts taken. In the same way illustrate the meaning of the fractions  $\frac{5}{8}$ ,  $\frac{4}{9}$ ,  $\frac{3}{10}$ .

We may observe, that, when one is divided into 3 parts, the parts are called *thirds*; when one is divided into 4 parts, the parts are called *fourths*, etc.; that is, the fraction takes its name from the number of parts into which one is divided. The number under the line is called the *denominator*, because it gives name to the fraction; and the number above the line is called the *numerator*, because it shows the number of parts used. Thus  $\frac{3}{10}$ , 10 is the *denominator*, and 3 the *numerator*.

N. B.—The pupil must be made familiar with this mode of expressing fractions, and must be able to apply it to any familiar objects; as apples, oranges, etc.;\* or by blackboard, before he is allowed to proceed any farther. Particular care must be taken to make him understand what the denominator signifies, and what the numerator, as explained above. The denominator should always be explained first.

The following examples are a recapitulation of some of the foregoing sections, for the purpose of showing the application of the above method of writing fractions. Having analyzed the question, the pupil may write the required fraction on the blackboard.

---

\* When the numerator is larger than the denominator, the fraction is called an *improper* fraction. See Key.

See Section VIII. A.

- A. 1. In 2 how many times  $\frac{1}{2}$ ?\*
2. In 3 how many times  $\frac{1}{2}$ ?
3. In 2 how many times  $\frac{1}{3}$ ?
4. In 4 how many times  $\frac{1}{3}$ ?
5. In 6 how many times  $\frac{1}{4}$ ?
6. In 7 how many times  $\frac{1}{6}$ ?
7. In 8 how many times  $\frac{1}{5}$ ?
8. In  $2\frac{1}{2}$ † how many times  $\frac{1}{2}$ ?
9. In  $3\frac{1}{4}$  how many times  $\frac{1}{4}$ ?
10. Reduce  $4\frac{1}{5}$  to an improper fraction. ‡
11. Reduce  $3\frac{2}{7}$  to an improper fraction.
12. Reduce  $5\frac{3}{8}$  to an improper fraction.
13. Reduce  $6\frac{2}{9}$  to an improper fraction.
14. Reduce  $8\frac{3}{10}$  to an improper fraction.
15. Reduce  $9\frac{4}{7}$  to an improper fraction.

- B. 1.  $\frac{4}{2}$  are how many times 1?
2.  $\frac{6}{3}$  are how many times 1?
3.  $\frac{7}{1}$  are how many times 1?
4.  $\frac{8}{4}$  are how many times 1?
5.  $\frac{9}{9}$  are how many times 1?
6.  $\frac{16}{7}$  are how many times 1?
7.  $\frac{18}{5}$  are how many times 1?
8.  $\frac{23}{7}$  are how many times 1?
9.  $\frac{26}{8}$  are how many times 1?
10.  $\frac{37}{10}$  are how many times 1?

---

See Section IX.

- A. 1. How much is 3 times  $\frac{1}{2}$ ?
2. How much is 4 times  $\frac{1}{3}$ ?

---

\* When the numerator is larger than the denominator, the fraction is called an *improper* fraction. See Key.

†  $2\frac{1}{2}$  is read 2 and 1 half. It is called a *mixed number*.

‡ That is, to find how many fifths there are in 4 and 1 fifth, first, and how many fifths there are in 4.

3. How much is 3 times  $\frac{2}{5}$ ?
4. How much is 4 times  $\frac{2}{7}$ ?
5. How much is 5 times  $\frac{3}{8}$ ?
6. How much is 6 times  $\frac{4}{5}$ ?
7. How much is 8 times  $\frac{3}{10}$ ?
8. How much is 9 times  $\frac{5}{7}$ ?
9. How much is 10 times  $\frac{5}{9}$ ?
10. How much is 9 times  $\frac{6}{5}$ ?

- B.
1. How much is 3 times  $2\frac{1}{5}$ ?
  2. How much is 4 times  $3\frac{2}{3}$ ?
  3. How much is 5 times  $6\frac{4}{7}$ ?
  4. How much is 6 times  $4\frac{5}{8}$ ?
  5. How much is 7 times  $5\frac{2}{7}$ ?
  6. How much is 8 times  $6\frac{4}{9}$ ?
  7. How much is 4 times  $10\frac{3}{7}$ ?
  8. How much is 9 times  $7\frac{4}{6}$ ?
  9. How much is 8 times  $9\frac{4}{9}$ ?
  10. How much is 10 times  $7\frac{3}{5}$ ?

---

*See Sections V. & X.*

- |                                  |                                  |
|----------------------------------|----------------------------------|
| 1. What is $\frac{1}{2}$ of 6?   | 2. What is $\frac{1}{3}$ of 6?   |
| 3. What is $\frac{1}{4}$ of 8?   | 4. What is $\frac{1}{3}$ of 9?   |
| 5. What is $\frac{2}{3}$ of 9?   | 6. What is $\frac{1}{5}$ of 10?  |
| 7. What is $\frac{2}{7}$ of 14?  | 8. What is $\frac{1}{5}$ of 5?   |
| 9. What is $\frac{3}{5}$ of 5?   | 10. What is $\frac{1}{9}$ of 7?  |
| 11. What is $\frac{2}{9}$ of 7?  | 12. What is $\frac{3}{7}$ of 35? |
| 13. What is $\frac{1}{5}$ of 17? | 14. What is $\frac{3}{7}$ of 26? |
| 15. What is $\frac{5}{8}$ of 27? | 16. What is $\frac{4}{9}$ of 37? |
| 17. What is $\frac{6}{7}$ of 47? | 18. What is $\frac{2}{4}$ of 42? |
| 19. What is $\frac{4}{7}$ of 65? | 20. What is $\frac{4}{6}$ of 75? |

---

*See Sections VI. & XI.*

- A.
1. 2 is  $\frac{1}{2}$  of what number?
  2. 4 is  $\frac{1}{3}$  of what number?

3. 8 is  $\frac{1}{5}$  of what number?
4.  $1\frac{1}{2}$  is  $\frac{1}{2}$  of what number?
5.  $2\frac{3}{5}$  is  $\frac{1}{3}$  of what number?
6.  $4\frac{2}{7}$  is  $\frac{1}{4}$  of what number?
7.  $6\frac{4}{9}$  is  $\frac{1}{7}$  of what number?
8.  $7\frac{6}{7}$  is  $\frac{1}{8}$  of what number?
9.  $8\frac{4}{5}$  is  $\frac{1}{6}$  of what number?
10.  $9\frac{3}{10}$  is  $\frac{1}{10}$  of what number?

- B.
1. 4 is  $\frac{2}{3}$  of what number?
  2. 6 is  $\frac{3}{4}$  of what number?
  3. 8 is  $\frac{4}{5}$  of what number?
  4. 12 is  $\frac{3}{7}$  of what number?
  5. 15 is  $\frac{6}{8}$  of what number?
  6. 18 is  $\frac{6}{7}$  of what number?
  7. 20 is  $\frac{5}{9}$  of what number?
  8. 24 is  $\frac{8}{5}$  of what number?
  9. 28 is  $\frac{7}{3}$  of what number?
  10. 30 is  $\frac{5}{10}$  of what number?
  11. 3 is  $\frac{2}{3}$  of what number?
  12. 4 is  $\frac{3}{5}$  of what number?
  13. 5 is  $\frac{4}{7}$  of what number?
  14. 8 is  $\frac{6}{8}$  of what number?
  15. 9 is  $\frac{5}{7}$  of what number?
  16. 17 is  $\frac{6}{5}$  of what number?
  17. 25 is  $\frac{4}{9}$  of what number?
  18. 38 is  $\frac{3}{5}$  of what number?
  19. 43 is  $\frac{9}{7}$  of what number?
  20. 54 is  $\frac{1}{9}$  of what number?

---

#### MISCELLANEOUS EXAMPLES.

1. A man sold 8 yards of cloth for  $3\frac{4}{5}$  dollars a yard; what did it come to?
2. A man sold a horse for 76 dollars, which was  $\frac{9}{5}$  of what it cost him; how much did it cost him?



3. A man sold  $\frac{3}{5}$  of a gallon of wine for 40 cents; what was that a gallon?

4. If it will take  $1\frac{7}{8}$  yards of cloth to make a coat, how many yards will it take to make 7 coats?

5. If 1 horse consumes  $3\frac{1}{4}$  bushels of oats in 2 days, how much would 2 horses consume in 5 days?

6. If, when the days are  $9\frac{1}{2}$  hours long, a man performs a journey in 10 days, in how many days would he perform it when the days are 12 hours long?

7. A man sold 8 yards of cloth for  $7\frac{2}{3}$  dollars a yard, and received 8 firkins of butter at  $6\frac{2}{3}$  dollars a firkin; how much was then due to him?

8. Two men are 38 miles apart, and are travelling towards each other, one at the rate of 3 miles an hour, the other 2 miles; how much do they approach each other in an hour? How much in 2 hours? In how many hours will they meet? At what distance from each place from which they set out?

---

### SECTION XIII.

A. 1. If you give  $\frac{1}{2}$  of an orange to one boy, and  $\frac{1}{4}$  to another, how much more do you give the first than the second?

2.  $\frac{1}{2}$  of an orange is how many  $\frac{1}{4}$  of an orange?

3. If you give  $\frac{1}{2}$  of an orange to one boy, and  $\frac{1}{4}$  to another, how many  $\frac{1}{4}$  would you give away? How many  $\frac{1}{4}$  would you have left?

4.  $\frac{1}{2}$  and  $\frac{1}{4}$  are how many  $\frac{1}{4}$ ?

5. A man gave to 1 laborer  $\frac{1}{2}$  of a bushel of wheat, and  $\frac{3}{4}$  to another; how many  $\frac{1}{4}$  of a bushel did he give to both? How many bushels?

6.  $\frac{1}{2}$  and  $\frac{3}{4}$  are how many  $\frac{1}{4}$ ? How many times 1?

7. A man gave  $\frac{1}{2}$  of a barrel of flour to 1 man, and  $\frac{3}{6}$  of a barrel to another; to which did he give the most?

8.  $\frac{1}{2}$  is how many  $\frac{1}{4}$ ?

9. A man bought  $\frac{1}{3}$  of a bushel of wheat at one time, and  $\frac{2}{6}$  of a bushel at another; at which time did he buy the most?

10.  $\frac{1}{3}$  is how many  $\frac{1}{6}$ ?

11. A man bought  $\frac{2}{3}$  of a yard of cloth at one time, and  $\frac{4}{6}$  of a yard at another; at which time did he buy the most?

12.  $\frac{2}{3}$  are how many  $\frac{1}{6}$ ?

13. A man wished to give  $\frac{1}{2}$  of a bushel of wheat to one man, and  $\frac{1}{3}$  of a bushel to another; but he could not tell how to divide it. Another man standing by advised him to divide the whole bushel into six equal parts first, and then take  $\frac{1}{2}$  of them for one, and  $\frac{1}{3}$  of them for the other. How many parts did he give to each? How many to both? How many had he left?

14.  $\frac{1}{2}$  is how many  $\frac{1}{6}$ ?  $\frac{1}{3}$  is how many  $\frac{1}{6}$ ?  $\frac{1}{2}$  and  $\frac{1}{3}$  are how many  $\frac{1}{6}$ ?

15. A man paying some money to his laborers, gave each man  $\frac{1}{2}$  of a dollar, and each boy  $\frac{1}{6}$  of a dollar; how much more did he give to a man than to a boy?

16. What is the difference between  $\frac{1}{2}$  and  $\frac{1}{6}$ ?

17. If a man can earn  $\frac{4}{6}$  of a dollar in a day, and a boy  $\frac{1}{2}$  of a dollar, how much does the man earn more than the boy?

18. What is the difference between  $\frac{4}{6}$  and  $\frac{1}{2}$ ?

19. A boy distributing some nuts among his companions, gave  $\frac{1}{3}$  of a quart to one, and  $\frac{1}{2}$  of a quart to another; how much more did he give to one than to the other?

NOTE.—*Change them to sixths.*

20. What is the difference between  $\frac{1}{3}$  and  $\frac{1}{2}$ ?

21. A man having 2 bushels of grain to distribute among his laborers, wished to give  $\frac{1}{2}$  of a bushel to one, and  $\frac{2}{3}$  of a bushel to another, and the rest to a third; but was at a loss to tell how to divide it; at last he concluded to divide each bushel into six equal parts, or sixths, and then to distribute those parts. How many sixths did he give to each?

22.  $\frac{2}{3}$  is how many  $\frac{1}{6}$ ?

23. A man had a horse, and a cow, and a sheep. The horse would eat  $\frac{2}{3}$  of a load of hay in the winter, the cow  $\frac{1}{2}$ , and the sheep  $\frac{1}{6}$ . How many  $\frac{1}{6}$  of a load would each eat? How many  $\frac{1}{6}$  would they all eat? How many loads?

24. A boy having a quart of nuts, wished to divide them, so as to give one companion  $\frac{1}{2}$ , another  $\frac{1}{4}$ , and a third  $\frac{1}{8}$  of them; but in order to make a proper division, he first divided the whole into eight equal parts, and then he was able to divide them as he wished. How many eighths did he give to each? How many eighths had he left for himself?

25.  $\frac{1}{2}$  is how many  $\frac{1}{8}$ ?  $\frac{1}{4}$  is how many  $\frac{1}{8}$ ?  $\frac{1}{2}$  and  $\frac{1}{4}$  and  $\frac{1}{8}$  are how many  $\frac{1}{8}$ ?

26. A man gave  $\frac{3}{4}$  of a barrel of flour to one man, and  $\frac{5}{8}$  of a barrel to another; to which did he give the most? How much?

27. Which is the largest,  $\frac{3}{4}$  or  $\frac{5}{8}$ ? How much the largest?

28. A boy having a pound of almonds, said he intended giving  $\frac{1}{3}$  of them to his sister, and  $\frac{1}{4}$  to his brother, and the rest to his mamma. His mamma, smiling, said she did not think he could divide them so. O yes I can, said he, I will first divide them into twelve equal parts, and then I can divide them well enough? Pray how many twelfths did he give to each?

29.  $\frac{1}{3}$  is how many  $\frac{1}{12}$ ?  $\frac{1}{4}$  is how many  $\frac{1}{12}$ ?  $\frac{1}{3}$  and  $\frac{1}{4}$  are how many  $\frac{1}{12}$ ?

30. Mr. Goodman having a pound of raisins, said he would give Sarah  $\frac{1}{3}$ , and Mary  $\frac{1}{4}$ , and James  $\frac{1}{6}$  of them, and he told Charles he should have the rest, if he could tell how to divide them. Well, said Charles, I would first divide the whole into twelve equal parts, and then I could take  $\frac{1}{2}$  and  $\frac{1}{4}$  and  $\frac{1}{6}$  of them. How many twelfths would each have?

31.  $\frac{1}{3}$  and  $\frac{1}{4}$  and  $\frac{1}{6}$  are how many  $\frac{1}{12}$ ?

32. George bought a pine apple, and said he would

give  $\frac{1}{4}$  of it to his papa, and  $\frac{2}{5}$  to his mamma, and  $\frac{3}{10}$  to his brother James, if he could divide it. James took it and cut it into twenty equal pieces, and then distributed them as George had desired. How many twentieths did he give to each?

33.  $\frac{1}{4}$  is how many  $\frac{1}{20}$ ?  $\frac{1}{5}$  is how many  $\frac{1}{20}$ ?  $\frac{2}{3}$  is how many  $\frac{1}{20}$ ?  $\frac{1}{10}$  is how many  $\frac{1}{20}$ ?

34.  $\frac{1}{2}$  is how many  $\frac{1}{10}$ ?

35.  $\frac{1}{2}$  is how many  $\frac{1}{14}$ ?

36.  $\frac{1}{3}$  is how many  $\frac{1}{9}$ ?

37.  $\frac{1}{3}$  is how many  $\frac{1}{15}$ ?

38.  $\frac{2}{3}$  are how many  $\frac{1}{9}$ ?

39.  $\frac{2}{3}$  are how many  $\frac{1}{21}$ ?

40.  $\frac{1}{5}$  is how many  $\frac{1}{10}$ ?

41.  $\frac{3}{5}$  are how many  $\frac{1}{15}$ ?

42.  $\frac{5}{6}$  are how many  $\frac{1}{18}$ ?

43.  $\frac{4}{7}$  are how many  $\frac{1}{21}$ ?

44.  $\frac{6}{7}$  are how many  $\frac{1}{35}$ ?

45.  $\frac{3}{8}$  are how many  $\frac{1}{8}$ ?

46.  $\frac{2}{9}$  are how many  $\frac{1}{6}$ ?

47.  $\frac{3}{10}$  are how many  $\frac{1}{20}$ ?

48. Reduce  $\frac{1}{2}$  to sixths and  $\frac{1}{3}$  to sixths.

49.  $\frac{3}{6}$  and  $\frac{2}{6}$  are how many  $\frac{1}{6}$ ?

50. Reduce  $\frac{1}{2}$  and  $\frac{1}{4}$  to eighths.

51.  $\frac{1}{2}$  and  $\frac{1}{4}$  are how many  $\frac{1}{8}$ ?

52.  $\frac{1}{2}$  and  $\frac{1}{4}$  are how many  $\frac{1}{4}$ ?

53.  $\frac{2}{3}$  and  $\frac{1}{6}$  are how many  $\frac{1}{6}$ ?

54.  $\frac{1}{4}$  and  $\frac{5}{8}$  are how many  $\frac{1}{8}$ ?

55.  $\frac{1}{3}$  and  $\frac{2}{9}$  are how many  $\frac{1}{9}$ ?

56.  $\frac{1}{2}$  and  $\frac{2}{5}$  are how many  $\frac{1}{10}$ ?

57.  $\frac{1}{2}$  and  $\frac{1}{4}$  and  $\frac{1}{8}$  are how many  $\frac{1}{8}$ ?

58.  $\frac{1}{2}$  and  $\frac{3}{5}$  and  $\frac{1}{10}$  are how many  $\frac{1}{10}$ ?

59.  $\frac{2}{3}$  and  $\frac{1}{4}$  are how many  $\frac{1}{12}$ ?

60.  $\frac{2}{3}$  and  $\frac{1}{4}$  and  $\frac{1}{6}$  are how many  $\frac{1}{12}$ ?

61.  $\frac{3}{5}$  and  $\frac{3}{10}$  and  $\frac{1}{4}$  are how many  $\frac{1}{20}$ ?

62.  $\frac{1}{2}$  and  $\frac{1}{3}$  and  $\frac{3}{4}$  and  $\frac{1}{6}$  and  $\frac{1}{12}$  are how many  $\frac{1}{14}$ ?

63.  $\frac{1}{2}$  and  $\frac{3}{7}$  are how many  $\frac{1}{14}$ ?

64.  $\frac{2}{3}$  and  $\frac{1}{5}$  are how many  $\frac{1}{15}$ ?

65.  $\frac{2}{3}$  and  $\frac{3}{5}$  are how many  $\frac{1}{15}$ ?
66.  $\frac{2}{3}$  less  $\frac{1}{6}$  are how many  $\frac{1}{6}$ ?
67.  $\frac{2}{3}$  and  $\frac{3}{4}$ , less  $\frac{5}{12}$ , are how many  $\frac{1}{12}$ ?
68.  $\frac{5}{6}$  less  $\frac{2}{9}$  are how many  $\frac{1}{18}$ ?
69.  $\frac{5}{6}$  less  $\frac{3}{8}$  are how many  $\frac{1}{24}$ ?
70.  $\frac{4}{5}$  less  $\frac{2}{7}$  are how many  $\frac{1}{35}$ ?
71.  $\frac{1}{2}$ , and  $\frac{3}{4}$ , and  $\frac{1}{6}$ , and  $\frac{5}{12}$ , less  $\frac{5}{8}$ , are how many  $\frac{1}{24}$ ?
72.  $\frac{1}{4}$ , and  $\frac{1}{2}$ , and  $\frac{2}{5}$ , and  $\frac{1}{10}$ , and  $\frac{1}{20}$ , less  $\frac{7}{8}$ , are how many  $\frac{1}{40}$ ?
73.  $\frac{1}{7}$  and  $\frac{3}{6}$  are how many  $\frac{1}{42}$ ?
74.  $\frac{3}{8}$  and  $\frac{5}{7}$  are how many  $\frac{1}{56}$ ?
75.  $\frac{4}{7}$  and  $\frac{2}{9}$  are how many  $\frac{1}{63}$ ?

When the denominators in two or more fractions are the same, the fractions are said to have a common denominator. Thus  $\frac{4}{8}$  and  $\frac{3}{8}$  have a common denominator. We have seen that, when two or more fractions have a common denominator, they may be added and subtracted as well as whole numbers. We add or subtract the numerators, and write their sum or difference over the common denominator. The first part of the process in the above examples was to reduce them to a common denominator.

76. Reduce  $\frac{2}{3}$  and  $\frac{3}{4}$  to a common denominator.

NOTE.—They may be reduced to twelfths.

If it cannot be immediately seen what number must be the common denominator, it may be found by multiplying all the denominators together; for that will always produce a number divisible by all the denominators.

77. Reduce  $\frac{2}{3}$  and  $\frac{3}{5}$  to a common denominator.

78. Reduce  $\frac{2}{3}$  and  $\frac{3}{4}$  and  $\frac{5}{6}$  to a common denominator.

79. Reduce  $\frac{1}{3}$  and  $\frac{3}{7}$  to a common denominator.

80. Reduce  $\frac{3}{7}$  and  $\frac{2}{5}$  to a common denominator.

81. Reduce  $\frac{1}{2}$  and  $\frac{2}{3}$  and  $\frac{3}{4}$  to a common denominator.
82. Add together  $\frac{2}{3}$  and  $\frac{2}{5}$ .
83. Add together  $\frac{3}{7}$  and  $\frac{5}{14}$ .
84. Add together  $\frac{3}{9}$  and  $\frac{5}{18}$ .
85. Add together  $\frac{1}{2}$  and  $\frac{3}{5}$  and  $\frac{3}{10}$ .
86. Subtract  $\frac{1}{3}$  from  $\frac{1}{2}$ .
87. Subtract  $\frac{3}{10}$  from  $\frac{2}{5}$ .
88. Subtract  $\frac{2}{7}$  from  $\frac{2}{3}$ .
89. Subtract  $\frac{2}{9}$  from  $\frac{5}{6}$ .

B. 1. Mr. F. said he would give  $\frac{1}{2}$  of a pine apple to Fanny, and  $\frac{2}{5}$  to George, and the rest to the one that could tell how to divide it, and how much there would be left. But neither of them could tell; so he kept it himself. Could you have told if you had been there? How would you divide it? How much would be left?

2. A man sold  $1\frac{1}{2}$  bushel of wheat to one man,  $4\frac{3}{4}$  bushels to another; how many bushels did he sell to both?

3. A man bought  $6\frac{1}{2}$  bushels of wheat at one time, and  $2\frac{1}{3}$  at another; how much did he buy in the whole?

4. A man bought  $7\frac{2}{3}$  yards of one kind of cloth, and  $6\frac{3}{4}$  yards of another kind; how many yards in the whole?

5. A man bought  $\frac{3}{5}$  of a barrel of flour at one time,  $2\frac{1}{2}$  barrels at another, and  $6\frac{3}{4}$  at another; how much did he buy in the whole?

6. A man bought one sheep for  $4\frac{2}{3}$  dollars, and another for  $5\frac{3}{7}$  dollars; how much did he give for both?

7. There is a pole standing, so that  $\frac{1}{3}$  of it is in the mud, and  $\frac{2}{5}$  of it in the water, and the rest out of the water; how much of it is out of the water?

8. A man having undertaken to do a piece of work, did  $\frac{1}{2}$  of it the first day,  $\frac{1}{3}$  of it the second day, and  $\frac{1}{6}$  of it the third day; how much of it did he do in three days?

9. A man having a piece of work to do, hired two men and a boy to do it. The first man could do  $\frac{1}{3}$  of the work in a day, and the other  $\frac{1}{4}$  of it, and the boy  $\frac{1}{6}$  of it; how much of it would they all do in a day?

NOTE.—By dividing a line into halves, and then into fourths, it will be seen that  $\frac{2}{4}$  is the same as  $\frac{1}{2}$ ; a line divided into halves and then into sixths, will show that  $\frac{3}{6}$  is the same as  $\frac{1}{2}$ , and  $\frac{4}{6}$  as  $\frac{2}{3}$ ;  $\frac{2}{4}$ ,  $\frac{3}{6}$ , can therefore be reduced to  $\frac{1}{2}$ , and  $\frac{4}{6}$  to  $\frac{2}{3}$ . This is called reducing fractions to their lowest terms. It is done by dividing the greatest number that will divide it without a remainder.

1. Reduce  $\frac{6}{8}$  to its lowest terms.\* *Ans.*  $\frac{3}{4}$ .
2. Reduce  $\frac{5}{10}$  to its lowest terms.
3. Reduce  $\frac{6}{9}$  to its lowest terms.
4. Reduce  $\frac{4}{12}$  to its lowest terms.
5. Reduce  $\frac{10}{14}$  to its lowest terms.
6. Reduce  $\frac{5}{15}$  to its lowest terms.
7. Reduce  $\frac{5}{6}$  to its lowest terms.
8. Reduce  $\frac{18}{24}$  to its lowest terms.
9. Reduce  $\frac{4}{35}$  to its lowest terms.
10. Reduce  $\frac{8}{40}$  to its lowest terms.
11. Reduce  $\frac{5}{30}$  to its lowest terms.
12. Reduce  $\frac{1}{35}$  to its lowest terms.
13. Reduce  $\frac{3}{56}$  to its lowest terms.
14. Reduce  $\frac{7}{22}$  to its lowest terms.

NOTE.—It will be seen by the above section that if both the numerator and denominator be multiplied by the same number, the value of the fraction will not be altered; or if they can both be divided by the same number without a remainder, the fraction will not be altered.

---

\* If this article should be found too difficult for the pupil, he may omit it till after the next section.

## SECTION XIV.

A. 1. A BOY having  $\frac{1}{2}$  of an orange gave away  $\frac{1}{2}$  of that, what part of the whole orange did he give away?

2. What is  $\frac{1}{2}$  of  $\frac{1}{2}$ ?

3. If you cut an apple into three pieces, and then cut each of those pieces into two pieces, how many pieces will the whole apple be cut into? What part of the whole apple will one of the pieces be?

4. What is  $\frac{1}{2}$  of  $\frac{1}{3}$ ?

5. A boy had  $\frac{1}{2}$  of a pine apple, and cut that half into three pieces, in order to give away  $\frac{1}{3}$  of it. What part of the whole apple did he give away?

6. What is  $\frac{1}{3}$  of  $\frac{1}{2}$ ?

7. If an orange be cut into 4 parts, and then each of the parts be cut in two, how many pieces will the whole be cut into?

8. What is  $\frac{1}{2}$  of  $\frac{1}{4}$ ?

9. A man having  $\frac{1}{2}$  of a barrel of flour, sold  $\frac{1}{4}$  of that; how much did he sell?

10. What is  $\frac{1}{4}$  of  $\frac{1}{2}$ ?

11. If an orange be cut into 4 equal parts, and each of those parts be cut into 3 equal parts; how many parts will the whole orange be cut into?

12. What is  $\frac{1}{3}$  of  $\frac{1}{4}$ ?

13. A boy having  $\frac{1}{3}$  of a quart of chestnuts, gave away  $\frac{1}{4}$  of what he had; what part of the whole quart did he give away?

14. What is  $\frac{1}{4}$  of  $\frac{1}{3}$ ?

15. What is  $\frac{1}{2}$  of  $\frac{1}{5}$ ?

16. A man owning  $\frac{1}{5}$  of a ship, sold  $\frac{1}{3}$  of his share; what part of the ship did he sell, and what part did he then own?

17. What is  $\frac{1}{3}$  of  $\frac{1}{5}$ ?

18. What is  $\frac{1}{6}$  of  $\frac{1}{4}$ ?

19. What is  $\frac{1}{4}$  of  $\frac{1}{5}$ ?

20. What is  $\frac{1}{2}$  of  $\frac{1}{6}$ ?

21. What is  $\frac{1}{3}$  of  $\frac{1}{7}$ ?



22. What is  $\frac{1}{5}$  of  $\frac{1}{8}$ ?

23. What is  $\frac{1}{4}$  of  $\frac{1}{7}$ ?

24. What is  $\frac{1}{3}$  of  $\frac{1}{8}$ ?

25. What is  $\frac{1}{6}$  of  $\frac{1}{5}$ ?

26. What is  $\frac{1}{5}$  of  $\frac{1}{7}$ ?

27. What is  $\frac{1}{4}$  of  $\frac{1}{6}$ ?

28. What is  $\frac{1}{7}$  of  $\frac{1}{9}$ ?

29. A boy having  $\frac{2}{3}$  of an orange, (that is, 2 pieces,) gave his sister  $\frac{1}{2}$  of what he had; how many thirds did he give her?

30. What is  $\frac{1}{2}$  of  $\frac{2}{3}$ ?

31. A boy having  $\frac{3}{4}$  of a pine apple, said he would give one half of what he had to his sister, if she could tell him how to divide it. His sister says, you have  $\frac{3}{4}$ , or three pieces, if you cut them all in two, you can give me  $\frac{1}{2}$  of them. But  $\frac{1}{2}$  of  $\frac{1}{4}$  is  $\frac{1}{8}$ , therefore I shall have  $\frac{3}{8}$  of the whole pine apple.

32. What is  $\frac{1}{2}$  of  $\frac{3}{4}$ ?

33. A man owning  $\frac{3}{4}$  of a share in the Planters' Bank, sold  $\frac{1}{3}$  of his part; what part of a share did he sell?

34. What is  $\frac{1}{3}$  of  $\frac{3}{4}$ ?

35. A man owning  $\frac{4}{5}$  of a ship, sold  $\frac{1}{4}$  of his share; what part of the whole ship did he sell? What part had he left?

36. What is  $\frac{1}{4}$  of  $\frac{4}{5}$ ?

37. What is  $\frac{1}{2}$  of  $\frac{4}{5}$ ?

38. What is  $\frac{1}{3}$  of  $\frac{6}{7}$ ?

39. What is  $\frac{1}{3}$  of  $\frac{9}{7}$ ?

40. What is  $\frac{1}{4}$  of  $\frac{12}{7}$ ?

41. What is  $\frac{1}{2}$  of  $\frac{3}{7}$ ?

42. A man owning  $\frac{5}{6}$  of a share in the Planters' Bank, sold  $\frac{1}{3}$  of his part; what part of a whole share did he sell?

43. What is  $\frac{1}{3}$  of  $\frac{5}{6}$ ?

44. What is  $\frac{1}{4}$  of  $\frac{2}{7}$ ?

45. A boy having  $\frac{4}{5}$  of a watermelon, wished to divide his part equally between his sister, his brother,

and himself, but was at a loss to know how to do it; but his sister advised him to cut each of the fifths into 3 equal parts. How many pieces did each have? and what part of the whole melon was each piece?

46. What is  $\frac{1}{3}$  of  $\frac{4}{5}$ ?
47. What is  $\frac{1}{5}$  of  $\frac{3}{4}$ ?
48. What is  $\frac{1}{8}$  of  $\frac{4}{5}$ ?
49. What is  $\frac{1}{9}$  of  $\frac{5}{7}$ ?
50. What is  $\frac{1}{10}$  of  $\frac{4}{9}$ ?
51. What is  $\frac{1}{3}$  of  $\frac{1}{4}$ ?
52. What is  $\frac{2}{3}$  of  $\frac{1}{4}$ ?
53. What is  $\frac{1}{4}$  of  $\frac{2}{3}$ ?
54. What is  $\frac{3}{4}$  of  $\frac{2}{8}$ ?
55. What is  $\frac{1}{3}$  of  $\frac{2}{5}$ ?
56. What is  $\frac{2}{3}$  of  $\frac{2}{5}$ ?
57. What is  $\frac{1}{3}$  of  $\frac{5}{6}$ ?
58. What is  $\frac{2}{3}$  of  $\frac{5}{6}$ ?
59. What is  $\frac{5}{6}$  of  $\frac{2}{3}$ ?
60. What is  $\frac{2}{7}$  of  $\frac{4}{5}$ ?
61. What is  $\frac{3}{8}$  of  $\frac{3}{8}$ ?
62. What is  $\frac{1}{9}$  of  $\frac{3}{7}$ ?
63. What is  $\frac{4}{9}$  of  $\frac{3}{7}$ ?
64. What is  $\frac{1}{10}$  of  $\frac{3}{8}$ ?
65. What is  $\frac{7}{10}$  of  $\frac{3}{8}$ ?
66. What is  $\frac{5}{8}$  of  $\frac{3}{10}$ ?
67. What is  $\frac{7}{5}$  of  $\frac{2}{9}$ ?
68. What is  $\frac{5}{9}$  of  $\frac{8}{7}$ ?
69. If a yard of cloth cost  $2\frac{1}{2}$  dollars, what will  $\frac{1}{2}$  of a yard cost?
70. What is  $\frac{1}{2}$  of  $2\frac{1}{2}$ ?
71. A boy had  $2\frac{1}{2}$  oranges, and wished to give  $\frac{1}{3}$  of them to his sister, and  $\frac{1}{2}$  to his brother, but he did not know how to divide them equally. His brother told him to cut the whole into halves, and then cut each of the halves into 3 pieces. What part of a whole orange did each have?
72. What is  $\frac{1}{3}$  of  $2\frac{1}{2}$ ?

73. A man bought 4 bushels of corn for  $3\frac{2}{3}$  dollars; what part of a dollar did 1 bushel cost?

*Change the  $3\frac{2}{3}$  to thirds, and then find  $\frac{1}{4}$  of  $\frac{1}{3}$  as above.*

74. What is  $\frac{1}{4}$  of  $5\frac{2}{3}$ ?

75. If 5 bushels of wheat cost  $7\frac{3}{4}$  dollars, what is that a bushel?

76. What is  $\frac{1}{5}$  of  $7\frac{3}{4}$ ?

77. A man bought 6 gallons of alcohol for  $8\frac{2}{5}$  dollars; what was that a gallon?

78. What is  $\frac{1}{6}$  of  $8\frac{2}{5}$ ?

79. A man bought 7 gallons of wine for  $8\frac{4}{7}$  dollars; how much was that a gallon?

80. What is  $\frac{1}{7}$  of  $8\frac{4}{7}$ ?

81. A man bought 10 pieces of nankin for  $6\frac{3}{8}$  dollars; how much was it a piece?

82. What is  $\frac{1}{10}$  of  $6\frac{3}{8}$ ?

83. If 9 bushels of rye cost  $7\frac{2}{5}$  dollars, what is that a bushel?

84. What is  $\frac{1}{9}$  of  $7\frac{2}{5}$ ?

85. What is  $\frac{1}{8}$  of  $5\frac{3}{7}$ ?

86. What is  $\frac{1}{3}$  of  $8\frac{4}{9}$ ?

87. What is  $\frac{1}{4}$  of  $6\frac{3}{10}$ ?

88. What is  $\frac{1}{5}$  of  $9\frac{4}{7}$ ?

89. A man bought 7 yards of cloth for  $18\frac{3}{5}$  dollars; what was that a yard? What would 3 yards cost at that rate?

90. What is  $\frac{1}{7}$  of  $18\frac{3}{5}$ ? What is  $\frac{3}{7}$  of  $18\frac{3}{5}$ ?

91. A man bought 5 barrels of cider for  $27\frac{3}{8}$  dollars; what was it a barrel? What would 7 barrels cost at that rate?

92. What is  $\frac{1}{5}$  of  $27\frac{3}{8}$ ? What is  $\frac{7}{5}$  of  $27\frac{3}{8}$ ?

93. If 6 barrels of flour cost  $38\frac{4}{5}$  dollars, what would 10 barrels cost at that rate?

94. What is  $\frac{1}{6}$  of  $38\frac{4}{5}$ ?

B. 1. A man bought a piece of cloth for  $42\frac{3}{7}$  dollars,

and was obliged to sell it for  $\frac{4}{5}$  of what it cost him; how much did he lose?

2. A man bought a quantity of flour for  $53\frac{2}{7}$  dollars, and sold it for  $\frac{9}{8}$  of what it cost him; how much did he gain?

3. If 7 men can do a piece of work in  $4\frac{2}{5}$  days, how long will it take 1 man to do it? How long will it take 3 men to do it?

4. If 4 men can do a piece of work in  $9\frac{3}{7}$  days, how long would it take to do it if 7 men were employed?

5. There is a pole standing so that  $\frac{3}{7}$  of it is in the water, and  $\frac{2}{3}$  as much in the mud; how much is in the mud?

6. If a man can travel  $13\frac{5}{9}$  miles in 3 hours, how many miles can he travel in 8 hours?

7. If 5 horses will eat  $26\frac{7}{8}$  loads of hay in a year, what will 8 horses eat in the same time?

8. If 4 cocks will empty a cistern in  $6\frac{5}{8}$  hours, how long will it take 7 cocks of the same size to empty it?

---

## SECTION XV.

A. 1. A BOY having 2 oranges wished to give  $\frac{1}{3}$  of an orange apiece to his playmates; how many could he give them to? If he had given  $\frac{2}{3}$  of an orange apiece, how many could he have given them to?

2. How many times  $\frac{1}{3}$  are there in 2? How many times  $\frac{2}{3}$  are there in 2?

3. A man having 3 bushels of corn, distributed it among some poor persons, giving them  $\frac{3}{4}$  of a bushel each; to how many did he give it?

NOTE.—*First find how many he would have given it to, if he had given  $\frac{1}{4}$  of a bushel to each.*

4. In 3 are how many times  $\frac{1}{4}$ ? How many times  $\frac{3}{4}$ ?

5. If  $\frac{2}{5}$  of a barrel of flour will last a family one

month, how long will 4 barrels last the same family? How long will 6 barrels last? How long will 10 barrels last?

6. How many times is  $\frac{2}{5}$  contained in 4? How many times in 6? How many times in 10?

7. If  $\frac{3}{4}$  of a bushel of wheat will last a family one week, how many weeks will  $6\frac{3}{4}$  bushels last the same family?

8. How many times is  $\frac{3}{4}$  contained in  $6\frac{3}{4}$ ?

9. There is a cistern having a cock which will fill it in  $\frac{2}{5}$  of an hour; how many times would the cock fill the cistern in  $3\frac{2}{5}$  hours?

10. How many times is  $\frac{2}{5}$  contained in  $3\frac{2}{5}$ ?

11. How much cloth at  $1\frac{1}{2}$  dollars (that is  $\frac{3}{2}$  dollars) a yard, can be bought for 4 dollars?

12. How many times is  $1\frac{1}{2}$  or  $\frac{3}{2}$  contained in 4?

13. A man distributed  $8\frac{1}{2}$  bushels of wheat among some poor persons, giving  $1\frac{1}{2}$  bushels to each; how many did he give it to?

14. How many times is  $1\frac{1}{2}$  contained in  $8\frac{1}{2}$ ?

15. If a soldier is allowed  $1\frac{1}{3}$  pound (that is  $\frac{4}{3}$  of a pound) of meat in a day, to how many soldiers would  $6\frac{2}{3}$  pounds be allowed?

16. How many times is  $1\frac{1}{3}$  contained in  $6\frac{2}{3}$ ?

17. If  $1\frac{2}{3}$  tons of hay will keep a horse through the winter, how many horses will 10 tons keep?

18. How many times is  $1\frac{2}{3}$  contained in 10?

19. At  $2\frac{1}{3}$  dollars a box, how many boxes of raisins can be bought for 10 dollars?

20. How many times is  $2\frac{1}{3}$  contained in 10?

21. At  $1\frac{2}{5}$  dollars a pound, how many pounds of indigo can be bought for  $9\frac{2}{5}$  dollars?

22. How many times is  $1\frac{2}{5}$  contained in  $9\frac{2}{5}$ ?

23. At  $1\frac{4}{7}$  dollar a barrel, how many barrels of raisins can be bought for  $9\frac{2}{7}$  dollars?

24. How many times is  $1\frac{4}{7}$  contained in  $9\frac{2}{7}$ ?

25. At  $\frac{7}{8}$  of a dollar apiece, how many pieces of nankin can be bought for  $8\frac{3}{8}$  dollars?

26. How many times is  $\frac{7}{8}$  contained in  $8\frac{3}{8}$ ?
27. At  $\frac{5}{9}$  of a dollar a pound, how many pounds of tea can be bought for  $7\frac{2}{9}$  dollars?
28. How many times is  $\frac{5}{9}$  contained in  $7\frac{2}{9}$ ?
29. How many times is  $3\frac{1}{2}$  contained in  $7\frac{3}{4}$ ?
30. How many times is  $5\frac{1}{2}$  contained in 17?
31. How many times is  $4\frac{1}{5}$  contained in  $9\frac{3}{5}$ ?
32. How many times is  $3\frac{3}{7}$  contained in  $12\frac{4}{7}$ ?

B. 1. At  $\frac{1}{10}$  of a dollar a pound, how many pounds of meat can be bought for  $\frac{1}{2}$  of a dollar?

NOTE.—*Change  $\frac{1}{2}$  to tenths.*

2. How many times is  $\frac{1}{10}$  contained in  $\frac{1}{2}$ ?
3. A man having  $\frac{3}{4}$  of a barrel of flour, distributed it among some poor persons, giving them  $\frac{1}{6}$  of a barrel apiece; how many did he give it to?

NOTE.—*Change both fractions to twelfths; that is, reduce them to a common denominator.*

4. How many times is  $\frac{1}{6}$  contained in  $\frac{3}{4}$ ?
5. If a pound of almonds cost  $\frac{1}{7}$  of a dollar, how many pounds can be bought for  $\frac{2}{3}$  of a dollar?

NOTE.—*Reduce the fractions to a common denominator.*

6. How many times is  $\frac{1}{7}$  contained in  $\frac{2}{3}$ ?
7. If a piece of nankin cost  $\frac{2}{3}$  of a dollar, how many pieces can be bought for  $4\frac{3}{4}$  dollars? that is,  $4\frac{9}{4}$  dollars?
8. How many times is  $\frac{2}{3}$  contained in  $4\frac{3}{4}$ ?
9. If a bushel of barley cost  $\frac{2}{5}$  of a dollar, how many bushels can be bought for  $\frac{7}{8}$  of a dollar? How many for  $1\frac{5}{8}$  of a dollar.
10. How many times is  $\frac{2}{5}$  contained in  $\frac{7}{8}$ ? How many times in  $1\frac{5}{8}$ ?
11. How many times is  $\frac{3}{7}$  contained in  $\frac{2}{3}$ ?
12. How many times is  $\frac{2}{9}$  contained in  $\frac{5}{6}$ ?

## TABLES OF COINS, WEIGHTS, AND MEASURES.

Table I.—FEDERAL MONEY.

Federal Money is the currency of the Confederate States, and of the United States.

10 mills ( <i>m.</i> )	make 1 cent,	marked <i>ct.</i>
10 cents	“ 1 dime,	“ <i>d.</i>
10 dimes	“ 1 dollar,	“ <i>doll.</i> or <i>\$.</i>
10 dollars	“ 1 Eagle,	“ <i>E.</i>

Table II.—STERLING MONEY.

Sterling Money is the currency of England.

4 farthings ( <i>qr.</i> or <i>far.</i> )	make 1 penny,	marked <i>d</i>
12 pence	“ 1 shilling,	“ <i>s.</i>
20 shillings	“ 1 pound, or a sovereign,	“ <i>£.</i>
21 shillings	“ 1 guinea.	

Table III.—TROY WEIGHT.

Used in weighing Gold, Silver, and some Liquids.

24 grains ( <i>gr.</i> )	make 1 pennyweight,	marked <i>dwt.</i>
20 pennyweights	“ 1 ounce,	“ <i>oz.</i>
12 ounces	“ 1 pound.	“ <i>lb.</i>

Table IV.—AVOIRDUPOIS WEIGHT.

Used in weighing Groceries, Hay, etc., and all the Metals, except Gold and Silver. It is now the custom to allow 100 lbs. for a hundred weight, instead of 112 as formerly.

16 drams ( <i>dr.</i> )	make 1 ounce,	marked <i>oz.</i>
16 ounces	“ 1 pound,	“ <i>lb.</i>
25 pounds	“ 1 quarter,	“ <i>qr.</i>
4 quarters	“ 1 hundred weight,	“ <i>cwt.</i>
20 hundred weight	“ 1 ton.	“ <i>T.</i>

Table V.—CLOTH MEASURE.

Used in measuring Woollens and other Cloths.

2½ inches ( <i>in.</i> )	make 1 nail,	marked <i>na.</i>
4 nails, or 9 in.	“ 1 quarter of a yard,	“ <i>qr.</i>
4 quarters	“ 1 yard,	“ <i>yd.</i>
3 quarters	“ 1 Flemish ell,	“ <i>Fl. e.</i>
5 quarters	“ 1 English ell,	“ <i>E. e.</i>
6 quarters	“ 1 French ell.	“ <i>F. e.</i>

## Table VI.—WINE MEASURE.

Used in measuring Wines, etc.

4 gills ( <i>gi.</i> )	make 1 pint,	marked <i>pt.</i>
2 pints	“ 1 quart,	“ <i>qt.</i>
4 quarts	“ 1 gallon,	“ <i>gal.</i>
31½ gallons	“ 1 barrel,	“ <i>bar. or bbl.</i>
42 gallons	“ 1 tierce,	“ <i>tier.</i>
63 gallons, or 2 barrels	“ 1 hogshead,	“ <i>hhd.</i>
2 hogsheads	“ 1 pipe, or butt,	“ <i>pi.</i>
2 pipes	“ 1 tun.	“ <i>tun.</i>

## Table VII.—DRY MEASURE.

Used in measuring Grains, Salt, Oysters, etc.

2 pints	make 1 quart,	marked <i>qt.</i>
8 quarts	“ 1 peck,	“ <i>pk.</i>
4 pecks	“ 1 bushel.	“ <i>bu.</i>

## Table VIII.—MEASURE OF TIME.

60 seconds ( <i>sec.</i> )	make 1 minute,	marked <i>min.</i>
60 minutes	“ 1 hour,	“ <i>hr.</i>
24 hours	“ 1 day,	“ <i>dy.</i>
7 days	“ 1 week,	“ <i>wk.</i>
4 weeks	“ 1 month,	“ <i>mo.</i>
13 months, 1 day and 6 hours, or 12 calendar months,	} “ 1 year.	“ <i>yr.</i>

For convenience of reckoning, it is usual in calendars to call the year 365 days for 3 successive years, and every fourth year 366, (for in 4 years, the six hours overplus amount to a day,) which is called bissextile, or leap year. This day is added to February.

The common year is divided into twelve months, which are sometimes called *calendar* months, because they are the months used in calendars.

The names of the months, and the number of days in each, are as follows :

	Names.	Number of days.
Spring. Winter.	{ 1. January	31
	{ 2. February	28, in leap year 29.
	{ 3. March	31
	{ 4. April	30
	{ 5. May	31



	Names.	Number of days.
Summer.	6. June	30
	7. July	31
	8. August	31
Autumn.	9. September	30
	10. October	31
	11. November	30
Winter.	12. December	31

## MISCELLANEOUS EXAMPLES.

1. In 2 pounds how many ounces?
2. In 8 yards how many quarters?
3. In 3 quarters of a yard, how many nails?
4.  $\frac{3}{10}$  of a dollar is how many cents?
5. How many farthings is  $\frac{3}{5}$  of a penny?
6. How many pence is  $\frac{5}{6}$  of a shilling?
7.  $\frac{3}{5}$  of a yard is how many quarters and nails?
8. In  $\text{£}\frac{2}{7}$  how many shillings?
9. How much is  $\frac{4}{9}$  of a shilling?
10. How much is  $\frac{4}{5}$  of a bushel of wheat?
11. How much would  $\frac{3}{8}$  of a barrel of wine cost, at one dollar a gallon?
12. How much would  $\frac{1}{8}$  cwt. of sugar cost, at 8 cents a pound?
13. How much is  $\frac{5}{8}$  of a day?
14. How much is  $\frac{3}{5}$  of a day?
15. How much is  $\frac{3}{5}$  of a week?
16. How much is  $\frac{2}{7}$  of an hour?
17. How much would  $\frac{3}{9}$  of a hogshead of wine cost, at 2 dollars a gallon?
18. If a man spends 28 dollars in a month, what is that a week? How much a day?
19. If a man spends 16 dollars a week, what is that a day?
20. If a man buys 4 bushels of grain for 5 dollars, how much is that a bushel?

21. If wine is 2 dollars a gallon, how much is that a pint?

22. If you give 5 cents a gill for wine, what is that a pint? What is it a quart? What is it a gallon?

23. If wine is worth 20 cents a pint, what is that a gill? What is it a quart? What is it a gallon?

24. If a yard of cloth is worth 7 dollars, what are  $2\frac{3}{8}$  yards worth?

25. If a man earns 11 dollars a week, what is that a day? What for 3 days? What for  $4\frac{1}{2}$  days?

26. If a man earns  $2\frac{3}{8}$  dollars in a day, what will he earn in a week?

27. What is  $\frac{5}{7}$  of a hogshead of wine?

28. 1 farthing is what part of a penny?

29. 2 farthings is what part of a penny?

30. 3 farthings is what part of a penny?

31. 1 penny is what part of a shilling?

32. 2 pence is what part of a shilling?

33. 3 pence is what part of a shilling?

34. 5 pence is what part of a shilling?

35. 6 pence is what part of a shilling?

36. 7 pence is what part of a shilling?

37. 8 pence is what part of a shilling?

38. 9 pence is what part of a shilling?

39. 10 pence is what part of a shilling?

40. 11 pence is what part of a shilling?

41. 1 shilling is what part of a pound?

42. 2 shillings is what part of a pound?

43. 3 shillings is what part of a pound?

44. 4 shillings is what part of a pound?

45. 5 shillings is what part of a pound?

46. What part of a pound is 6 shillings? 7 shillings? 8 shillings? 9 shillings? 10 shillings? 11 shillings? 12 shillings? 13 shillings? 14 shillings? 15 shillings? 16 shillings? 17 shillings? 18 shillings? 19 shillings?

47. How many farthings are there in a shilling?

48. One farthing is what part of a shilling?

49. 2 farthings is what part of a shilling? 3 farthings? 4 farthings? 5 farthings? 6 farthings? 7 farthings? 8 farthings? 9 farthings? 10 farthings?

50. How many pence are there in a pound?

51. One penny is what part of a pound?

52. What part of a pound is 2 pence? 3 pence? 4 pence? 5 pence? 6 pence? 7 pence? 8 pence? 11 pence? 15 pence? 27 pence? 35 pence?

53. How many pence are there in 1 shilling and 6 pence?

54. In 2 shillings and 4 pence, how many pence?

55. In 4 shillings and 5 pence, how many pence?

56. In 5 shillings and 8 pence, how many pence?

57. In 9 shillings and 11 pence, how many pence?

58. What part of £1 is 2s. 6d.?

59. 3s. 5d. is what part of £1?

NOTE.—*Reduce the whole to pence.*

60. 7s. 8d. is what part of £1?

61. What is the price of 2 yards of cloth, at 3s. 4d. a yard?

62. What will 8 yards of cloth cost, at 2s. 8d. a yard?

63. What will 4 bushels of wheat cost, at 5s. 9d. a bushel?

64. What must you give for 4 barrels of cider, at  $2\frac{1}{2}$  dollars a barrel?

65. If 3 bushels of wheat be divided between 2 men, how much would they have apiece?

66. If 4 bushels of corn be divided among 5 men, how much would they have apiece?

67. If 3 bushels of corn be divided among 7 men, how much would they have apiece?

68. How many nails are there in 1 yard?

69. How many nails are there in 4 yards?

70. How many nails are there in 5 yards and 2 nails?

71. In 7 yards and 3 quarters how many quarters?

72. In 4 yards, 2 quarters, and 3 nails, how many nails?
73. 1 nail is what part of a quarter?
74. 3 nails is what part of a quarter?
75. 1 nail is what part of a yard?
76. What part of 1 yard is 3 nails? 5 nails? 7 nails? 10 nails? 15 nails?
77. In 8 quarters of a yard how many yards?
78. In 12 quarters of a yard how many yards?
79. In 10 quarters of a yard how many yards?
80. In 15 quarters of a yard how many yards?
81. In 12 nails how many quarters of a yard?
82. In 16 nails how many quarters of a yard? How many yards?
83. In 24 nails how many quarters of a yard? How many yards?
84. In 35 quarters of a yard how many yards?
85. In 45 nails how many yards?
86. In 63 nails how many yards?
87. At 2 cents a nail what would 4 yards of cloth cost?
88. At  $2\frac{2}{3}$  dollars for 1 quarter of a yard, what would 2 yards cost?
89. 1 oz. is what part of a lb.?
90. What part of a lb. is 2 oz.? 3 oz.? 4 oz.? 5 oz.? 7 oz.? 10 oz.? 15 oz.?
91. What part of a qr. of 1 cwt. is 1 lb.? 2 lbs.? 3 lbs.? 4 lbs.? 7 lbs.? 9 lbs.? 14 lbs.? 18 lbs.? 23 lbs.?
92. At 3 cents for 1 oz. what would 1 lb. cost?
93. At 3 cents for 2 oz. what would 1 lb. cost?
94. At 3 cents for 8 oz. what would 1 lb. cost?
95. At 5 cents for 10 oz. what would 1 lb. cost?
96. At 8 shillings for 4 lbs. what would 10 lbs. cost?
97. If a man consumes 1 lb. and 3 oz. of meat in a day, how much would he consume in a week?

98. If a man spends  $2\frac{3}{5}$  dollars in a day, how much would he spend in a week?

99. If a man travels  $3\frac{2}{7}$  miles in an hour, how far would he travel in 3 hours? How far in 7 hours? How far in 12 hours?

100. If 2 men start from the same place, and travel in opposite directions; one at the rate of  $3\frac{2}{5}$  miles in an hour, and the other  $4\frac{1}{5}$  miles; how far will they be apart at the end of 1 hour? How far at the end of 2 hours? How far at the end of 3 hours? How far at the end of 7 hours?

101. Two men start from the same place, and travel the same way; one at the rate of  $4\frac{1}{7}$  miles in an hour, the other at the rate of  $4\frac{6}{7}$  miles in an hour; how far will they be apart at the end of 1 hour? How far in 2 hours? How far in 5 hours? How far in 10 hours? How far in 3 days, if they travel 10 hours in a day?

102. How many yards of cloth, at 5 dollars a yard, must be given for 8 barrels of flour, at 7 dollars per barrel?

103. What part of a month is 1 week? 2 weeks? 3 weeks?

104. What part of a year is 1 month? 2 months? 3 months? 4 months? 5 months? 6 months? 7 months? 8 months? 9 months? 10 months? 11 months?

105. What part of 1 month is 1 day? 2 days? 3 days? 7 days? 8 days? 11 days? 15 days? 18 days? 20 days? 24 days? 27 days?

106. If 5 bushels of oats will keep 7 horses through the winter, how many bushels will it take to keep 12 horses the same time?

107. If you give 7 men  $2\frac{1}{3}$  bushels of corn apiece, how many bushels would it take for the whole?

108. A man, failing in trade, was able to pay his creditors only 4 shillings on a dollar; how much would he pay on 2 dollars? How much on 3 dollars? How much on 7 dollars? How much on 10 dollars?

109. A man, failing in trade, is able to pay only 9 shillings on a pound; how much would he pay on a debt of 2 pounds? How much on 3 pounds? How much on 12 pounds?

110. A man, failing in trade, is able to pay only 4 shillings and 7 pence on a dollar; how much would he pay on a debt of 7 dollars?

111. If 6 dollars' worth of provisions will serve 3 men 5 days, how many days will it serve 1 man? How many days will it serve 2 men? How many days will it serve 8 men?

112. If 10 dollars' worth of provisions will serve 7 men 4 days, how many days will it serve 9 men?

113. If 12 dollars' worth of provisions will serve 7 men 3 days, how many men would it serve 1 day? How many 2 days? How many 8 days?

114. If 11 dollars' worth of provisions will serve 6 men 8 days, how many men will it serve 5 days?

115. If 8 dollars' worth of provisions will serve 7 men 5 days, how many days would 16 dollars' worth of provisions last 4 men?

116. If 1 peck of wheat affords 12 ten-penny loaves, how many penny loaves may be obtained from it? How many two-penny loaves? How many three-penny loaves? How many seven-penny loaves?

117. If 1 peck of wheat affords 11 eight-penny loaves, how many ten-penny loaves will it afford?

118. A man having hired some men and some boys, agreed to give each man 3 shillings, and each boy 2 shillings; how much would it take to pay a man and a boy? How much 2 men and 2 boys? How much 7 men and 7 boys?

119. A man having 18 shillings to pay among his laborers, would give to every man 2 shillings, and to every boy 1 shilling; the number of men and boys was equal; how many were there of each?

120. A gentleman having 50 shillings to pay among his laborers, would give to every man 8 pence, and to

every boy 4 pence; the number of men and boys was equal; how many were there of each?

121. Two men bought a bushel of corn, one gave 1 shilling, the other 2 shillings; what part of the whole did each pay? What part of the corn must each have?

122. Two men bought a barrel of flour for 8 dollars; one gave 3 dollars, the other 5 dollars; what part did each pay? and what part must each have?

123. Three men, A, B, and C, rented a garden; A paid 6 dollars, B 5 dollars, and C 9 dollars; how much did they all pay? What part of the whole did each pay? They sold the produce for 40 dollars; what part of it must each have? What did each one's share amount to?

124. Three men bought a lottery ticket for 10 dollars; the first gave 3 dollars, the second 5 dollars, and the third 2 dollars; they drew a prize of 120 dollars; what was each man's share?

125. Two men rented a pasture for 58 dollars; one put in 7 horses, and the other 3 horses; what ought each to pay?

126. Three men commenced trade together; they put in money in the following proportion; the first 3 dollars, as often as the second put in 4, and as often as the third put in 5; they gained 87 dollars; what was each man's share of the gain?

127. Two men rented a pasture for 32 dollars; the first put in 3 sheep for 4 months, the second put in 4 sheep for 5 months; how much ought each to pay?

NOTE.—Three sheep for 4 months is the same as 12 sheep for 1 month, 4 sheep for 5 months is the same as 20 sheep for 1 month. This question is, therefore, the same as if 1 man put in 12 sheep, and the other 20 sheep.

128. Two men, A and B, traded in company: A put in 1 dollar for 4 months, and B 2 dollars for 3

months, and they gained ninety cents; how many cents must each have?

129. Three men, A, B, and C, traded in company; and put in money in the following proportions. A put in 4 dollars as often as B put in 3, and as often as C put in 2; A's money was in 2 months, B's 3 months, and C's 4 months, and they gained 100 dollars; what was each one's share?

130. Two men, A and B, traded in company; A put in 2 dollars as often as B put in 3; A's money was employed 7 months, and B's money 5 months; they gained 58 dollars; what was each man's share of the gain?

131. Three men, A, B, and C, traded in company, and put in money in the following proportions: A put in 2 dollars as often as B put in 4, and as often as C put in 6. B's money was in twice as long as C's, and A's two times as long as B's; they gained 88 dollars; what was each one's share of the gain?

NOTE.—Interest is a reward or premium allowed by a debtor to a creditor for the use of money. The interest for 1 year, as established by law in some of the States, is 6 cents on a dollar, 6 dollars on a hundred dollars, or in fine  $\frac{6}{100}$  of the sum whatever be the denomination. It is called 6 per cent., that is, 6 on the hundred, because it is always reckoned by the hundred. So 3 per cent., 4 per cent., etc., signify  $\frac{3}{100}$ ,  $\frac{4}{100}$ , etc., or so much on the hundred. The teacher can vary the examples to illustrate the different rates per cent.

132. The interest of 1 dollar being 6 cents for 1 year, what is the interest of 7 dollars for the same time? What is the interest of 10 dollars? of 15 dollars? of 20 dollars? of 30 dollars? of 50 dollars? of 75 dollars? of 100 dollars? of 118 dollars?

133. If the interest of 1 dollar is 6 cents for 1 year, what would it be for 2 years? What would be the interest of 8 dollars for 2 years? of 17 dollars? of 43 dollars?



134. If the interest of 100 dollars is 6 dollars for a year, what would be the interest of 50 dollars for the same time? of 2 hundred? of 3 hundred? of 4 hundred? of 1 hundred and 50? of 2 hundred and 50?

135. If the interest of 100 dollars is 6 dollars for 1 year, what would be the interest of it for .6 months? for 3 months? for 4 months? for 8 months? for 9 months? for 1 month? for 2 months? for 5 months? for 7 months? for 10 months? for 11 months?

136. What is the interest of 100 and 32 dollars for 2 years, at 6 per cent.?

137. What is the interest of 300 dollars for 1 year and 6 months, at 6 per cent.?

138. What is the interest of 1 dollar for 6 months, at 6 per cent.? what for 2 months? what for 1 month? what for 3 months? 4 months? 5 months? 7 months? 9 months? 11 months?

139. What is the interest of 57 dollars for 1 year and 7 months, at 6 per cent.?

140. What is the interest of 200 and 67 dollars for 1 year and 4 months, at 6 per cent.?

141. If the interest of 1 year is 6 per cent., what would be the per cent for 2 years? for 3 years? for 6 months? for 2 months? for 1 month? for 4 months? for 5 months? for 7 months? for 8 months? for 9 months?

142. If the interest of 2 months, or 60 days, is 1 per cent., what would be the per cent for 20 days? what for 40 days? what for 15 days? what for 45 days? what for 12 days? what for 10 days? what for 5 days?

143. What is the interest of 100 and 37 dollars for 2 years 3 months and 20 days?

144. A can do a piece of work in 2 days; how much of it can he do in 1 day?

145. B can do a piece of work in 4 days; how much of it can he do in 1 day?

146. If A can do  $\frac{1}{2}$  of a piece of work in 1 day,

and B can do  $\frac{1}{4}$  of it in 1 day, how much would both do in a day? How long would it take them both together to do the whole?

147. If 1 man can do a piece of work in 2 days, and another in 3 days, how much of it would each do in a day? How much would both together do? How long would it take them both to do the whole?

148. A cistern has 2 cocks; the first will fill it in 3 hours, the second in 6 hours; how much of it would each fill in an hour? How much would both together fill? How long would it take them both to fill it?

149. A man and his wife found by experience, that, when they were both together, a bushel of meal would last them only 2 weeks; but when the man was gone, it would last his wife 5 weeks; how much of it did both together consume in 1 week? What part did the woman alone consume in 1 week? What part did the man alone consume in 1 week? How long would it last the man alone?

150. If 1 man could build a piece of wall in 5 days, and another man could do it in 7 days, how much of it would each do in 1 day? How many days would it take them both to do it?

151. A cistern has 3 cocks; the first would fill it in 3 hours; the second in 6 hours; the third in 4 hours; what part of the whole would each fill in 1 hour? and how long would it take them all to fill it, if they were all running at once?

152. A and B together can build a boat in 8 days, and with the assistance of C they can do it in 5 days; how much of it can A and B build in 1 day? How much of it can A, B, and C, build in 1 day? How much of it can C build alone in 1 day? How long would it take C to build it alone?

153. Suppose I would line 8 yards of broadcloth that is  $1\frac{1}{2}$  yards wide, with shalloon that is  $\frac{3}{4}$  of a yard wide; how many yards of the shalloon will line 1 yard of the broadcloth? How many yards will line the whole?

154. If 7 yards of cloth cost 13 dollars, what will 10 yards cost?

155. If the wages of 25 weeks come to 75 dollars, what will be the wages of 7 weeks?

156. If 8 tons of hay will keep 7 horses three months, how much will keep 12 horses the same time?

157. If a staff 4 feet long casts a shadow 6 feet long, what is the length of a pole that casts a shadow 58 feet at the same time of day?

158. If a stick 8 feet long casts a shadow 2 feet in length, what is the height of a tree which casts a shadow 42 feet at the same time of day?

159. At six dollars per week, how many months board can I have for 100 dollars?

160. A ship has sailed 24 miles in 4 hours; how long will it take her to sail 150 miles at the same rate?

161. 30 men can perform a piece of work in 20 days; how many men will it take to perform the same work in 8 days?

162. 17 men can perform a piece of work in 25 days; in how many days would 5 men perform the same work?

163. A hare has 76 rods the start of a greyhound, but the greyhound runs 15 rods to 10 of the hare; how many rods must the greyhound run to overtake the hare?

164. A garrison has provision for 8 months, at the rate of 15 ounces per day; how much must be allowed per day, in order that the provision may last 11 months?

165. If 8 men can build a wall 15 rods in length in 10 days, how many men will it take to build a wall 45 rods in length in 5 days?

166. If a quarter of wheat affords 60 ten-penny loaves, how many eight-penny loaves may be obtained from it?

167. Said Harry to Dick, My purse and money together are worth 16 dollars, but the money is worth 7

times as much as the purse; how much money was there in the purse? and what is the value of the purse?

168. A man being asked the price of his horse, answered, that his horse and saddle together were worth 100 dollars, but the horse was worth 9 times as much as the saddle; what was each worth?

169. A man having a horse, a cow, and a sheep, was asked what was the value of each. He answered, that the cow was worth twice as much as the sheep, and the horse 3 times as much as the sheep, and that all together were worth 60 dollars; what was the value of each?

170. A man bought an apple, an orange and a melon, for 21 cents; for the orange he gave twice as much as for the apple, and for the melon he gave twice as much as for the orange; how much did he give for each?

171. If 80 dollars' worth of provisions will serve 20 men 24 days, how many days will 100 dollars' worth of provisions serve 30 men?

172. There is a pole  $\frac{1}{2}$  and  $\frac{1}{3}$  under water, and 10 feet out; how long is the pole?

173. In an orchard of fruit trees,  $\frac{1}{2}$  of them bear apples,  $\frac{1}{4}$  of them bear plums,  $\frac{1}{8}$  of them pears, 7 of them peaches, and 3 of them cherries; how many trees are there in the whole, and how many of each sort?

174. A farmer being asked how many sheep he had, answered, that he had them in 4 pastures; in the first he had  $\frac{1}{3}$  of his flock; in the second  $\frac{1}{4}$ ; in the third  $\frac{1}{6}$ ; and in the fourth 15; how many sheep had he?

175. A man driving his geese to market, was met by another, who said, Good-morrow, master, with your hundred geese. Says he, I have not a hundred; but if I had half as many more as I now have, and two geese and a half, I should have a hundred; how many had he?

176. What number is that, to which if its half be added the sum will be 60?

177. What number is that, to which if its third be added the sum will be 48?

178. What number is that, to which if its fifth be added the sum will be 54?


179. What number is that, to which if its half and its third be added the sum will be 55?

180. A man being asked his age, answered, that if its half and its third were added to it, the sum would be 77; what was his age?

181. What number is that which being increased by its half, its fourth, and eighteen more, will be doubled?

182. A boy being asked his age, answered, that if  $\frac{1}{2}$  and  $\frac{1}{4}$  of his age, and 20 more were added to his age, the sum would be 3 times his age. What was his age?

183. A man being asked how many sheep he had, answered, that if he had as many more,  $\frac{1}{2}$  as many more, and  $2\frac{1}{2}$  sheep, he should have 100. How many had he?



# ARITHMETIC.

---

## PART II.

### KEY.

THE Key contains remarks on the principles employed, and illustrations of the manner of solving the examples in each section. All the most difficult of the practical examples are solved in such a manner as to show the principles by which they are performed. Care has been taken to select examples for solution, that will explain those which are not solved. Many remarks with regard to the manner of illustrating the principles to the pupils, are inserted in their proper places.

Instructors who may never have attended to fractions, need not be afraid to undertake to teach this book. The author flatters himself that the principles are so illustrated, and the processes are made so simple, that any one, who shall undertake to teach it, will find himself familiar with fractions before he is aware of it, although he knew nothing of them before; and that every one will acquire a facility in solving questions, which he never before possessed.

The reasoning used in performing these small examples, is precisely the same as that used upon large ones. And when any one finds a difficulty in solving a question, he will remove it much sooner, and much more effectually, by taking a very small example of the same kind, and observing how he does it, than by recurring to a rule.

The practical examples at the commencement of each section and article, are generally such as to show the pupil what the combination is, and how he is to perform it. This will teach the pupil gradually to reason upon abstract numbers. In each combination, there are a few abstract examples without practical ones, to exercise the learner in the combinations, after he knows what these combinations are. It would be an excellent exercise for the pupil to put

these into a practical form when he is reciting. For instance, when the question is, how many are 5 and 3? Let him make a question in this way: if an orange cost five cents, and an apple 3 cents, what would they both come to? This may be done in all cases.

The examples are often so arranged, that several depend on each other, so that the preceding explains the following one. Sometimes also, in the same example, there are several questions asked, so as to lead the pupil gradually from the simple to the more difficult. It would be well for the pupil to acquire the habit of doing this for himself, when difficult questions occur.

The operations can be illustrated by counters, or marks on the blackboard, according to the necessity of the pupils. These illustrations will be less necessary as the pupils advance in the work; but a frequent reference to them throughout most of the book will be useful, in fixing more clearly in mind the principles involved in the operations.

The book may be used in classes where it is convenient. The pupil may answer the questions with the book before him or not, as the instructor thinks proper. A very useful mode of recitation is for the instructor to read the example to the whole class, and then, allowing sufficient time for them to perform the question, call upon some one to answer it. In this manner, all the pupils will be obliged to perform the example, because they do not know who is to answer it. In this way it will be best for them to answer without the book.

It will often be well to let the elder pupils hear the younger. This will be a useful exercise for them, and an assistance to the instructor.

---

## SECTION I.

A. THIS section contains addition and subtraction. The first example may be solved by means of beans, peas, etc., or by means of the blackboard. The former method is preferable, if the pupil be very young, not only by the examples in the first part of this section, but by the first examples in all the sections.

The pupil will probably solve the first examples without any instruction.



B & C. The articles B and C contain the common addition table as far as the first 10 numbers. In the first, the numbers are placed in order; and in the second, out of order.

The pupil should study these until he can find the answers readily, and then he should commit the answers to memory.

D. In this article the numbers are larger than in the preceding; and, in some instances, three or more numbers are added together. In the abstract examples, the numbers from one to ten are to be added to the numbers from ten to twenty.

E. This article contains subtraction.

F. This article is intended to make the pupil familiar with adding the first nine numbers to all others. The pupil should study it until he can answer the questions very readily.

G. In this article all the preceding are combined together, and the numbers from 1 to 10\* are added to all numbers from 20 to 100, and subtracted in the same manner.

18. 57 and 6 are 63, and 3 are 66, and 5 are 71, and 2 are 73, less 8 are 65.

H. This article contains practical questions which show the application of all the preceding articles.

6. 37 less 5 are 32, less 8 are 24, less 6 (which he kept himself) are 18; consequently he gave 18 to the third boy.

## SECTION II.

THIS section contains multiplication. The pupil will see no difference between this and addition. It is best that he should not at first, though it may be well to explain it to him after a while.

A. This article contains practical questions, which the pupil will readily answer.

---

\* Figures are used in the key, because the instructor is supposed to be acquainted with them. They are not used in the first part of the book, because the pupil would not understand them so well as he will the words.

1. Three yards will cost 3 times as much as 1 yard.

N. B.—Be careful to make the pupil give a similar reason for multiplication, both in this article and elsewhere.

11. A man will travel 4 times as far in 4 hours as he will in 1 hour.

15. There are 4 times as many feet in 4 yards as in 1 yard, or 4 times 3 feet.

B. This article contains the common multiplication table, as far as the product of the first ten numbers. The pupil should find the answers once or twice through, until he can find them readily, and then let him commit them to memory.

C. This article is the same as the preceding, except in this, the numbers are out of their natural order.

D. In this article, multiplication is applied to practical examples. They are of the same kind as those in article A of this section.

12. There are 8 times as many squares in 8 rows, as in 1 row. 8 times 8 are 64.

13. There are 6 times as many farthings in 6 pence, as in 1 penny. 6 times 4 are 24.

17. 12 times 4 are 48.

23. There are 3 times as many pints in 3 quarts as in 1 quart. 3 times 2 are 6. And in 6 pints there are 6 times 4 gills, or 24 gills.

28. In 3 gallons there are 12 quarts, and in 12 quarts there are 24 pints.

31. In 2 gallons are 8 quarts; in 8 quarts 16 pints; in 16 pints 64 gills. 16 times 4 are 64.

35. In 1 gallon are 32 gills; and 32 times 2 cents are 64 cents. Or, 1 pint will cost 8 cents, and there are 8 pints in a gallon. 8 times 8 are 64.

38. They will be 2 miles apart in 1 hour, 4 miles in 2 hours, etc.

---

### SECTION III.

A. THIS section contains division. The pupil will scarcely distinguish it from multiplication. It is not important that he should at first.

The pupil will be able to answer these questions by the multiplication table, if he has committed it to memory thoroughly.

B. In this article the pupil obtains the first ideas of fractions, and learns the most important of the terms which are applied to fractions.\* The pupil has already been accustomed to look upon a collection of units, as forming a number, or as being itself a part of another number. He knows, therefore, that one is a part of every number, and that every number is a part of every number larger than itself. As every number may have a variety of parts, it is necessary to give names to the different parts, in order to distinguish them from each other. The parts receive their names, according to the number of parts into which any number is divided. If the number is divided into two equal parts, the parts are called halves; if it is divided into three equal parts, they are called thirds; if into four parts, fourths, etc.; and having divided a number into parts, we can take as many of the parts as we choose. If a number is divided into five equal parts, and three of the parts are taken, the fraction is called *three fifths* of the number. The *name* shows at once into how many parts the number is to be divided, and how many parts are taken.

The examples in this book are so arranged that the *names* will usually show the pupil how the operation is to be performed. In this section, although the pupil is taught to divide numbers into various parts, he is not taught to notice any fractions, except those where the numbers are divided into their simple units, which is the most simple kind.

It will be best to use beans, pebbles, etc., first.

20. Since 1 is 1 third of 3, 2 must be 2 thirds of 3.

34. Illustrate by grouping the marks or counters by threes.

Proceed in the same manner with the other divisions.

This being one of the most useful combinations, and one but very little understood by most people, especially when applied to large numbers, the pupil must be made perfectly familiar with it. Ask questions like those in the book for large numbers, and also some like the following: What part of 7 is 18? the answer will be  $\frac{18}{7}$ .

---

\* As soon as the terms applied to fractions are fully comprehended, the operations on them are as simple as those on whole numbers.

C. The first ten figures are here explained. They are used as an abridged method of writing numbers, and not with any reference to their use in calculating.

This article is only a continuation of the last. All the numbers from 1 to 100 are introduced into the two articles, and are divided by all the numbers from 1 to 10; except that some of the largest are not divided by some of the smallest.

2. The pupil answers first, how many times 2 is contained in 12, then how many times 3.

D. These examples, which are similar to those in article A of this section, are solved in the same manner.

5. It would take as many hours as 3 miles are contained in 10 miles. 3 hours and  $\frac{1}{3}$  of an hour.

20. They cost as many cents as there are 3 apples in 30 apples; that is, 10 cents.

21. 12 dollars a month; and 12 dollars a month is 3 dollars a week; that is, 18 shillings a week, which is 3 shillings a day.

26. The whole loss was 35 dollars, which was 7 dollars apiece.

---

#### SECTION IV.

A. THIS article contains multiplication simply. It is repeating a number a certain number of times and a part of another time.

14. 6 times 5 are 30, and  $\frac{2}{3}$  of 5 are 3, which added to 30 make 33.

B. In this article the pupil is taught to change a certain number of twos into threes, threes into fives, etc. This article combines all the preceding operations.

24. 4 cords of wood will cost 28 dollars, and  $\frac{2}{7}$  of a cord will cost 2 dollars, which makes 30 dollars. 30 dollars will buy 3 hundred weight of sugar and  $\frac{2}{3}$  of another hundred weight.

29. 7 times 8 are 56; and  $\frac{5}{8}$  of 8 are 5, which added to 56 make 61; 61 are 6 times 9, and  $\frac{7}{9}$  of 9.

C. 1. 4 bushels of apples, at 3 shillings a bushel, come to 12 shillings; and 12 shillings are 2 dollars.

2. The 2 lemons come to 8 cents, and 8 cents will buy 4 apples, at 2 cents apiece.

This is usually called Barter. The general principle is to find what the article will come to, whose price and quantity are given, and then to find how much of the other article that money will buy.

6. If 2 apples cost 4 cents, 1 will cost 2 cents, and 4 will cost 8 cents. Or 4 apples will cost 2 times as much as 2 apples.

22. Find how many times 2 pears are contained in 20 pears, which is 10 times. 10 times 3 cents are 30 cents. Or first find what 20 pears would come to at 3 cents apiece; and since it is 2 for 3 cents, instead of 1 for 3 cents, the price will be half as much.

23. See how many times you can have 5 cents in 30 cents, and you can buy so many times 3 eggs. 30 is 6 times 5, and 6 times 3 are 18. 18 eggs.

24. 10 dollars a week, and 40 dollars a month.

25. 5 dollars are 30 shillings, which is 10 shillings a day. 6 shillings is equal to 1 dollar in some of the States.

26. 5 dollars apiece.

---

## SECTION V.

IN this section the principle of fractions is applied to larger numbers, but such as are divisible into the parts proposed to be taken. The pupil, who is familiar with what precedes, will easily understand the examples in this section. They require nothing but division and multiplication.

A. Let the pupil explain each example in the following manner: What is 1 sixth of 18? *Ans.* 3. Why? Because 6 times 3 are 18; therefore if you divide 18 into 6 equal parts, one of the parts will be 3.

The pupil will be very likely to say 3 is the 6th part of 18, because 3 times 6 are 18. Be careful to make him say it the other way, viz., 6 times 3 are 18.

14. 1 third of 9 is 3;  $\frac{2}{3}$  is 2 times as much as  $\frac{1}{3}$ , therefore  $\frac{2}{3}$  of 9 is 6.

19. 1 barrel will cost  $\frac{1}{4}$  part of 12 dollars; 3 barrels will cost  $\frac{3}{4}$  of 12 dollars; 7 barrels will cost  $\frac{7}{4}$  of 12 dollars.

37. What is  $\frac{5}{8}$  of 32?  $\frac{1}{8}$  of 32 is 4,  $\frac{5}{8}$  are 5 times 4, or 20.

B. 11.  $\frac{1}{5}$  of 20 is 4;  $\frac{7}{7}$  are 7 times 4, of 28; and 28 is 4 times 6 and  $\frac{4}{6}$  of 6.

C. 3. 1 half of 10 is 5;  $\frac{2}{5}$  of 10 are 4; 5 and 4 are 9. He gave away 9, and had 1 left.

4. 1 yard will cost  $\frac{1}{3}$  of what 3 yards cost.  $\frac{1}{3}$  of 6 dollars is 2 dollars.

5. 2 yards will cost 1 half of what 4 cost; or 6 dollars.

6. 3 apples will cost  $\frac{1}{3}$  of what 9 cost, or 6 cents.

7. 2 is  $\frac{2}{3}$  of 3; therefore 2 oranges will cost  $\frac{2}{3}$  of what 3 cost.  $\frac{2}{3}$  of 18 cents are 12 cents.

8.  $\frac{2}{5}$  of 25 are 20. The 10 apples cost 20 cents, which was 2 cents apiece.

11.  $\frac{2}{7}$  of 42 are 12, and 6 times 12 are 72. 72 dollars.

13. 3 is  $\frac{3}{4}$  of 4;  $\frac{3}{4}$  of 12 dollars are 9 dollars; or 4 yards at 12 dollars is 3 dollars a yard, and 9 dollars for 3 yards.

14. Solved like the 13. *Ans.* 15 cents.

15. Since 1 is  $\frac{1}{3}$  of 3, 7 is  $\frac{7}{3}$  of 3.  $\frac{7}{3}$  of 15 cents are 35 cents; or 3 oranges at 15 cents, is 5 cents apiece. 7 times 5 cents are 35 cents.

NOTE.—In questions of this kind, it is generally the simplest way to find what 1 article will cost, then it may easily be told how much any number will cost.

19. 4 men would do it in 1 half the time that 2 would do it. Or, you may say, if 2 men would do it in 6 days, 1 man would do it 12 days, and 4 men in  $\frac{1}{4}$  of that time, or 3 days.

## SECTION VI.

A. 4. 2 halves of any number make the whole number. Therefore 2 is 1 half of 2 times 2; or 4. It is  $\frac{1}{4}$  of 4 times 2, or 8.

Let the pupil answer these questions in the following manner: 4 is  $\frac{1}{3}$  of 3 times 4; 3 times 4 are 12. 5 is  $\frac{1}{7}$  of 7 times 5; 7 times 5 are 35.

B. 2. 4 is 2 times 2.

4. 6 is 2 times 3.

16. 2 thirds of any number is twice as much as  $\frac{1}{3}$  of the same number. If 4 is  $\frac{2}{3}$  of some number, then 1 half of 4 or 2 is  $\frac{1}{3}$  of that number; 2 is  $\frac{1}{3}$  of 6; therefore 4 is  $\frac{2}{3}$  of 6.

20. If 6 is  $\frac{3}{4}$  of a number,  $\frac{1}{3}$  of 6 or 2 is  $\frac{1}{4}$  of the same number; 2 is  $\frac{1}{4}$  of 8; therefore 6 is  $\frac{3}{4}$  of 8.

23. It is evident that  $\frac{1}{7}$  of a pound will cost only  $\frac{1}{8}$  of what  $\frac{2}{7}$  will cost. If  $\frac{2}{7}$  cost 6 cents,  $\frac{1}{7}$  will cost 2 cents, and the whole pound 14 cents.

26. It will probably be perceived by this time, that  $\frac{2}{7}$  of a number being given, it is necessary to find  $\frac{1}{7}$ , and then the number is easily found; 4 being  $\frac{2}{7}$ , 2 is  $\frac{1}{7}$ , and 2 is  $\frac{1}{7}$  of 14.

45. 24 being  $\frac{2}{3}$ ,  $\frac{1}{3}$  of 24 or 3 will be  $\frac{1}{3}$ ; 3 is  $\frac{1}{3}$  of 27.

C. 6. 20 being  $\frac{4}{5}$ , 5 is  $\frac{1}{5}$ , and 5 is  $\frac{1}{5}$  of 35; and 35 is 5 times 6, and  $\frac{5}{6}$  of 6.

D. 4. 18 is three times 6, and 6 is  $\frac{1}{4}$  of 4 times 6, or 24.  
*Ans.* 24 dollars.

6. 54 is  $\frac{3}{8}$  of 48; 12 yards at 48 dollars is 4 dollars a yard. He gained 6 dollars.

7. 10 feet is  $\frac{2}{3}$  of 15 feet.

8. If  $\frac{2}{3}$  are under water, there must be  $\frac{1}{3}$  out of the water. 4 is  $\frac{1}{3}$  of 12.

9. If  $\frac{2}{5}$  are under water, there must be  $\frac{3}{5}$  out of the water. 6 is  $\frac{3}{5}$  of 10.

10.  $\frac{3}{7}$  and  $\frac{2}{7}$  are  $\frac{5}{7}$ .  $\frac{5}{7}$  bear cherries and peaches; consequently, the 10 which bear plums must be the other  $\frac{2}{7}$ . 10 is  $\frac{2}{7}$  of 35. 10 bear peaches, and 15 bear cherries.

11.  $\frac{2}{9}$ , and  $\frac{3}{9}$ , and  $\frac{1}{9}$ , and  $\frac{1}{9}$ , are  $\frac{7}{9}$ ; therefore 12 must be the other  $\frac{2}{9}$  of the whole. The whole number is 54.

#### MISCELLANEOUS EXAMPLES.

6. The greyhound gains upon the fox 4 rods in a minute. It will take him 20 minutes to gain 80 rods.

8.  $\frac{3}{8}$  of 24. Or you may say, 1 sheep would cost 3 dollars, and 3 sheep 9 dollars.

9. 30 horses will eat 10 times as much as 3 horses.

11. 10 dollars apiece, and 2 dollars a yard.

12. 5 dollars for 1 week, 20 dollars for a month, and 25 dollars for 5 weeks.

14. It would take them 5 times as long to eat 40 bushels, as it would to eat 8 bushels.

15. 4 horses would eat 4 bushels in 3 days, and it would take them 9 times as long to eat 36 bushels. *Ans.* 27 days.

16. If 2 men spend 12 dollars in 1 week, 1 man will spend 6 dollars in 1 week, and 30 dollars in 5 weeks, and 3 men would spend 3 times as much, or 90 dollars.

17. The shadow of the staff is  $\frac{2}{3}$  of the length of the staff, therefore the shadow of the pole must be  $\frac{2}{3}$  the length of the pole. 18 feet is  $\frac{2}{3}$  of 27 feet.

20. It would take 2 men 3 times as long to do it as it would 6 men.

23. 8 men would do a piece of work 1 half as large in 2 days, and it would take 2 men 4 times as long to do it, or 8 days.

28. He must sell it for 56 dollars in order to gain 16 dollars. 56 dollars is 7 dollars per barrel.

29. It cost him 35 dollars, and he must sell it for 45 to gain 10 dollars; 45 dollars is 9 dollars a firkin.

30. *Ans.* 56 cents. See Section VI.

33. If it would last 3 men 10 months, it would last 1 man 30 months, and 5 men 6 months.

34. There are 8 times 5 in 40; and since the other would build as many times 9 as the first does 5, he would build 6 times 9, or 72 rods.

## SECTION VII.

A. 13.  $\frac{1}{2}$  of 20 is 10,  $\frac{2}{3}$  are 16; 16 being  $\frac{7}{2}$ , 2 is  $\frac{1}{7}$ ; 2 is  $\frac{1}{4}$  of 8, and 6 is  $\frac{2}{3}$  of 9.

16.  $\frac{2}{7}$  of 28 are 8; 8 is 2 times 4, and 4 is  $\frac{1}{3}$  of 12, (12 is  $\frac{2}{3}$  of 18,) and 12 is 6 times 2 and  $\frac{2}{3}$  of 3.

B. 1.  $\frac{4}{5}$  of 15 are 12; 12 is 6 times 2; 2 is  $\frac{1}{10}$  of 20; (12 is  $\frac{6}{10}$  of 20;)  $\frac{1}{3}$  of 21 is 7; 20 is 2 times 7 and  $\frac{6}{7}$  of 7.

2.  $\frac{4}{3}$  of 18 are 24; 24 is  $\frac{8}{3}$  of 27;  $\frac{1}{4}$  of 35 is 8; 27 is 5 times 5 and  $\frac{2}{5}$  of 5.

C. This article contains the multiplication table, in which the numbers from 10 to 20 are multiplied by the ten first numbers.

## SECTION VIII.

A. 1. In one there are 2 halves; in 2 there are twice as many halves, that is 4 halves or 2.



2. In one there are 2 halves, in 3 there are three times two halves, that is, 6 halves, or  $\frac{6}{2}$ .

3. In one there are 3 thirds, in 2 there are twice 3 thirds, that is, 6 thirds, or  $\frac{6}{3}$ .

15. Draw two lines on the board thus  $\text{—————}$ . Each line call one; divide the upper line into two equal parts, each part is one half of one, or one half; divide the lower line in the same way, and then call for the answer. The form of the question may be varied by asking how many half apples there are in 2 apples.

37. In 5 and 2 thirds, how many thirds? Draw five parallel equal lines, divide them into thirds, and draw another parallel with the others and two thirds as long, let the scholar count the thirds. In all these cases of illustration on the board, it is presumed that the scholar will soon take the hint, and devise illustrations for himself at his seat.

---

## SECTION IX.

A. 2.  $\frac{1}{3}$  signifies that 1 thing is divided into 3 equal parts, and 1 part taken. Therefore 2 times 1 third is 2 parts, or  $\frac{2}{3}$ .

6. 7 times  $\frac{1}{3}$  is  $\frac{7}{3}$ , or  $2\frac{1}{3}$ .

B. 4. 4 times 2 are 8, and 4 times 1 half are 4 halves, or 2, which added to 8 make 10.

18. 4 times 3 are 12, and 4 times  $\frac{3}{4}$  are  $\frac{12}{4}$  or three whole ones, which added to 12 make 15.

32. 2 times 3 are 6, and 2 times  $\frac{3}{4}$  are  $\frac{6}{4}$ , which added to 6 make  $6\frac{3}{4}$ .

40. 10 barrels at 3 dollars and  $\frac{5}{8}$  a barrel; 10 barrels at 3 dollars, would be 30 dollars, then 10 times  $\frac{5}{8}$  is  $\frac{50}{8}$ , or 8 and  $\frac{6}{8}$  of a dollar. *Ans.*  $38\frac{3}{4}$  dollars.

C. 2.  $\frac{3}{4}$  to each would be 3 times  $\frac{3}{4}$ , or  $\frac{9}{4}$ , which are  $2\frac{1}{4}$  oranges.

3.  $\frac{10}{5}$  or 2 bushels.

4. 7 times  $\frac{3}{4}$  are  $\frac{21}{4}$ , or  $5\frac{1}{4}$  gallons.

5. 8 yards and  $\frac{2}{4}$  or 2 yards, that is 10 yards.

6. 4 times 2 are 8, and 4 times  $\frac{3}{2}$  are  $\frac{12}{2}$ , or  $2\frac{3}{2}$ , which added to 8 make  $10\frac{3}{2}$  bushels.

12. It would take 1 man 3 times as long as it would 3 men. *Ans.*  $13\frac{1}{2}$  days.

14. 3 men would build 3 times as much as 1 man; and in 4 days they would build 4 times as much as in 1 day. *Ans.*  $38\frac{2}{3}$  rods.

15. *Ans.* 12 yards.

### SECTION X.

A. 21.  $\frac{1}{3}$  of 1 is  $\frac{1}{3}$ .  $\frac{1}{3}$  of 2 is 2 times as much, or  $\frac{2}{3}$ .  $\frac{1}{3}$  of 4 is  $\frac{4}{3}$ , or  $1\frac{1}{3}$ .  $\frac{1}{3}$  of 5 is  $\frac{5}{3}$ , or  $1\frac{2}{3}$ .  $\frac{1}{3}$  of 6 is  $\frac{6}{3}$ , or 2.  $\frac{1}{3}$  of 7 is  $\frac{7}{3}$ , or  $2\frac{1}{3}$ .

27.  $\frac{1}{5}$  of 1 is  $\frac{1}{5}$ .  $\frac{1}{5}$  of 2 is  $\frac{2}{5}$ .  $\frac{1}{5}$  of 3 is  $\frac{3}{5}$ .  $\frac{1}{5}$  of 7 is  $\frac{7}{5}$ , or  $1\frac{2}{5}$ .

This manner of reasoning may be applied to any number. To find  $\frac{1}{7}$  of 38: it is  $\frac{38}{7}$ , for  $\frac{1}{7}$  of 38 is 38 times as much as  $\frac{1}{7}$  of 1, and  $\frac{1}{7}$  of 1 is  $\frac{1}{7}$ , consequently  $\frac{1}{7}$  of 38 is  $\frac{38}{7}$ , and  $\frac{38}{7}$  is  $5\frac{4}{7}$ .

40. To find  $\frac{2}{3}$  of a number,  $\frac{1}{3}$  must be found first, and then  $\frac{2}{3}$  will be 2 times as much.  $\frac{1}{3}$  of 7 is  $\frac{7}{3}$ , and 2 times  $\frac{7}{3}$  are  $1\frac{4}{3}$ , or  $4\frac{2}{3}$ .

74.  $\frac{1}{9}$  of 50 is  $\frac{50}{9}$ , or  $5\frac{5}{9}$ ;  $\frac{4}{9}$  is 4 times as much; 4 times 5 are 20, 4 times  $\frac{5}{9}$  are  $\frac{20}{9}$ , or  $2\frac{2}{9}$ , which added to 20 make  $22\frac{2}{9}$ .

NOTE.—The manner employed in example 40th is best for small numbers, and that in the 74th for large numbers.

B. 2. *Ans.*  $1\frac{2}{3}$  apiece.

3.  $\frac{1}{3}$  of 3 is  $\frac{3}{3}$ ;  $\frac{2}{3}$  of a bushel apiece.

4.  $\frac{3}{5}$  of 7 is  $4\frac{1}{5}$ ; he gave away  $4\frac{1}{5}$ , and kept  $2\frac{4}{5}$ .

6. 1 half dollar a yard, or 50 cents.

7.  $\frac{1}{5}$  of 7 is  $\frac{7}{5}$ , or  $1\frac{2}{5}$ ;  $\frac{2}{5}$  of a dollar is  $\frac{2}{5}$  of 100 cents, which is 40 cents. *Ans.* 1 dollar and 40 cents a bushel.

8.  $\frac{1}{6}$  of 8 is  $1\frac{2}{3}$ ;  $\frac{2}{6}$  of 100 is  $33\frac{2}{3}$ . *Ans.* 1 dollar and  $33\frac{2}{3}$  cents, or it is 1 dollar and 2 shillings.

9. If 3 bushels cost 8 dollars, 1 bushel will cost 2 dollars and  $\frac{2}{3}$ , and 2 bushels will cost  $5\frac{1}{3}$  dollars. *Ans.* 5 dollars and 2 shillings, or  $33\frac{2}{3}$  cents.

13. If 7 pounds cost 40 cents, 1 will cost  $5\frac{7}{7}$  cents; 10 pounds will cost  $57\frac{1}{7}$  cents.

16. 1 cock would empty it in 6 hours, and 7 cocks would empty it in  $\frac{1}{7}$  of 6 hours, or  $\frac{6}{7}$  of 1 hour, which is  $\frac{6}{7}$  of 60 minutes;  $\frac{6}{7}$  of 60 minutes is  $51\frac{3}{7}$  minutes.

## SECTION XI.

A. 2. 2 halves of a number make the number, consequently 1 and 1 half is the half of 2 times 1 and 1 half, which is 3.

15.  $4\frac{2}{7}$  is  $\frac{1}{5}$  of 5 times 4 and  $\frac{2}{7}$ , which is  $22\frac{1}{7}$ .

17.  $4\frac{2}{7}$  is  $\frac{1}{9}$  of 9 times  $4\frac{2}{7}$ , which is  $39\frac{2}{7}$ .

B. 4. 5 is 3 times  $\frac{1}{3}$  of 5, which is  $\frac{5}{3}$ , or  $1\frac{2}{3}$ .

30. If 8 is  $\frac{3}{4}$  of some number,  $\frac{1}{3}$  of 8 is  $\frac{1}{4}$  of the same number.  $\frac{1}{3}$  of 8 is  $2\frac{2}{3}$ ,  $2\frac{2}{3}$  is  $\frac{1}{4}$  of 4 times  $2\frac{2}{3}$  which is  $10\frac{2}{3}$ ; therefore 8 is  $\frac{3}{4}$  of  $10\frac{2}{3}$ .

40. If 8 is  $\frac{6}{7}$ ,  $\frac{1}{6}$  of 8 is  $\frac{1}{7}$ ;  $\frac{1}{6}$  of 8 is  $\frac{8}{6}$ ,  $\frac{8}{6}$  is  $\frac{1}{7}$  of  $5\frac{6}{6}$ , or  $9\frac{2}{6}$ ; therefore 8 is  $\frac{6}{7}$  of  $9\frac{2}{6}$ .

52. If  $\frac{5}{9}$  of a ton cost 23 dollars,  $\frac{1}{9}$  of a ton must be  $\frac{1}{5}$  of 23, that is  $4\frac{2}{5}$  dollars, and the whole would cost 9 times as much, that is  $41\frac{2}{5}$ .

69.  $\frac{1}{5}$  of 65 is  $7\frac{2}{5}$ ;  $7\frac{2}{5}$  is  $\frac{1}{5}$  of 5 times  $7\frac{2}{5}$ , which is  $36\frac{1}{5}$ . 65 is  $\frac{5}{6}$  of  $36\frac{1}{5}$ .

C. 4. 37 is  $\frac{8}{9}$  of  $32\frac{8}{9}$ , which taken from 37 leaves  $4\frac{1}{9}$ .  
Ans.  $4\frac{1}{9}$  dollars.

5. 7 feet must be  $\frac{2}{5}$  of the whole pole.

6. If he lost  $\frac{2}{9}$ , he must have sold it for  $\frac{7}{9}$  of what it cost. 47 is  $\frac{7}{9}$  of  $60\frac{2}{9}$ . Ans. 60 dollars and  $42\frac{2}{9}$  cents.

*Miscellaneous Examples.*

1. The shadow of the staff is  $\frac{4}{5}$  of the length of the staff; therefore the shadow of the pole is  $\frac{4}{5}$  of the length of the pole. 67 is  $\frac{4}{5}$  of  $83\frac{3}{4}$ . Ans.  $83\frac{3}{4}$  feet.

2. 9 gallons remain in the cistern in 1 hour. It will be filled in 10 hours and  $\frac{7}{9}$ ;  $\frac{7}{9}$  of 60 minutes are  $46\frac{2}{9}$  minutes and  $\frac{2}{9}$ ;  $\frac{2}{9}$  of 60 seconds are 40 seconds. Ans. 10 hours, 46 minutes, 40 seconds.

10. Find  $\frac{2}{5}$  of 33, and subtract it from 17. Ans.  $3\frac{1}{5}$ .

11. It will take 3 times 10 yards.

13. 5 is  $\frac{5}{3}$  of 3; it will take  $\frac{5}{3}$  as much. Or, 7 yards, 5 quarters wide, are equal to 35 yards 1 quarter wide, which is equal to  $11\frac{2}{3}$  yards that is 3 quarters wide.

15.  $\frac{2}{5}$  of 37 dollars.

16.  $\frac{3}{4}$  as much.

## SECTION XII.

THE examples in this section are performed in precisely the same manner as those in the sections to which they refer. All the difficulty consists in comprehending that fractions expressed in figures signify the same thing as when expressed in words. Make the pupil express them in words, and all the difficulty will vanish. Let particular attention be paid to the explanations of fractions given in this section.

VIII. A. 6. In 7 how many  $\frac{1}{6}$ ? expressed in words, is in 7 how many sixths? *Ans.*  $\frac{4}{6}$ .

14. Reduce  $8\frac{3}{10}$  to an improper fraction; that is, in 8 and 3 tenths how many tenths? *Ans.*  $\frac{83}{10}$ .

B. 8.  $\frac{23}{7}$  are how many times 1? That is, in 23 sevenths how many whole ones? *Ans.*  $3\frac{2}{7}$ .

IX. B. 3. How much is 5 times  $6\frac{4}{7}$ ? That is, how much is 5 times 6 and 4 sevenths? *Ans.*  $32\frac{6}{7}$ .

V. & X. 15. What is  $\frac{5}{8}$  of 27? That is, what is 5 eighths of 27? *Ans.*  $16\frac{3}{8}$ .

VI. & XI. A. 8.  $7\frac{6}{7}$  is  $\frac{1}{8}$  of what number? That is, 7 and 6 sevenths is 1 eighth of what number? *Ans.*  $62\frac{6}{7}$ .

B. 4. 12 is  $\frac{3}{7}$  of what number? That is, 12 is 3 sevenths of what number? *Ans.* 28.

12. 4 is  $\frac{3}{5}$  of what number? That is, 4 is 3 fifths of what number? *Ans.*  $6\frac{2}{3}$

## SECTION XIII.

THE operations in this section are the reducing of fractions to a common denominator, and the addition and subtraction of fractions. The examples will generally show what is to be done, and how it is to be done.

4. It will readily be seen that  $\frac{1}{2}$  and  $\frac{1}{4}$  are  $\frac{3}{4}$ .

25. In the fourth square of the second row, it will be seen that 1 half is  $\frac{4}{8}$ ; and in the second square of the fourth row,  $\frac{1}{4}$  is  $\frac{2}{8}$ , both together make  $\frac{6}{8}$  and  $\frac{1}{8}$  make  $\frac{7}{8}$ .

27.  $\frac{3}{4}$  is the same as  $\frac{6}{8}$ .

When these questions are performed in the mind, the pupil will explain them as follows. He will probably do it without assistance. Twenty twentieths make one whole

one.  $\frac{1}{4}$  of 20 is 5, and  $\frac{2}{5}$  of 20 is 8, and  $\frac{1}{10}$  of 20 is 2; therefore  $\frac{1}{4}$  is  $\frac{5}{20}$ ,  $\frac{2}{5}$  is  $\frac{8}{20}$ , and  $\frac{1}{10}$  is  $\frac{2}{20}$ . All the examples should be explained in the same manner.

45. One whole one is  $\frac{5}{5}$ , one eighth of  $\frac{5}{5}$  is  $\frac{7}{8}$ .  $\frac{3}{8}$  is 3 times as much, which is  $\frac{2}{5}$ .

51. 1 half is  $\frac{4}{8}$ , and  $\frac{1}{4}$  is  $\frac{2}{8}$ , which added together make  $\frac{6}{8}$ .

61.  $\frac{2}{5}$  is  $\frac{8}{20}$ ,  $\frac{1}{10}$  is  $\frac{2}{20}$ ,  $\frac{1}{4}$  is  $\frac{5}{20}$ , which added together make  $\frac{15}{20}$ .

67.  $\frac{2}{3}$  is  $\frac{8}{12}$ ,  $\frac{3}{4}$  is  $\frac{9}{12}$ , which added together make  $\frac{17}{12}$ ; from  $\frac{17}{12}$  take  $\frac{5}{12}$ , and there remains  $\frac{12}{12}$ , or 1.

82. It will be easily perceived that these examples do not differ from those in the first part of this section, except in the language used. They must be reduced to a common denominator, and then they may be added and subtracted as easily as whole numbers.  $\frac{2}{3}$  is  $\frac{4}{6}$ , and  $\frac{2}{3}$  is  $\frac{4}{6}$ , and both together make  $\frac{8}{6}$ , or  $1\frac{2}{3}$ .

86.  $\frac{1}{3}$  is  $\frac{2}{6}$ , and  $\frac{1}{2}$  is  $\frac{3}{6}$ . If  $\frac{2}{6}$  be taken from  $\frac{3}{6}$ , there remains  $\frac{1}{6}$ .

B. This article contains only a practical application of the preceding.

3. This example and some of the following contain mixed numbers, but they are quite as easy as the others. The whole numbers may be added separately, and the fractions reduced to a common denominator, and then added as in other cases, and afterwards joined to the whole numbers. 6 and 2 are 8; 1 half and  $\frac{1}{2}$  are  $\frac{5}{2}$ , making in the whole  $8\frac{5}{2}$  bushels.

5. 6 and 2 are 8;  $\frac{2}{3}$ , and  $\frac{1}{2}$ , and  $\frac{3}{4}$  are  $\frac{17}{12}$ , or  $1\frac{5}{12}$ , which joined with 8 make  $9\frac{5}{12}$ .

C. It is difficult to find examples which will aptly illustrate this operation. It can be done more conveniently by the instructor. Whenever a fraction occurs, which may be reduced to lower terms, if it be suggested to the pupil, he will readily perceive it and do it. This may be done in almost any part of the book, but more especially after studying the 13th section. Perhaps it would be as well to omit this article the first time the pupil goes through the book, and, after he has seen the use of the operation, let him study it.

## SECTION XIV.

A. THIS section contains the division of fractions by whole numbers, and the multiplication of one fraction by another. Though these operations sometimes appear to be division, and sometimes multiplication, yet there is actually no difference in the operations.

The practical examples will generally show how the operations are to be performed, but it will be well to illustrate the operation for young pupils.

1 and 2.  $\frac{1}{2}$  of  $\frac{1}{2}$  is  $\frac{1}{4}$  of the whole.

3 and 4.  $\frac{1}{2}$  of  $\frac{1}{3}$  is  $\frac{1}{6}$ .

16 and 17.  $\frac{1}{3}$  of  $\frac{1}{5}$  is  $\frac{1}{15}$  of the whole.

33. Since  $\frac{3}{4}$  of a share signify 3 parts of a share, it is evident that  $\frac{1}{3}$  of the three parts is 1 part, that is,  $\frac{1}{4}$ .

39.  $\frac{9}{7}$  signify 9 pieces or parts, and it is evident that  $\frac{1}{3}$  of 9 parts is 3 parts, that is,  $\frac{3}{7}$ .

43. We cannot take  $\frac{1}{3}$  of 5 pieces, therefore we must take  $\frac{1}{3}$  of  $\frac{1}{6}$ , which is  $\frac{1}{18}$ , and  $\frac{5}{6}$  is 5 times as much as  $\frac{1}{6}$ , therefore  $\frac{1}{3}$  of  $\frac{5}{6}$  is  $\frac{5}{18}$ .

78.  $8\frac{2}{5}$  is  $\frac{42}{5}$ ,  $\frac{1}{6}$  of  $\frac{42}{5}$  is  $\frac{7}{5}$ .

79.  $8\frac{4}{7}$  is  $\frac{60}{7}$ ,  $\frac{1}{7}$  of  $\frac{60}{7}$  is  $\frac{60}{49}$ , consequently,  $\frac{1}{7}$  of  $6\frac{0}{4}$  is  $\frac{60}{49}$ , or  $1\frac{11}{49}$ .

86. We may say  $\frac{1}{3}$  of  $8\frac{4}{9}$  is 2, and  $2\frac{4}{9}$  over, then  $2\frac{4}{9}$  is  $\frac{22}{9}$ , and  $\frac{1}{3}$  of  $\frac{22}{9}$  is  $\frac{22}{27}$ ; hence  $\frac{1}{3}$  of  $8\frac{4}{9}$  is  $2\frac{22}{27}$ .

90.  $\frac{1}{7}$  of  $18\frac{3}{5}$  is  $2\frac{23}{35}$ , and  $\frac{3}{7}$  is 3 times as much, or  $7\frac{34}{35}$ .

B. 4. It would take 1 man 4 times  $9\frac{3}{4}$ , or  $37\frac{5}{4}$  days, and 7 men would do it in  $\frac{1}{7}$  of that time, that is, in  $5\frac{19}{28}$  days.

## SECTION XV.

A. THIS section contains the divisions of whole numbers by fractions, and fractions by fractions.

1. Since there are  $\frac{6}{3}$  in 2 it is evident that he could give them to 6 boys if he gave them  $\frac{1}{3}$  apiece; but, if he gave them  $\frac{2}{3}$  apiece, he could give them to only one half as many, or 3 boys.

5. If  $\frac{1}{5}$  of a barrel would last them one month, it is evident that 4 barrels would last 20 months; but since it takes  $\frac{2}{5}$  of a barrel, it will last them but one half as long, or 10 months.

7.  $6\frac{3}{4}$  is  $2\frac{7}{4}$ . If  $\frac{1}{4}$  of a bushel would last a week,  $6\frac{3}{4}$  bushels would last 27 weeks; but, since it takes  $\frac{3}{4}$  it will last only  $\frac{1}{3}$  of the time, or 9 weeks.

13. If he had given  $\frac{1}{2}$  of a bushel apiece, he might have given it to 17 persons; but, since he gave 3 halves apiece, he could give it to only  $\frac{1}{3}$  of that number, that is, to 5 persons, and he would have 1 bushel left, which would be  $\frac{2}{3}$  of enough for another.

23.  $9\frac{3}{7}$  is  $6\frac{6}{7}$ , and  $1\frac{1}{7}$  is  $\frac{1}{7}$ . If it had been only  $\frac{1}{7}$  of a dollar a barrel, he might have bought 66 barrels for  $9\frac{3}{7}$  dollars; but, since it was  $\frac{1}{7}$  a barrel, he could buy only  $\frac{1}{11}$  of that number, that is, 6 barrels.

25 and 26. *Ans.*  $9\frac{1}{4}$ .

31.  $4\frac{1}{5}$  is  $2\frac{1}{5}$ , and  $9\frac{3}{5}$  is  $4\frac{3}{5}$ . Now  $\frac{1}{5}$  is contained in  $4\frac{3}{5}$  48 times, and  $2\frac{1}{5}$  is contained only  $\frac{1}{2}$  part as many times, consequently only  $2\frac{6}{11}$  or  $2\frac{2}{7}$ .

B. 1.  $\frac{1}{2}$  is  $\frac{5}{10}$ ; consequently 5 pounds can be bought for  $\frac{1}{2}$  of a dollar.

3.  $\frac{3}{4}$  is  $\frac{9}{12}$ , and  $\frac{1}{6}$  is  $\frac{2}{12}$ . If he had given only  $\frac{1}{12}$  apiece, he could have given it to 9 persons; but since he gave  $\frac{1}{12}$  he could give it to only 1 half as many, or  $4\frac{1}{2}$  persons.

5.  $\frac{1}{7}$  is  $\frac{3}{21}$ , and  $\frac{2}{3}$  is  $\frac{14}{21}$ . If a pound had cost  $\frac{1}{21}$  of a dollar, 14 pounds could be bought for  $\frac{1}{21}$  of a dollar; but since it costs  $\frac{2}{21}$ , only  $\frac{1}{3}$  as many can be bought; that is,  $4\frac{2}{3}$  pounds.

9.  $\frac{2}{5}$  is  $\frac{10}{40}$ , and  $1\frac{5}{8}$  is  $\frac{65}{40}$ . If a bushel had cost  $\frac{1}{40}$  of a dollar, 65 bushels might have been bought; but, since it cost  $\frac{1}{16}$ , only  $\frac{1}{16}$  part as much could be bought; that is  $4\frac{1}{16}$  bushels.

12.  $\frac{2}{3}$  is  $\frac{4}{18}$ , and  $\frac{5}{6}$  is  $\frac{15}{18}$ ;  $\frac{1}{18}$  is contained in  $\frac{15}{18}$  15 times, but  $\frac{4}{18}$  is contained only  $\frac{1}{4}$  as many times; that is,  $3\frac{3}{4}$  times.

#### MISCELLANEOUS EXAMPLES.

5.  $\frac{3}{5}$  of a penny is  $\frac{3}{5}$  of 4 farthings. *Ans.*  $2\frac{2}{5}$  farthings.

6.  $\frac{5}{6}$  of 12 pence. *Ans.* 10 pence.

7.  $\frac{2}{5}$  of 4 quarters is 2 quarters and  $\frac{2}{5}$  of a quarter;  $\frac{2}{5}$  of a quarter is  $\frac{2}{5}$  of 4 nails, which is  $1\frac{2}{5}$  nails. *Ans.* 2 quarters,  $1\frac{2}{5}$  nails.

13.  $\frac{5}{8}$  of 24 hours is 15 hours.

14.  $\frac{3}{4}$  of 24 hours is 14 hours and  $\frac{2}{4}$  of an hour;  $\frac{2}{4}$  of 60 minutes is 24 minutes. *Ans.* 14 hours, 24 minutes.

28. There being 4 farthings in a penny, 1 farthing is  $\frac{1}{4}$  part of a penny.

30. 3 farthings is  $\frac{3}{4}$  of a penny.

31. 1 penny is  $\frac{1}{12}$  of a shilling, because there are 12 pence in a shilling.

34. 5 pence is  $\frac{5}{12}$  of a shilling.

41. 1 shilling is  $\frac{1}{20}$  of a pound.

43. 3 shillings is  $\frac{3}{20}$  of a pound.

48. 1 farthing is  $\frac{1}{48}$  of one shilling.

49. 2 farthings is  $\frac{1}{24}$ , or  $\frac{1}{4}$  of a shilling. 5 farthings is  $\frac{5}{48}$  of a shilling.

51. 1 penny is  $\frac{1}{40}$  of 1 pound. 7 pence is  $\frac{7}{40}$  of £1.

59. 3s. 5d. is 41 pence, which is  $\frac{41}{40}$  of £1.

75. 1 nail is  $\frac{1}{16}$  of a yard. 5 nails is  $\frac{5}{16}$  of a yard.

89. 1 oz. is  $\frac{1}{16}$  of 1 lb. 15 oz. is  $\frac{15}{16}$  of 1 lb.

91. 1 lb. is  $\frac{1}{25}$  of 1 quarter. 9 lbs. is  $\frac{9}{25}$  of 1 quarter.

100. At the end of 1 hour they would be 7 and  $\frac{4}{5}$  miles apart. In 7 hours, 7 times  $7\frac{4}{5}$ , which is  $54\frac{2}{5}$  miles.

121. This is the principle of fellowship; 3 shillings were paid; one paid  $\frac{1}{3}$ , the other  $\frac{2}{3}$ .

122. One paid  $\frac{3}{8}$ , the other  $\frac{5}{8}$ .

123. 20 dollars were paid in the whole; one paid  $\frac{6}{20}$ , another  $\frac{5}{20}$ , and the third  $\frac{9}{20}$ .

126. 3, and 4, and 5 are 12. The first put in  $\frac{3}{12}$ ; the second  $\frac{4}{12}$ ; the third  $\frac{5}{12}$ .

129. 4 dollars for 2 months is the same as 8 dollars for 1 month; 3 dollars for 3 months is the same as 9 dollars for 1 month; and 2 dollars for 4 months is the same as 8 dollars for 1 month. The question is the same as if A had put in 8 dollars, B 9 dollars, and C 8 dollars. A must have  $\frac{8}{25}$ , B  $\frac{9}{25}$ , and C  $\frac{8}{25}$  of 100 dollars.

131. A's money was in 4 times as long as C's. It is the same as if A had put in 8 dollars for the same time, and B 8 dollars for the same time. A must have  $\frac{8}{22}$ , B  $\frac{8}{22}$ , and C  $\frac{6}{22}$  of 88 dollars.

The examples 127, 128, 129, 130, and 131, are double or compound fellowship.

139. The interest of 50 dollars for 1 year and 6 months is 4 dollars and 50 cents, and for 1 month it is 25 cents. The interest of 7 dollars for 19 months (a dollar is  $\frac{1}{2}$  of a cent a month) is  $66\frac{1}{2}$  cents. The whole amounts to 5 dollars and  $41\frac{1}{2}$  cents.

140. The interest of 200 dollars for  $1\frac{1}{2}$  year is 16 dollars. The interest of 67 dollars is 67 cents for every 2 months, for 16 months it will be 8 times 67 cents, which



are 5 dollars and 36 cents. The whole interest is 21 dollars and 36 cents.

143. The interest of 100 dollars for  $2\frac{1}{4}$  years is 13 dollars and 50 cents. The interest of 100 dollars for 60 days would be 1 dollar, the interest for 20 days will be  $\frac{1}{3}$  of a dollar, or  $33\frac{1}{3}$  cents. The interest of 1 dollar for  $2\frac{1}{4}$  years is  $13\frac{1}{2}$  cents; for 10 dollars the interest would be 1 dollar and 35 cents, and for 30 dollars, 4 dollars and 5 cents. The interest of 7 dollars for  $2\frac{1}{4}$  years is 7 times  $13\frac{1}{2}$  cents, or  $94\frac{1}{2}$  cents. The interest of 37 dollars for 60 days would be 37 cents, and for 20 days  $\frac{1}{3}$  of 37 cents, or  $12\frac{1}{3}$  cents. The whole interest is 18 dollars and  $95\frac{1}{3}$  cents.

146. They would both together do  $\frac{3}{4}$  of the work in 1 day, and it would take them  $\frac{1}{3}$  of a day to do the other  $\frac{1}{4}$ .  
*Ans.*  $1\frac{1}{3}$  day.

149. They both together consume  $\frac{1}{2}$  of a bushel in a week, but the woman alone consumes only  $\frac{1}{3}$  of a bushel in a week. That is, they both together consume  $\frac{5}{10}$  in a week, but the woman alone only  $\frac{2}{10}$ ; consequently the man alone would consume  $\frac{3}{10}$ ; and a bushel would last him  $3\frac{1}{3}$  weeks.

152. A and B can build  $\frac{1}{3}$  of it in 1 day; A, B, and C, can build  $\frac{1}{2}$  of it in 1 day; the difference between  $\frac{1}{2}$  and  $\frac{1}{3}$  is  $\frac{1}{6}$ ; therefore C can build  $\frac{1}{6}$  of it in 1 day; and it would take him  $13\frac{1}{3}$  days to build it alone.

164. Find how much they might eat in a day, in order to make it last 1 month, and then it will be easy to find how much they may eat in a day, to make it last 11 months.

167. The money is 7 parts of the whole, and the purse 1 part; consequently the money is  $\frac{7}{8}$  and the purse  $\frac{1}{8}$  of 16.

170. He gave 1 part for the apple, 2 parts for the orange, and 4 parts for the melon. These make 7 parts. The apple 3 cents, the orange 6 cents, and the melon 12 cents.

175. If to a number half of itself be added, the sum is  $\frac{3}{2}$  of that number; hence subtract  $2\frac{1}{2}$  from 100, and the remainder is  $\frac{2}{3}$  of the number of geese that he had.

180. This must be reduced to 6ths. 1 half is  $\frac{3}{6}$ , and  $\frac{1}{3}$  is  $\frac{2}{6}$ , and the number itself is  $\frac{6}{6}$ . If therefore to the whole number its half and its third be added, the sum will be  $\frac{11}{6}$ ; hence, 77 is  $\frac{6}{11}$  of the number.

181.  $\frac{1}{2}$  is  $\frac{2}{4}$ ; therefore if to a number  $\frac{1}{2}$  and  $\frac{1}{4}$  of itself be added, the whole number will be  $\frac{7}{4}$ ; but when 18 more is added to  $\frac{7}{4}$ , the first number is doubled; that is, the number is  $\frac{3}{4}$  of the first number; therefore 18 is  $\frac{1}{4}$  of the number.

# A R I T H M E T I C .

## P A R T   I I I .

### W R I T T E N   A R I T H M E T I C .

#### N O T A T I O N   A N D   N U M E R A T I O N .

**1.** Instead of writing the names of numbers, it is usual to express them by particular characters, called *figures*.

One	is written	1	Twenty-six is written	26
Two	“	2	Twenty-seven “	27
Three	“	3	Twenty-eight “	28
Four	“	4	Twenty-nine “	29
Five	“	5	Thirty “	30
Six	“	6	Thirty-one “	31
Seven	“	7	Forty “	40
Eight	“	8	Fifty “	50
Nine	“	9	Sixty “	60
Ten	“	10	Seventy “	70
Eleven	“	11	Eighty “	80
Twelve	“	12	Ninety “	90
Thirteen	“	13	One hundred “	100
Fourteen	“	14	One hundred and	
Fifteen	“	15	one “	101
Sixteen	“	16	One hundred and	
Seventeen	“	17	two “	102
Eighteen	“	18	One hundred and	
Nineteen	“	19	ten “	110
Twenty	“	20	One hundred and	
Twenty-one	“	21	twenty “	120
Twenty-two	“	22	Two hundred “	200
Twenty-three	“	23	Three hundred “	300
Twenty-four	“	24	One thousand “	1000
Twenty-five	“	25	Ten thousand “	10,000

2. When several figures stand side by side, the value of each figure depends on its place as counted from the right towards the left. A figure standing in the first place, signifies so many *units*, or ones; the same figure, in the second place, signifies so many *tens*; in the third place, *hundreds*; in the fourth place, *thousands*; in the fifth place, *tens of thousands*; and in the sixth place, *hundreds of thousands*. Therefore every time a figure is removed one place to the left, its value is made tenfold, as may be seen in the following table :

Hundreds of thousands. Ten of thousands. Thousands. Hundreds. Tens. Units.	111,111, read One hundred and eleven thousand, one 4 " Four. [hundred and eleven. 49 " Forty-nine. 496 " Four hundred and ninety-six. [five. 4,965 " Four thousand nine hundred and sixty- 49,652 " Forty-nine thousand six hundred and fifty-two. 496,527 " Four hundred and ninety-six thousand five hundred and twenty-seven.
---	--

3. Let the pupil read the following numbers :

1.	34	5.	142	9.	6,744	13.	11,504
2.	76	6.	279	10.	8,329	14.	50,603
3.	68	7.	758	11.	4,960	15.	124,769
4.	95	8.	423	12.	9,080	16.	784,984

4. Let the pupil express the following numbers in figures :

1. Seventy-eight.
2. Ninety.

3. One hundred and fifty-six.
4. Three hundred and eight.
5. One thousand four hundred and sixty-nine.
6. Five thousand and two.
7. Seventy-seven thousand and eighty-four.
8. Forty thousand seven hundred and twenty-two.
9. Five hundred and sixty-six thousand one hundred and fifty.
10. Six hundred thousand.

## ADDITION.

**5.** 5 and 4 and 7 are how many? This is called a question in *addition*. We put together, or *add* the numbers 5, 4 and seven, to find their *sum* or *amount*. Thus, the sum of 5 and 4 and 7 is 16.

Ex. 1. What is the sum of 46 and 37?

It is the most convenient to write the numbers in order, units under units, tens under tens, etc.; 46 then beginning with the units, we find that 6 units and 7 units are 13 units, or 1 ten and 3 units. We write down the 3 units under the 83 units and add the 1 ten to the other tens; 1 (ten) and 4 (tens) and 3 (tens) make 8 (tens) which written with the 3, makes 83.

Ex. What is the sum of 736 and 875 and 394?

Adding the units we find 6 and 5 are 11, and 4 are 15, or 1 ten and 5 units. Writing the 5 under the column of units, we reserve the 1 ten, and add it to the tens of the next column; thus, 1 and 3 are 4, and 7 are 11, and 9 are 20 (tens) or 2 hundreds, and 0 tens. We write the 0 under the column of tens, and add the 2 (hundreds) to the column of hundreds; thus, 2 and 7 are 9, and 8 are 17, and 3 are 20 (hundreds,) which being the sum of the last column we write down. The answer, therefore, is 2005.

**6.** Add the following:

3.	4.	5.	6.	7.	8.	9.	10.	11.
15	33	8	7	19	28	45	56	69
4	5	9	5	5	7	8	7	5
—	—	—	—	—	—	—	—	—

12.	13.	14.	15.	16.	17.	18.	19.	20.
35	17	75	35	62	84	93	60	80
42	50	22	26	79	45	58	30	50
—	—	—	—	—	—	—	—	—

21.	22.	23.	24.	25.	26.	27.	28.
27	60	47	234	311	435	731	478
32	33	55	362	525	924	311	298
56	99	72	403	293	808	579	527
—	—	—	—	—	—	—	—

29.	30.	31.	32.	33.	34.
500	7667	7543	1812	4648	789
314	1235	1858	1732	4620	2253
409	5555	1776	2712	8665	226
—	—	1492	3333	452	45
		—	—	—	—

35.	36.	37.	38.	39.
990	8	6540	38,924	468
6209	295	6030	67,798	26,792
2316	17	2709	54,554	15,864
2201	7897	5967	33,333	80,112
—	—	—	—	—

7. 40. Add together 39, 67, 92, 43, 84, 51.  
 41. Add together 270, 489, 126, 46.  
 42. Add together 2368, 235, 496, 1736.  
 43. Add together 66,476, 801, 4009, 32, 127.

8. 44. A merchant bought 4 pieces of cloth; for the first piece he gave 53 dollars; for the second, 78 dollars; for the third, 68 dollars; and for the fourth, 67 dollars. How much did he give for the whole?

45. In an orchard there are 22 peach trees, 95 apple trees, 17 pear trees, and 56 plum trees. How many trees in the orchard?

46. A man bought four horses; for the first he gave 84 dollars; for the second, 150 dollars; for the third,

475 dollars; and for the fourth, 526 dollars. How much did he give for all the horses?

47. In Mr. Green's school there are 810 scholars; in Mr. White's, 597 scholars; in Mr. Brown's, 956 scholars; in Mr. Blue's, 776 scholars; in Mr. Black's, 572 scholars; and in Mr. Crimson's, 731 scholars. How many scholars in these six schools?

48. A gentleman, building a house, paid the mason 2,964 dollars, the carpenter 5,723 dollars, the plasterer 625 dollars, and the painter 354 dollars. How much did the whole house cost?

### SUBTRACTION.

9. 9 less seven are how many? This is called a question in *Subtraction*. We take away, or *subtract*, 7 from 9 to find the difference or *remainder*, which is 2.

Ex. 1. From 476 take 245.

Hundreds.	Tens.	Units.	It is most convenient to write the less number under the greater, units under units, tens under tens, etc., as in addition. Beginning at the units, we say 5 from 6 leaves 1, which we write
4	7	6	under the units; then 4 (tens) from 7 (tens) leaves 3 (tens,) which we write under the tens;
2	4	5	and 2 (hundreds) from 4 (hundreds) leaves 2 (hundreds,) which we write down, and the
—	—	—	answer is 231.
2	3	1	

Ex. 2. From 939 take 458.

Hundreds.	Tens.	Units.	In this example we take 8 from 9 and there remains 1, which we write down; but since we cannot take 5 (tens) from 3 (tens), we borrow 1 (hundred,) or 10 (tens) from the 9 (hundreds,) which joined with the 3 (tens,) makes 13 (tens;) then 5 (tens) from 13 (tens) leaves 8 (tens,) which we write down. As one of the 9 (hundreds) has been put with the 3 (tens,) there remains but 8 (hundreds.) Therefore we say 4 (hundreds) from 8 (hundreds) leaves 4 (hundreds.) This written down makes, the answer 481.
9	3	9	
4	5	8	
—	—	—	
4	8	1	

	3.	4.	5.	6.	7.	8.	9.
From	18	58	35	59	68	82	95
Take	4	6	12	33	34	51	75
	<hr/>	<hr/>	<hr/>	<hr/>	<hr/>	<hr/>	<hr/>
Ans.	14			26			20

	10.	11.	12.	13.	14.	15.
From	285	467	9685	7856	8744	2607
Take	74	46	5473	5722	4302	1405
	<hr/>	<hr/>	<hr/>	<hr/>	<hr/>	<hr/>

	16.	17.	18.	19.	20.	21.	22.
From	12	13	19	16	24	56	92
Take	6	5	9	7	8	7	4
	<hr/>	<hr/>	<hr/>	<hr/>	<hr/>	<hr/>	<hr/>

	23.	24.	25.	26.	27.	28.	29.
From	30	53	46	33	64	92	84
Take	20	10	27	25	29	88	59
	<hr/>	<hr/>	<hr/>	<hr/>	<hr/>	<hr/>	<hr/>

	30.	31.	32.	33.	34.	35.	36.
From	134	244	252	888	2236	3456	9927
Take	25	73	171	459	1145	2246	6090
	<hr/>	<hr/>	<hr/>	<hr/>	<hr/>	<hr/>	<hr/>

37. From 96 take 58.

38. From 4785 take 3679.

39. From 8344 take 5324.

40. From 10982 take 6470.

41. From 984 take 176.

42. From 4788 take 967.

43. From 7898 take 6898.

44. From 40816 take 5622.

**10.** 45. In a certain garden there were 86 rose bushes, but the worms destroyed 33 of them. How many were left?

46. A man is 66 years of age, and his son 22. How old was the man at the birth of his son?

47. A farmer had 240 sheep; but, one night, wolves gained admittance to the fold, and carried off 121. How many sheep were left?

48. Harry had 84 cents given him to buy some marbles with, but on his way to the store he lost 25 cents. How many cents had he left?

49. A girl was carrying 72 eggs to market, but she let the basket fall, and 39 eggs were broken. How many had she left?

50. In an army there were 14,642 men, but in a battle 789 men were killed or wounded. How many serviceable men were there left?

## MULTIPLICATION.

**11.** 7 times 5 are how many? This is called a question in *multiplication*. To obtain the answer we repeat or *multiply* the number 5, 7 times; thus, 7 times 5 are 35.

Ex. 1. Multiply 564 by 7.

Writing the numbers thus, the 7 under the units, we say, 7 times 4 (units) are 28 (units,) or 2 tens and 8 units. We write down the 8 (units) and reserve the 2 (tens;) then 7 times 6 (tens) are 42 (tens) and the 2 (tens) which we reserved are 44 (tens) or 4 hundreds and 4 tens. We write the 4 (tens) and reserve the 4 (hundreds;) then, 7 times 5 (hundreds) are 35 (hundreds,) which, with the 4 (hundreds) we reserved, are 39 (hundreds) or 3 thousands and 9 hundreds. This we write down, and the answer is 3948.

	2.	3.	4.	5.	6.	7.	8.
Multiply	8	9	13	23	43	51	65
By	3	5	2	3	6	9	7
	—	—	—	—	—	—	—

	9.	10.	11.	12.	13.	14.
Multiply	143	424	511	821	410	821
By	2	4	7	6	5	4
	—	—	—	—	—	—

	15.	16.	17.	18.
Multiply	813	962	1243	2104
By	3	8	2	4
	—	—	—	—

	19.	20.	21.	22.
Multiply	5134	7110	8947	4355
By	6	7	9	8
	—	—	—	—



## 23. Multiply 129 by 35.

Thousands.	Hundreds.	Tens.	Units.
	1	2	9
	3	5	
	—		
	6	4	5
	3	8	7
	—		
	4	5	15

Writing the numbers in order, units under units, and tens under tens, we multiply, first, by the 5 units, and write the result in its proper place, as when we multiplied by one figure. We multiply next by the 3 (tens) and write the first figure of the result in the place of tens, because units multiplied by tens ought to produce tens. Then adding together the results obtained by multiplying by the 5 (units) and 3 (tens,) their sum will be 4515, which is the answer.

	24.	25.	26.	27.	28.	29.	30.
Multiply	34	35	48	45	99	612	844
By	23	25	32	44	56	54	29
	—	—	—	—	—	—	—
	102						
	68						
	—						
Ans.	782						

	31.	32.	33.	34.	35.	36.	37.
Multiply	676	434	467	548	1835	2972	5963
By	76	322	212	403	768	256	4678
	—	—	—	—	—	—	—

38. Multiply 816 by 6.

39. Multiply 363 by 48.

40. Multiply 846 by 65.

41. Multiply 152 by 87.

42. Multiply 2523 by 47.

43. Multiply 682 by 746.

44. Multiply 8422 by 186.

45. Multiply 3107 by 761.

46. How much will 48 barrels of flour cost at 8 dollars a barrel?

47. In a room there are 9 windows with 16 panes of glass in each. How many panes of glass in all the windows?

48. If a man receives 47 dollars a month, how much will he receive in twelve months?

49. In a certain regiment there are 13 companies, and 126 men in each company. How many men in the regiment?

50. There are 365 days in a year. How many days in 19 years?

## DIVISION.

**12.** 24 are how many times 8? This is called a question in *division*, because we *divide*, or separate, the larger number into as many equal parts as there are units in the smaller number.

**13.** The number to be divided is called the *dividend*; the number by which we divide, the *divisor*; and the result, the *quotient*. If anything is left after the division, it is called the *remainder*.

**14.** EX. 1. Divide 584 by 4.

Divisor, 4) 584 Dividend. We write down the dividend, 584, and draw a line beneath it. Write the divisor, 4, at the left of the dividend, and draw a curved line between them. We first find how many times 4 is contained in 5, the first figure of the dividend; it is contained 1 time and there is 1 remainder. We write the 1 under the 5, and suppose the remainder, 1, written at the left of the next figure, 8, making the number 18. 4 is contained in 18, 4 times, with 2 remainder. The 4 we write below, and suppose the 2 written before the next figure, 4, making it 24. 4 is contained in 24, 6 times, without remainder. We write the 6 underneath, and the division is completed.

Division performed in this way is called *short division*.

**15.** Perform in this way the following examples :

<sup>2.</sup> Divisor, 3)9 <hr style="width: 10%; margin: 0 auto;"/> 3 Quotient.	<sup>3.</sup> 2)26 <hr style="width: 10%; margin: 0 auto;"/>   	<sup>4.</sup> 3)36 <hr style="width: 10%; margin: 0 auto;"/>   	<sup>5.</sup> 4)88 <hr style="width: 10%; margin: 0 auto;"/>   	<sup>6.</sup> 5(15 3)18 <hr style="width: 10%; margin: 0 auto;"/>   	<sup>7.</sup> 3)18 <hr style="width: 10%; margin: 0 auto;"/>   
<sup>8.</sup> 7(21 <hr style="width: 10%; margin: 0 auto;"/>	<sup>9.</sup> 9)36 <hr style="width: 10%; margin: 0 auto;"/>	<sup>10.</sup> 6)48 <hr style="width: 10%; margin: 0 auto;"/>	<sup>11.</sup> 8)72 <hr style="width: 10%; margin: 0 auto;"/>	<sup>12.</sup> 9)81 <hr style="width: 10%; margin: 0 auto;"/>	<sup>13.</sup> 4)40 <hr style="width: 10%; margin: 0 auto;"/>

14. <u>6)72</u>	15. <u>2)444</u>	16. <u>4)256</u>	17. <u>3)963</u>	18. <u>7)847</u>	19. <u>9)279</u>
20. <u>5)6825</u>	21. <u>6)4650</u>	22. <u>9)9972</u>	23. <u>4)4484</u>	24. <u>8)1312</u>	

**16.** When the divisor consists of two or more figures, it is more convenient to perform the operation in the following manner :

25. Divide 6432 by 12.

Divisor. Dividend. Quotient.

$$\begin{array}{r}
 12 \overline{) 6432} \quad (536 \\
 \underline{60} \phantom{00} \\
 43 \phantom{00} \\
 \underline{36} \phantom{00} \\
 72 \phantom{00} \\
 \underline{72} \\
 0
 \end{array}$$

Write the dividend, and draw a curved line on both sides. We first inquire how many times 12 is contained in 64, the first two figures of the dividend. We find that it is contained 5 times. We place the 5 at the right of the dividend, as the first figure of the quotient, and then, multiplying the divisor, 12, by 5, we

obtain the number 60, which we write under the 64 of the dividend, and subtract. To the remainder, 4, we annex 3, the next figure of the dividend, and find how many times the divisor, 12, is contained in 43. We place the result, 3, at the right of the 5 in the quotient, and, multiplying the divisor by 3, we obtain 36, which we write under the 43, and subtract. To the remainder, 7, we annex the 2 of the dividend, and find how many times the divisor is contained in 72, which is 6 times. We write 6 in the quotient, and, as there is no remainder, the division is complete.

Division performed in this way is called *long division*.

**17.** Perform in this way the following examples :

26. 13)286(22	27. 15)235(	28. 17)425(	29. 13)585(
<u>26</u>			
26			
<u>26</u>			

$$\begin{array}{r} 30. \\ 16 \overline{)1168} \end{array} \quad \begin{array}{r} 31. \\ 13 \overline{)676} \end{array} \quad \begin{array}{r} 32. \\ 12 \overline{)1728} \end{array} \quad \begin{array}{r} 33. \\ 15 \overline{)2445} \end{array}$$

$$\begin{array}{r} 34. \\ 13 \overline{)3016} \end{array} \quad \begin{array}{r} 35. \\ 17 \overline{)2057} \end{array} \quad \begin{array}{r} 36. \\ 19 \overline{)2994} \end{array} \quad \begin{array}{r} 37. \\ 15 \overline{)4445} \end{array}$$

38. Divide 144 by 12.

39. Divide 224 by 15.

40. Divide 180 by 12.

41. Divide 5456 by 22.

42. Divide 1411 by 36.

43. Divide 8844 by 22.

44. If 4 cents a pound can be bought

45. If 3 dollars, how many acres can you buy?

46. If a man can walk 25 miles in a day, how long will it take him to walk 273 miles?

47. A man divided 23,796 dollars among his 6 children. How much did each receive?

48. A railroad company employed 25 workmen, and at the end of two months it took 1825 dollars to pay them. How much did each man receive?

THE END.





JOSEPH RUZICKA  
BOOKBINDERS  
BALTIMORE, MD.  
GREENSBORO, N.C.  
WASHINGTON, D.C.

